

JEE Main 2024 Mock Test 3

Time Allotted: 3 Hours

Maximum Marks: 300

- Please read the instructions carefully. You are allotted 5 minutes specifically for this purpose.

Important Instructions:

1. The test is of 3 hours duration.
 2. This test paper consists of 90 questions. Each subject (PCM) has 30 questions. The maximum marks are 300.
 3. This question paper contains **Three Parts**. **Part-A** is Physics, **Part-B** is Chemistry and **Part-C** is Mathematics. Each part has only two sections: **Section-A and Section-B**.
 4. **Section – A** : Attempt all questions.
 5. **Section – B** : Do any 5 questions out of 10 Questions.
 6. **Section-A (01 – 20)** contains 20 multiple choice questions which have **only one correct answer**. Each question carries **+4 marks** for correct answer and **–1 mark** for wrong answer.
 7. **Section-B (1 – 10)** contains 10 Numerical based questions. The answer to each question is rounded off to the nearest integer value. Each question carries **+4 marks** for correct answer and **–1 mark** for wrong answer.
-

PART - A (PHYSICS)

SECTION - A

(One Options Correct Type)

This section contains **20 multiple choice questions**. Each question has **four choices** (A), (B), (C) and (D), out of which **ONLY ONE** option is correct.

- Q1.** Surface tension of a soap bubble is $2.0 \times 10^{-2} \text{ Nm}^{-1}$. Work done to increase the radius of soap bubble from 3.5 cm to 7cm will be :

Take $\left[\pi = \frac{22}{7} \right]$

- (A) $0.72 \times 10^{-4} \text{ J}$ (B) $5.76 \times 10^{-4} \text{ J}$
(C) $9.24 \times 10^{-4} \text{ J}$ (D) $18.48 \times 10^{-4} \text{ J}$

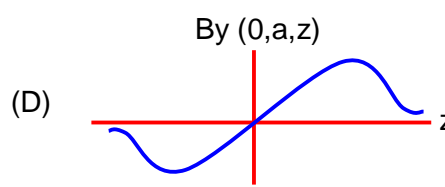
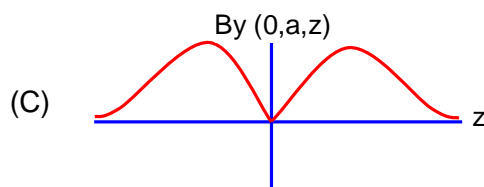
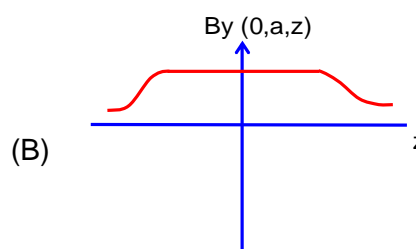
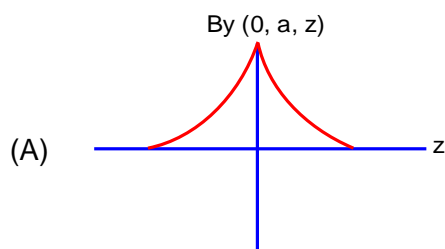
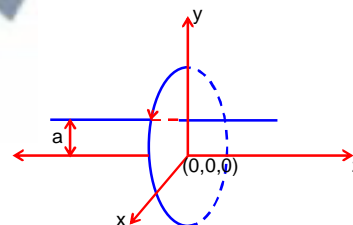
- Q2.** The threshold wavelength for photoelectric emission from a material is 5500 \AA . Photoelectrons will be emitted, when this material is illuminated with monochromatic radiation from a

- A. 75 W infra-red lamp
B. 10 W infra-red lamp
C. 75 W ultra-violet lamp
D. 10 W ultra-violet lamp

Choose the correct answer from the options given below :

- (A) C and D only (B) C only
(C) B and C only (D) A and D only

- Q3.** A single current carrying loop of wire carrying current I flowing in anticlockwise direction seen from +ve z direction and lying in xy plane is shown in figure. The plot of \hat{j} component of magnetic field (B_y) at a distance 'a' (less than radius of the coil) and on yz plane vs z coordinate looks like



Q4. Match List I with List II :

List – I (Physical Quantity)

- A. Pressure gradient
- B. Energy density
- C. Electric Field
- D. Latent heat

List – II (Dimensional Formula)

- I. $[M^0 L^2 T^{-2}]$
- II. $[M^1 L^{-1} T^{-2}]$
- III. $[M^1 L^{-2} T^{-2}]$
- IV. $[M^1 L^1 T^{-3} A^{-1}]$

Choose the correct answer from the options given below :

- (A) A – III, B – II, C – I, D – IV
- (B) A – II, B – III, C – IV, D – I
- (C) A – III, B – II, C – IV, D – I
- (D) A – II, B – III, C – I, D – IV

Q5. A bicycle tyre is filled with air having pressure of 270 kPa at 27°C. The approximate pressure of the air in the tyre when the temperature increases to 36°C is

- (A) 270 kPa
- (B) 278 kPa
- (C) 360 kPa
- (D) 262 kPa

Q6. Which of the following are true ?

- A. Speed of light in vacuum is dependent on the direction of propagation.
- B. Speed of light in a medium is independent of the wavelength of light.
- C. The speed of light is independent of the motion of the source.
- D. The speed of light in a medium is independent of intensity.

Choose the correct answer from the options given below :

- (A) B and C only
- (B) C and D only
- (C) B and D only
- (D) A and C only

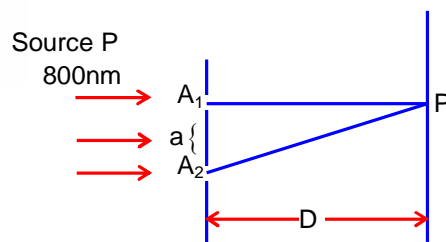
Q7. Ratio of thermal energy released in two resistors R and 3R connected in parallel in a electric circuit is :

- (A) 1 : 1
- (B) 1 : 27
- (C) 1 : 3
- (D) 3 : 1

Q8. In a Young's double slit experiment, two slits are illuminated with a light of wavelength 800nm. The line joining A_1P is perpendicular to A_1A_2 as shown in the figure. If the first minimum is detected at P, the value of slits separation 'a' will be:

The distance of screen from slits $D = 5$ cm

- (A) 0.1 mm
- (B) 0.2 mm
- (C) 0.4 mm
- (D) 0.5 mm



Q9. Two particle of equal mass 'm' move in a circle of radius 'r' under the action of their mutual gravitational attraction. The speed of each particle will be :

- (A) $\sqrt{\frac{Gm}{2r}}$
- (B) $\sqrt{\frac{Gm}{r}}$
- (C) $\sqrt{\frac{4Gm}{r}}$
- (D) $\sqrt{\frac{Gm}{4r}}$

Q10. If a radioactive element having half-life of 30 min is undergoing beta decay, the fraction of radioactive element remains undecayed after 90 min. will be

- (A) $\frac{1}{16}$ (B) $\frac{1}{8}$
 (C) $\frac{1}{2}$ (D) $\frac{1}{4}$

Q11. A stone is projected at angle 30° to the horizontal. The ratio of kinetic energy of the stone at point of projection to its kinetic energy at the highest point of flight will be –

- (A) 4 : 3 (B) 1 : 2
 (C) 1 : 4 (D) 4 : 1

Q12. Which one of the following statement is not correct in the case of light emitting diodes ?

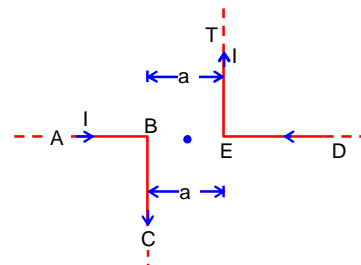

- A. It is a heavily doped p-n junction..
 B. It emits light only when it is forward biased.
 C. It emits light only when it is reverse biased.
 D. The energy of the light emitted is equal to or slightly less than the energy gap of the semiconductor used.

Choose the correct answer from the options given below :

- (A) C and D (B) C
 (C) B (D) A

Q13. The magnitude of magnetic induction at mid point O due to current arrangement as shown in Fig will be

- (A) $\frac{\mu_0 I}{4\pi a}$ (B) 0
 (C) $\frac{\mu_0 I}{\pi a}$ (D) $\frac{\mu_0 I}{2\pi a}$



Q14. In a cuboid of dimension $2L \times 2L \times L$, a charge q is placed at the centre of the surface 'S' having area of $4L^2$. The flux through the opposite surface to 'S' is given by

- (A) $\frac{q}{6\epsilon_0}$ (B) $\frac{q}{2\epsilon_0}$
 (C) $\frac{q}{3\epsilon_0}$ (D) $\frac{q}{12\epsilon_0}$

Q15. A person observes two moving trains, 'A' reaching the station and 'B' leaving the station with equal speed of 30 m/s. If both trains emit sounds with frequency 300 Hz. (Speed of sound : 330 m/s) approximate difference of frequencies heard by the person will be :

- (A) 10 Hz (B) 55 Hz
 (C) 80 Hz (D) 33 Hz

Q16. Given below are two statements: One is labeled as **Assertion A** and the other is labeled as **Reason R**.

Assertion A : If dQ and dW represent the heat supplied to the system and the work done on the system respectively. Then according to the first law of thermodynamics $dQ = dU - dW$.

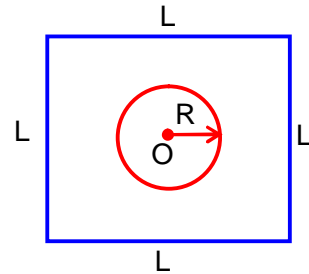
Reason R : First law of thermodynamics is based on law of conservation of energy.

In the light of the above statements, choose the correct answer from the options given below :

- (A) A is not correct but R is correct
 (B) Both A and R are correct but R is not the correct explanation of A
 (C) Both A and R are correct and R is the correct explanation of A
 (D) A is correct but R is not correct

- Q17.** A car is moving on a horizontal curved road with radius 50 m. The approximate maximum speed of car will be, if friction between tyres and road is 0.34. [take $g = 10\text{ms}^{-2}$]
- (A) 22.4 ms^{-1} (B) 13ms^{-1}
 (C) 3.4 ms^{-1} (D) 17 ms^{-1}

- Q18.** Find the mutual inductance in the arrangement, when a small circular loop of wire of radius 'R' is placed inside a large square loop of wire of side L ($L \gg R$). The loops are coplanar and their centres coincide :



- (A) $M = \frac{\sqrt{2}\mu_0 R^2}{L}$
 (B) $M = \frac{\sqrt{2}\mu_0 R}{L^2}$
 (C) $M = \frac{2\sqrt{2}\mu_0 R^2}{L}$
 (D) $M = \frac{2\sqrt{2}\mu_0 R}{L^2}$

- Q19.** If the height of transmitting and receiving antennas are 80 m each, the maximum line of sight distance will be :

Given : Earth's radius = $6.4 \times 10^6\text{ m}$

- (A) 32 km (B) 36 km
 (C) 64 km (D) 28 km

- Q20.** A block of mass m slides down the plane inclined at angle 30° with an acceleration $\frac{g}{4}$. The value of coefficient of kinetic friction will be :

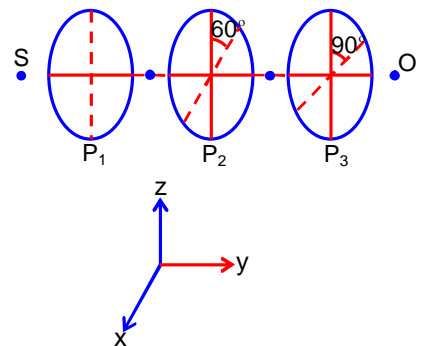
- (A) $\frac{2\sqrt{3} + 1}{2}$ (B) $\frac{2\sqrt{3} - 1}{2}$
 (C) $\frac{1}{2\sqrt{3}}$ (D) $\frac{\sqrt{3}}{2}$

SECTION - B

(Numerical Answer Type)

This section contains **10** Numerical based questions. The answer to each question is rounded off to the nearest integer value.

- Q1.** A 0.4 kg mass takes 8s to reach ground when dropped from a certain height 'P' above surface of earth. The loss of potential energy in the last second of fall is _____J.
(Take $g = 10 \text{ m/s}^2$)
- Q2.** A point charge $q_1 = 4q_0$ is placed at origin. Another point charge $q_2 = -q_0$ is placed at $x = 12\text{cm}$. Charge of proton is q_0 . The proton is placed on x axis so that the electrostatic force on the proton is zero. In this situation, the position of the proton from origin is _____cm.
- Q3.** In a meter bridge experiment the balance point is obtained if the gaps are closed by 2Ω and 3Ω . A shunt of $X \Omega$ is added to 3Ω resistor to shift the balancing point by 22.5cm. The value of X is _____.
- Q4.** A certain elastic conducting material is stretched into a circular loop. It is placed with its plane perpendicular to a uniform magnetic field $B = 0.8 \text{ T}$. When released the radius of the loop starts shrinking at a constant rate of 2cms^{-1} . The induced emf in the loop at an instant when the radius of the loop is 10cm will be _____ mV.
- Q5.** A body cools from 60°C to 40°C in 6 minutes. If temperature of surroundings is 10°C . Then, after the next 6 minutes, its temperature will be _____ $^\circ\text{C}$.
- Q6.** A tennis ball is dropped on to the floor from a height of 9.8m. It rebounds to a height 5.0m. Ball comes in contact with the floor for 0.2s. The average acceleration during contact is _____ ms^{-2} .
(Given $g = 10 \text{ ms}^{-2}$)
- Q7.** Two simple harmonic waves having equal amplitudes of 8cm and equal frequency of 10Hz are moving along the same direction. The resultant amplitude is also 8cm. The phase difference between the individual waves is _____ degree.
- Q8.** A solid sphere of mass 2kg is making pure rolling on a horizontal surface with kinetic energy 2240J. The velocity of centre of mass of the sphere will be _____ ms^{-1} .
- Q9.** A radioactive element ${}_{92}^{242}\text{X}$ emits two α - particles, one electron and two positrons. The product nucleus is represented by ${}_{\text{P}}^{234}\text{Y}$, The value of P is _____.
- Q10.** As shown in the figure, three identical polaroids P_1 , P_2 and P_3 are placed one after another. The pass axis of P_2 and P_3 are inclined at angle of 60° and 90° with respect to axis of P_1 . The source S has an intensity of $256 \frac{\text{W}}{\text{m}^2}$. The intensity of light at point O is _____ $\frac{\text{W}}{\text{m}^2}$.



PART – B (CHEMISTRY)

SECTION - A

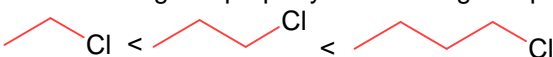
(One Options Correct Type)


This section contains **20 multiple choice questions**. Each question has **four choices** (A), (B), (C) and (D), out of which **ONLY ONE** option is correct.

Q1. During the borax bead test with CuSO_4 , a blue green colour of the bead was observed in oxidising flame due to the formation of

- (A) Cu (B) $\text{Cu}(\text{BO}_2)_2$
(C) CuO (D) Cu_3B_2

Q2. Identify the correct order for the given property for following compounds.

(A) Boiling Point;  $\text{Cl} < \text{Cl} < \text{Cl}$

(B) Density;  $\text{Br} < \text{Cl} < \text{I}$

(C) Boiling Point;  $\text{Br} < \text{Br} < \text{Br}$

(D) Density;  $\text{I} < \text{Br} < \text{Cl}$

(E) Boiling Point;  $\text{Cl} > \text{Cl} > \text{Cl}$

Choose the correct answer from the option given below:

- (A) (A), (C) and (E) only (B) (B), (C) and (D) only
(C) (A), (C) and (D) only (D) (A), (B) and (E) only

Q3. Which of the following salt solutions would coagulate the colloid solution formed when FeCl_3 is added to NaOH solution, at the fastest rate?

- (A) 10mL of $0.2 \text{ mol dm}^{-3} \text{AlCl}_3$ (B) 10mL of $0.1 \text{ mol dm}^{-3} \text{Na}_2\text{SO}_4$
(C) 10mL of $0.15 \text{ mol dm}^{-3} \text{CaCl}_2$ (D) 10mL of $0.1 \text{ mol dm}^{-3} \text{Ca}_3(\text{PO}_4)_2$

Q4. Compound that will give positive Lassaigne's test for both nitrogen and halogen is:

- (A) NH_4Cl (B) $\text{NH}_2\text{OH} \cdot \text{HCl}$
(C) $\text{CH}_3\text{NH}_2 \cdot \text{HCl}$ (D) $\text{N}_2\text{H}_4 \cdot \text{HCl}$

Q5. Which of the given compounds can enhance the efficiency of hydrogen storage tank?

- (A) NaNi_5 (B) Di-isobutylaluminium hydride
(C) SiH_4 (D) Li/P_4

Q6. The bond dissociation energy is highest for

- (A) F_2 (B) Cl_2
(C) I_2 (D) Br_2

Q7. Correct statement about smog is:

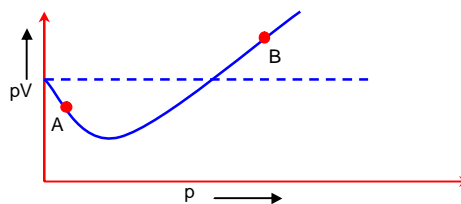
- (A) NO_2 is present in classical smog
(B) Both NO_2 and SO_2 are present in classical smog
(C) Photochemical smog has high concentration of oxidizing agents
(D) Classical smog also has high concentration of oxidizing agents

Q8. "A" obtained by Ostwald's method involving air oxidation of NH_3 , upon further air oxidation produces "B". "B" on hydration forms an oxoacid of Nitrogen along with evolution of "A". The oxoacid also produces "A" and gives positive brown ring test. Identify A and B respectively.

- (A) $\text{N}_2\text{O}_3, \text{NO}_2$
(C) $\text{NO}_2, \text{N}_2\text{O}_5$

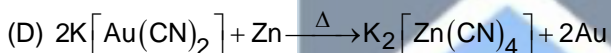
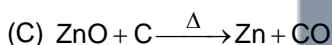
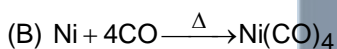
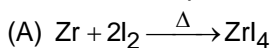
- (B) NO, NO_2
(D) $\text{NO}_2, \text{N}_2\text{O}_4$

Q9. For 1 mol of gas, the plot of pV vs. P is shown below. p is the pressure and V is the volume of What is the value of compressibility factor at point A?



- (A) $1 + \frac{a}{RTV}$
(B) $1 - \frac{b}{v}$
(C) $1 + \frac{b}{v}$
(D) $1 - \frac{a}{RTV}$

Q10. The reaction representing the Mond process for metal refining is_____.



Q11. The standard electrode potential ($\text{M}^{3+} / \text{M}^{2+}$) for V, Cr, Mn & Co are -0.26V, -0.41V, +1.57V and +1.97V, respectively. The metal ions which can liberate H_2 from a dilute acid are

- (A) Mn^{2+} and Co^{2+}
(C) V^{2+} and Cr^{2+}

- (B) Cr^{2+} and Co^{2+}
(D) V^{2+} and Mn^{2+}

Q12. Chiral complex from the following is:

Here en= ethylene diamine

- (A) cis- $[\text{PtCl}_2(\text{NH}_3)_2]$
(C) trans- $[\text{PtCl}_2(\text{en})_2]^{2+}$

- (B) cis- $[\text{PtCl}_2(\text{en})_2]^{2+}$
(D) trans- $[\text{Co}(\text{NH}_3)_4\text{Cl}_2]^+$

Q13. Match List I with List II

List-I (Reaction)		List-II (Reagents)	
A.	Hoffmann Degradation	I.	Conc.KOH, Δ
B.	Clemenson reduction	II.	$\text{CHCl}_3, \text{NaOH} / \text{H}_3\text{O}^+$
C.	Cannizaro reaction	III.	Br_2, NaOH
D.	Reimer-Tiemann Reaction	IV.	Zn-Hg/HCl

Choose the correct answer from the options given below:

- (A) A- II, B-I, C-III, D- IV
(C) A-III, B-IV, C-II, D-I

- (B) A-III, B-IV, C-I, D-II
(D) A-II, B-IV, C-I, D-III

Q14. Number of cyclic tripeptides formed with 2 amino acids A and B is

- (A) 4
(C) 5

- (B) 2
(D) 3

- Q20.** The magnetic behavior of Li_2O , Na_2O_2 and KO_2 , respectively are
- (A) Diamagnetic, paramagnetic and diamagnetic
 - (B) Diamagnetic, diamagnetic and paramagnetic
 - (C) Paramagnetic, paramagnetic and diamagnetic
 - (D) Paramagnetic, diamagnetic and paramagnetic

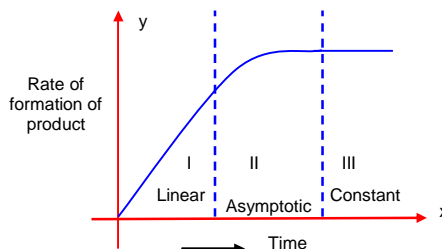


SECTION - B

(Numerical Answer Type)

This section contains **10** Numerical based questions. The answer to each question is rounded off to the nearest integer value.

Q1. For certain chemical reaction $X \rightarrow Y$, the rate of



- (A) Over all order of this reaction is one
 (B) Order of this reaction can't be determined
 (C) In region I and III, the reaction is of first and zero order respectively
 (D) In region-II, the reaction is of first order
 (E) In region-II, the order of reaction is in the range of 0.1 to 0.9

Q2. The number of molecules or ions from the following, which do not have odd number of electrons are _____.

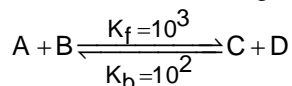
- A. NO_2
 B. ICl_4^-
 C. BrF_3
 D. ClO_2
 E. NO_2^+
 F. NO

Q3. The sum of bridging carbonyls in $\text{W}(\text{CO})_6$ and $\text{Mn}_2(\text{CO})_{10}$ is _____.

Q4. Millimoles of calcium hydroxide required to produce 100 mL of aqueous solution of pH 12 is $x \times 10^{-1}$. The value of x is _____ (Nearest integer)
 Assume complete dissociation.

Q5. Solid Lead nitrate is dissolved in 1 litre of water. The solution was found to boil at 100.15°C . When 0.2 mol of NaCl is added to the resulting solution, it was observed that the solution froze at -0.8°C . The solubility product of PbCl_2 formed is _____ $\times 10^{-6}$ at 298 K. (Nearest integer)
 Given: $K_b = 0.5 \text{ K kg mol}^{-1}$ and $K_f = 1.8 \text{ K kg mol}^{-1}$. Assume molality to be equal to molarity in all cases.

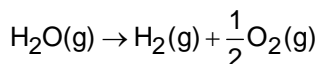
Q6. Consider the following reaction approaching equilibrium at 27°C and 1 atm pressure



The standard Gibb's energy change ($\Delta_r G^0$) at 27°C is (-) _____ kJ mol^{-1} (Nearest integer)

(Given: $R = 8.3 \text{ JK}^{-1}\text{mol}^{-1}$ and $\ln 10 = 2.3$)

Q7. Water decomposes at 2300K

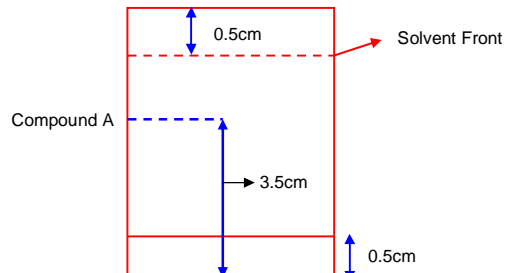


The percent of water decomposing at 2300 K and 1 bar is _____ (Nearest integer)

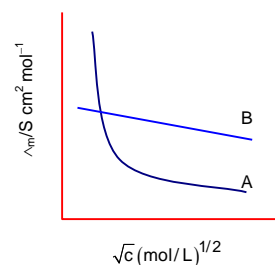
Equilibrium constant for the reaction is 2×10^{-3} at 2300K

- Q8.** 17 mg of a hydrocarbon (M.F. $C_{10}H_{16}$) takes up 8.40 mL of the H_2 gas measured at $0^\circ C$ and 760 mm of Hg. Ozonolysis of the same hydrocarbon yields
- $$CH_3-\overset{\overset{O}{\parallel}}{C}-CH_3, \quad H-\overset{\overset{O}{\parallel}}{C}-H, \quad H-\overset{\overset{O}{\parallel}}{C}-CH_2-CH_2-\overset{\overset{O}{\parallel}}{C}-\overset{\overset{O}{\parallel}}{C}-H$$
- The number of double bond/s present in the hydrocarbon is _____.

- Q9.** Following chromatogram was developed by



- Q10.** Following figure shows dependence of molar conductance of two electrolytes on concentration. \wedge_m^0 is the limiting molar conductivity. The number **incorrect** statement(s) from the following is _____.
- (A) \wedge_m^0 for electrolyte A is obtained by extrapolation
- (B) For electrolyte B, \wedge_m vs \sqrt{C} graph is a straight line with intercept equal to \wedge_m^0
- (C) At infinite dilution, the value of degree of dissociation approaches zero for electrolyte B.
- (D) \wedge_m^0 for any electrolyte A or B can be calculated using λ^0 for individual ions



PART – C (MATHEMATICS)

SECTION - A

(One Options Correct Type)

This section contains **20 multiple choice questions**. Each question has **four choices** (A), (B), (C) and (D), out of which **ONLY ONE** option is correct.

Q1. Let α and β be real numbers. Consider a 3×3 matrix A such that $A^2 = 3A + \alpha I$. If $A^4 = 21A + \beta I$, then

- (A) $\alpha = 1$ (B) $\alpha = 4$
(C) $\beta = -8$ (D) $\beta = 8$

Q2. Let the tangents at the points $A(4, -11)$ and $B(8, -5)$ on the circle $x^2 + y^2 - 3x + 10y - 15 = 0$, intersect at the point C . Then the radius of the circle, whose centre is C and the line joining A and B is its tangent, is equal to

- (A) $\frac{3\sqrt{3}}{4}$ (B) $\frac{2\sqrt{13}}{3}$
(C) $\sqrt{13}$ (D) $2\sqrt{13}$

Q3. Let $y = f(x)$ be the solution of the differential equation $y(x+1)dx - x^2dy = 0$, $y(1) = e$. Then $\lim_{x \rightarrow 0^+} f(x)$ is equal to

- (A) $\frac{1}{e}$ (B) e^2
(C) $\frac{1}{e^2}$ (D) 0

Q4. If the vectors $\vec{a} = \lambda\hat{i} + \mu\hat{j} + 4\hat{k}$, $\vec{b} = -2\hat{i} + 4\hat{j} - 2\hat{k}$ and $\vec{c} = 2\hat{i} + 3\hat{j} + \hat{k}$ are coplanar and the projection of \vec{a} on the vector \vec{b} is $\sqrt{54}$ units, then the sum of all possible values of $\lambda + \mu$ is equal to

- (A) 0 (B) 6
(C) 18 (D) 24

Q5. Let $A = \left\{ (x, y) \in \mathbb{R}^2 : y \geq 0, 2x \leq y \leq \sqrt{4 - (x-1)^2} \right\}$ and

$B = \left\{ (x, y) \in \mathbb{R} \times \mathbb{R} : 0 \leq y \leq \min \left\{ 2x, \sqrt{4 - (x-1)^2} \right\} \right\}$, Then the ratio of the area of A to the area of B

is

- (A) $\frac{\pi+1}{\pi-1}$ (B) $\frac{\pi-1}{\pi+1}$
(C) $\frac{\pi}{\pi+1}$ (D) $\frac{\pi}{\pi-1}$
-

- Q6.** Consider the following system of equations
 $\alpha x + 2y + z = 1$
 $2\alpha x + 3y + z = 1$
 $3x + \alpha y + 2z = \beta$
for some $\alpha, \beta \in \mathbb{R}$. Then which of the following is NOT correct.
(A) It has no solution for $\alpha = 3$ and for all $\beta \neq 2$
(B) It has no solution for $\alpha = -1$ and for all $\beta \in \mathbb{R}$.
(C) It has a solution for all $\alpha \neq -1$ and $\beta = 2$
(D) It has no solution if $\alpha = -1$ and $\beta \neq 2$

- Q7.** The domain of $f(x) = \frac{\log_{(x+1)}(x-2)}{e^{2\log_6 x} - (2x+3)}$, $x \in \mathbb{R}$ is
(A) $(2, \infty) - \{3\}$ (B) $\mathbb{R} - \{-1, 3\}$
(C) $(-1, \infty) - \{3\}$ (D) $\mathbb{R} - \{3\}$

- Q8.** Three rotten apples are mixed accidentally with seven good apples and four apples are drawn one by one without replacement. Let the random variable X denote the number of rotten apples. If μ and σ^2 represent mean and variance of X , respectively, then $10(\mu^2 + \sigma^2)$ is equal to
(A) 30 (B) 20
(C) 25 (D) 250

- Q9.** Let $f(\theta) = 3\left(\sin^4\left(\frac{3\pi}{2} - \theta\right) + \sin^4(3\pi + \theta)\right) - 2(1 - \sin^2 2\theta)$ and $S = \left\{\theta \in [0, \pi] : f'(\theta) = -\frac{\sqrt{3}}{2}\right\}$. If $4\beta = \sum_{\theta \in S} \theta$, then $f(\beta)$ is equal to
(A) $\frac{3}{2}$ (B) $\frac{5}{4}$
(C) $\frac{9}{8}$ (D) $\frac{11}{8}$

- Q10.** Let B and C be the two points on the line $y + x = 0$ such that B and C are symmetric with respect to the origin. Suppose A is a point on $y - 2x = 2$ such that $\triangle ABC$ is an equilateral triangle. Then, the area of the $\triangle ABC$ is
(A) $3\sqrt{3}$ (B) $\frac{8}{\sqrt{3}}$
(C) $2\sqrt{3}$ (D) $\frac{10}{\sqrt{3}}$

- Q11.** Fifteen football players of a club-team are given 15 T-shirts with their names written on the backside. If the players pick up the T-shirts randomly, then the probability that at least 3 players pick the correct T-shirt is
(A) $\frac{5}{24}$ (B) $\frac{2}{15}$
(C) $\frac{5}{36}$ (D) $\frac{1}{6}$

Q12. Let $f(x) = x + \frac{a}{\pi^2 - 4} \sin x + \frac{b}{\pi^2 - 4} \cos x$, $x \in \mathbb{R}$ be a function which satisfies

$f(x) = x + \int_0^{\pi/2} \sin(x+y)f(y)dy$. Then $(a+b)$ is equal to

- (A) $-\pi(\pi+2)$ (B) $-\pi(\pi-2)$
 (C) $-2\pi(\pi-2)$ (D) $-2\pi(\pi+2)$

Q13. A light ray emits from the origin making an angle 30° with the positive x-axis. After getting reflected by the line $x+y=1$, if this ray intersects x-axis at Q, then the abscissa of Q is

- (A) $\frac{2}{\sqrt{3}-1}$ (B) $\frac{2}{3+\sqrt{3}}$
 (C) $\frac{\sqrt{3}}{2(\sqrt{3}+1)}$ (D) $\frac{2}{3-\sqrt{3}}$

Q14. Let Δ be the area of the region $\{(x,y) \in \mathbb{R}^2 : x^2 + y^2 \leq 21, y^2 \leq 4x, x \geq 1\}$. Then

$\frac{1}{2} \left(\Delta - 21 \sin^{-1} \frac{2}{\sqrt{7}} \right)$ is equal to

- (A) $\sqrt{3} - \frac{2}{3}$ (B) $\sqrt{3} - \frac{4}{3}$
 (C) $2\sqrt{3} - \frac{2}{3}$ (D) $2\sqrt{3} - \frac{1}{3}$

Q15. If p, q and r are three propositions, then which of the following combination of truth values of p, q and r makes the logical expression $\{(p \vee q) \wedge ((\sim p) \vee r)\} \rightarrow ((\sim q) \vee r)$ false?

- (A) $p = T, q = T, r = F$ (B) $p = F, q = T, r = F$
 (C) $p = T, q = F, r = T$ (D) $p = T, q = F, r = F$

Q16. Let $f : \mathbb{R} \rightarrow \mathbb{R}$ be a function such that $f(x) = \frac{x^2 + 2x + 1}{x^2 + 1}$. Then

- (A) $f(x)$ is many-one in $(-\infty, -1)$
 (B) $f(x)$ is many-one in $(1, \infty)$
 (C) $f(x)$ is one-one in $(-\infty, \infty)$
 (D) $f(x)$ is one-one in $[1, \infty)$ but not in $(-\infty, \infty)$

Q17. Let $[x]$ denote the greatest integer $\leq x$. Consider the function $f(x) = \max\{x^2, 1 + [X]\}$. Then the

value of the integral $\int_0^2 f(x)dx$ is

- (A) $\frac{8+4\sqrt{2}}{3}$ (B) $\frac{4+5\sqrt{2}}{3}$
 (C) $\frac{1+5\sqrt{2}}{3}$ (D) $\frac{5+4\sqrt{2}}{3}$

- Q18.** Let $\lambda \neq 0$ be a real number. Let α, β be the roots of the equation $14x^2 - 31x + 3\lambda = 0$ and α, γ be the roots of the equation $35x^2 - 53x + 4\lambda = 0$. Then $\frac{3\alpha}{\beta}$ and $\frac{4\alpha}{\gamma}$ are the roots of the equation
- (A) $7x^2 + 245x - 250 = 0$ (B) $49x^2 + 245x + 250 = 0$
 (C) $7x^2 - 245x + 250 = 0$ (D) $49x^2 - 245x + 250 = 0$

- Q19.** Let $x = 2$ be a root of the equation $x^2 + px + q = 0$ and

$$f(x) = \begin{cases} \frac{1 - \cos(x^2 - 4px + q^2 + 8q + 16)}{(x - 2p)^4}, & x \neq 2p \\ 0, & x = 2p \end{cases} . \text{ Then } \lim_{x \rightarrow 2p^+} [f(x)], \text{ where } [.] \text{ denotes greatest}$$

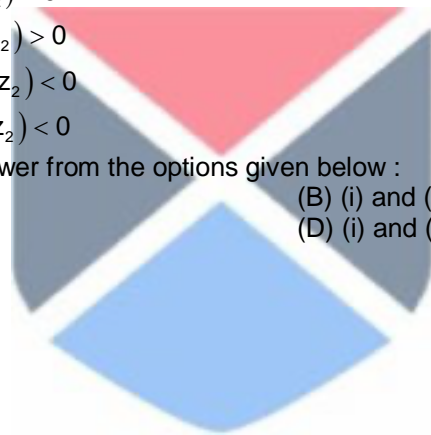
integer function, is

- (A) 0 (B) -1
 (C) 2 (D) 1
- Q20.** For two non-zero complex numbers z_1 and z_2 , if $\text{Re}(z_1 z_2) = 0$ and $\text{Re}(z_1 + z_2) = 0$, then which of the following are possible?

- (i) $\text{Im}(z_1) > 0$ and $\text{Im}(z_2) > 0$
 (ii) $\text{Im}(z_1) < 0$ and $\text{Im}(z_2) > 0$
 (iii) $\text{Im}(z_1) > 0$ and $\text{Im}(z_2) < 0$
 (iv) $\text{Im}(z_1) < 0$ and $\text{Im}(z_2) < 0$

Choose the correct answer from the options given below :

- (A) (ii) and (iii) (B) (i) and (iii)
 (C) (ii) and (iv) (D) (i) and (ii)



SECTION - B

(Numerical Answer Type)

This section contains **10** Numerical based questions. The answer to each question is rounded off to the nearest integer value.

- Q1.** Five digits numbers are formed using the digits 1, 2, 3, 5, 7 with repetitions and are written in descending order with serial numbers. For example, the number 77777 has serial number 1. Then the serial number of 35337 is.....
- Q2.** Suppose f is a function satisfying $f(x+y) = f(x) + f(y)$ for all $x, y \in \mathbb{N}$ and $f(1) = \frac{1}{5}$. If $\sum_{n=1}^m \frac{f(n)}{n(n+1)(n+2)} = \frac{1}{12}$, then m is equal to.....
- Q3.** Let $f: \mathbb{R} \rightarrow \mathbb{R}$ be a differentiable function that satisfies the relation $f(x+y) = f(x) + f(y) - 1, \forall x, y \in \mathbb{R}$. If $f'(0) = 2$, then $|f(-2)|$ is equal to.....
- Q4.** Let the equation of the plane P containing the line $x+10 = \frac{8-y}{2} = z$ be $ax+by+3z = 2(a+b)$ and the distance of the plane P from the point $(1,27,7)$ be c . Then $a^2 + b^2 + c^2$ is equal to.....
- Q5.** If the co-efficient of x^9 in $\left(\alpha x^3 + \frac{1}{\beta x}\right)^{11}$ and the co-efficient of x^{-9} in $\left(\alpha x - \frac{1}{\beta x^3}\right)^{11}$ are equal, then $(\alpha\beta)^2$ is equal to.....
- Q6.** Let the co-ordinates of one vertex of ΔABC be $A(0,2,\alpha)$ and the other two vertices lie on the line $\frac{x+\alpha}{5} = \frac{y-1}{2} = \frac{z+4}{3}$. For $\alpha \in \mathbb{Z}$, if the area of ΔABC is 21 sq. units and the line segment BC has length $2\sqrt{21}$ units, then α^2 is equal to.....
- Q7.** If all the six digit numbers $x_1x_2x_3x_4x_5x_6$ with $0 < x_1 < x_2 < x_3 < x_4 < x_5 < x_6$ are arranged in the increasing order, then the sum of the digits in the 72th number is.....
- Q8.** Let \vec{a}, \vec{b} and \vec{c} be three non-zero non-coplanar vectors. Let the position vectors of four points A, B, C and D be $\vec{a} - \vec{b} + \vec{c}, \lambda\vec{a} - 3\vec{b} + 4\vec{c}, -\vec{a} + 2\vec{b} - 3\vec{c}$ and $2\vec{a} - 4\vec{b} + 6\vec{c}$ respectively. If $\overline{AB}, \overline{AC}$ and \overline{AD} are coplanar, then λ is equal to.....
- Q9.** Let a_1, a_2, a_3, \dots be a GP of increasing positive numbers. If the product of fourth and sixth terms is 9 and the sum of fifth and seventh terms is 24, then $a_1a_9 + a_2a_4a_9 + a_5 + a_7$ is equal to.....
- Q10.** Let the coefficients of three consecutive terms in the binomial expansion of $(1+2x)^n$ be in the ratio 2 : 5 : 8. Then the coefficient of the term, which is in the middle of these three terms, is.....
-

Keys to JEE Main 2024 Mock Test 3

PART - A (PHYSICS)

SECTION - A

1.	D	2.	A	3.	D	4.	C
5.	B	6.	B	7.	D	8.	B
9.	D	10.	B	11.	A	12.	B
13.	C	14.	A	15.	B	16.	C
17.	B	18.	C	19.	C	20.	C

SECTION - B

1.	300	2.	24	3.	2	4.	10
5.	28	6.	120	7.	120	8.	40
9.	87	10.	24				

PART - B (CHEMISTRY)

SECTION - A

1.	B	2.	A	3.	A	4.	C
5.	A	6.	B	7.	C	8.	B
9.	D	10.	B	11.	C	12.	B
13.	B	14.	A	15.	B	16.	C
17.	B	18.	D	19.	A	20.	B

SECTION - B

1.	2	2.	3	3.	0	4.	5
5.	13	6.	6	7.	2	8.	3
9.	6	10.	2				

PART – C (MATHEMATICS)

SECTION - A

- | | | | | | | | |
|-----|---|-----|---|-----|------|-----|---|
| 1. | C | 2. | B | 3. | D | 4. | D |
| 5. | B | 6. | B | 7. | A | 8. | B |
| 9. | B | 10. | B | 11. | DROP | 12. | D |
| 13. | B | 14. | B | 15. | B | 16. | D |
| 17. | D | 18. | D | 19. | A | 20. | A |

SECTION - B

- | | | | | | | | |
|----|------|-----|------|----|----|----|-----|
| 1. | 1436 | 2. | 10 | 3. | 3 | 4. | 355 |
| 5. | 1 | 6. | 9 | 7. | 32 | 8. | 2 |
| 9. | 60 | 10. | 1120 | | | | |

