

Time : 2½ Hours

**GEOGRAPHY AND ECONOMICS (E)**

[For Children With Special Needs]

**Subject Code**

S	0	1	7
---	---	---	---

**Total No. of Questions : 5**

**(Printed Pages : 11)**

**Maximum Marks : 65**

- INSTRUCTIONS :** (i) All questions are compulsory.  
(ii) Answers to be entered in the space provided on the question paper.  
(iii) Figures to the right indicate full marks.

1. (A) (i) Identify the picture given below and answer the following questions : 2



(a) Name the type of soil you see in the above picture.

.....  
.....

(b) Write any *one* characteristic feature of this type of soil.

.....  
.....

(ii) Match the resources given in Column A with the states in Column B and write the correct answer in Column C. 2

Column A	Column B	Column C
(a) Rajasthan	(1) Water	(a) .....
(b) Arunachal Pradesh	(2) Iron ore	(b) .....
	(3) Solar energy	

(iii) Name the method used to control soil erosion against each picture : 2



(a)



(b)

(a) .....



(b) .....

(iv) Choose and write only the correct answer from the alternatives given below : 1

(1) An example of renewable resource is .....

- (a) Wind                      (b) Metals                      (c) Fossil fuels.

(B) (i) Match the following animals in Column A with their category of existence in Column B and write the correct answer in Column C : 2

Column A	Column B	Column C
(i) Hornbill 	Endemic	(1) .....
(ii) Rodent 	Rare	(2) .....
	Normal	

(ii) Observe the picture given below and answer the following questions : 2




(a) What kind of agriculture is practised in the above picture ?

.....

(b) Name any *two* resources obtained from the forests.

(iii) Observe the pictures given below, and answer the following question : 2



What has the government done to protect the above two species of animals ? (give any *two* points)

.....  
.....

(iv) Observe the picture and answer the following questions : 2




(a) Why have the communities in the Himalayan regions started the above movement ?

.....  
.....

(b) How have villagers conserved forests in the Sariska Tiger Reserve ?

.....  
.....  
.....

2. (A) (i) Observe the diagram and answer the questions that follow : 2



(a) Identify the state in which the following method of water conservation is carried out and name the method.

.....

(b) Why did the houses have underground tanks or tankas ?

.....

.....

(ii) Match the multipurpose projects in Column A with rivers in Column B and write the correct answer in Column C : 2


Column A	Column B	Column C
(a) Hirakud	(1) Sutlej-Beas	(a) .....
(b) Bhakra Nangal	(2) Sabarmati	(b) .....
	(3) Mahandi	

(iii) Choose and write only the correct answer from the alternatives given below : 1

(1) Multipurpose projects have been proclaimed as temples of modern India by .....

- (a) Narendra Modi
- (b) Mahatma Gandhi
- (c) Jawaharlal Nehru

(iv) Dams were referred to as reservoirs of water : 2



(a) Why has the Narmada Bachao Andolan started ? (write one point).

.....

.....

.....




(b) Why do we need to conserve and manage our water resources ? (write *one* point)


.....  
.....  
.....

(B) (i) Tick mark the correct answer from the options given below : 2


(a) Which one of the following is a Zaid crop ?



Wheat




Watermelon



Sugarcane

.....

(b) Which one of the following is a plantation crop ?



Cotton




Banana



Rose

.....

(ii) Use of oilseeds is of great importance in India : 2



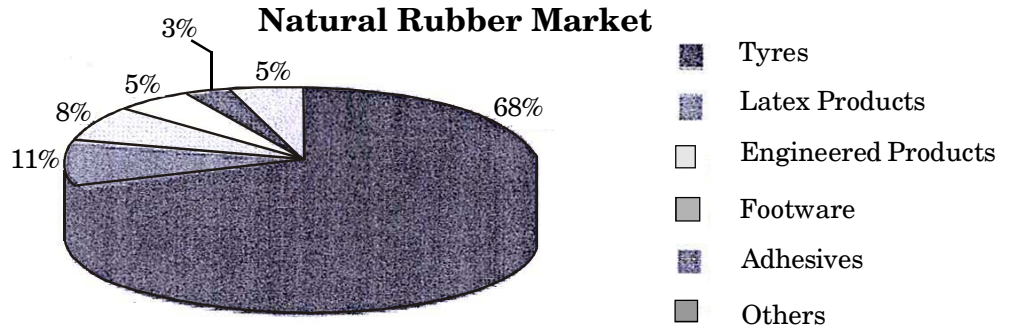
(a) Name any *two* oilseeds cultivated in India.

.....

(b) Name any *two* industries in which oilseeds are used as raw material ?

.....

(iii) Observe the pie chart and answer the following questions : 2



(a) In which industry is rubber used the most ?

.....  
 .....

(b) What type of climate is required for the growth of rubber ?

.....  
 .....

(iv) Pulses are a major source of protein in a vegetarian diet : 2

(a) Why are pulses grown in rotation with other crops ?

.....  
 .....

(b) Give any *two* examples of pulses.

.....  
 .....

3. (A) (i) Observe the following picture and answer the questions given below : 2



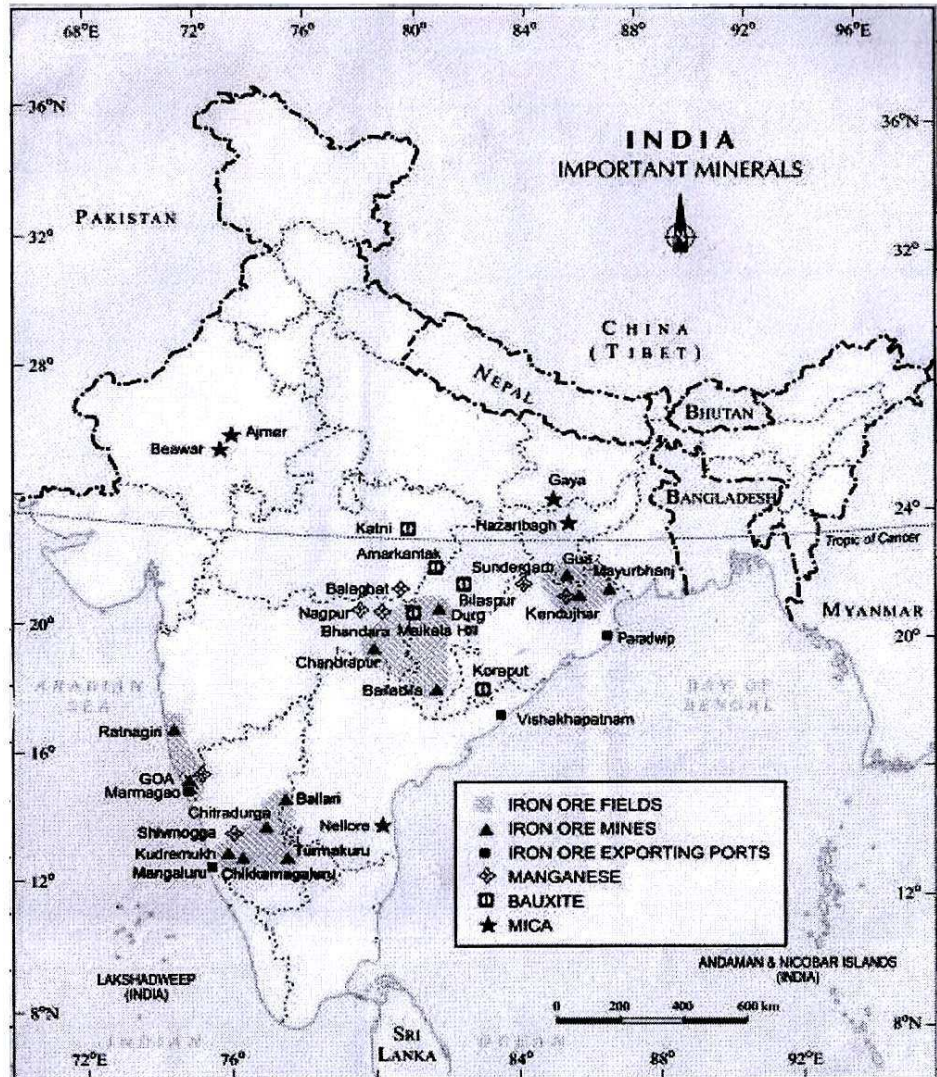
(a) Why is magnetite an important ore ?

.....  
 .....

(b) State *one* use of copper.

.....  
 .....

(ii) Observe the map and answer the following questions : 3



- (a) Name the iron ore exporting port of Goa.  
.....
- (b) Name any *one* iron ore mine in Orissa.  
.....
- (c) Name a manganese mine in Madhya Pradesh.  
.....

(iii) Choose and write only the correct alternative from the alternatives given below : 2

- (1) The energy resource produced from Mumbai High is .....  
  - (a) Electricity      (b) Solar energy      (c) Petroleum
- (2) The Gulf of Kuchchh provides ideal conditions for ..... energy.  
  - (a) Geothermal      (b) Biogas      (c) Tidal



(B) (i) India is the largest producer of raw jute :

2



(a) On which river basin is jute industry located ?

.....  
.....  
.....

(b) Why was the National jute policy formulated ?

.....  
.....  
.....

(ii) Choose and write only the correct alternative from the alternatives given below : 2

(1) Release of dust and smoke causes ..... pollution.

(a) Water (b) Noise (c) Air

(2) Hot water from factories should be treated before releasing it in .....

(a) Soil (b) Nuclear power plants  
(c) Rivers

(iii) Sugar industry is seasonal in nature : 2

(a) Why have sugar mills been shifted to western states ?

.....  
.....  
.....

(b) Chota Nagpur Plateau region has iron and steel industries. Why ?

.....  
.....  
.....

(iv) Choose and write only the *correct* alternative from the alternatives given below : 2

(1) All public sector undertakings market their steel through .....


(a) SAIL (b) NALCO (c) BALCO

(2) Sometimes industries are located near cities because of .....

(a) Mines (b) Labour (c) Solar energy



4. (A) (i) Name the following : 2
- (a) Roads that link extreme parts of the country .....
- (b) The cheapest means of transport .....
- (ii) Railways have become a convenient mode of transport : 2



- (a) Name any *two* multifarious activities that can be carried out by railways.
- .....
- .....

- (B) India's major ports handle its foreign trade : 2



- (i) Name any item exported by India.
- .....
- (ii) What is exported from the New Mangalore port ?
- .....
- (iii) Exchange of goods among people, states, and countries is called trade : 2
- (a) What are the two components of trade ?
- .....
- (b) What is international trade ?
- .....
- .....



- (ii) Study the following table showing Infant Mortality rate and Literacy rate for the year 2012 in select states of India and answer the questions that follow : 2

States	Infant (mortality rate/1000)	Literacy rate (%)
Goa	15	86
Kerala	09	94
Punjab	40	75

- (a) Which state had the lowest Infant mortality rate in 2012 ?  
 .....
- (b) What was the difference of Literacy rate between Goa and Punjab in 2012 ?  
 .....
- (iii) Write the full form of the following : 2
- (a) COPRA : .....
- .....
- (b) W.T.O. : .....
- .....
- (iv) Fill in the following table by giving one point of definition and one example each : 2

Sectors	Organised	Unorganised
(a) Definition	.....	.....
	.....	.....
	.....	.....
	.....	.....
(b) Examples	.....	.....
	.....	.....
	.....	.....
	.....	.....

- (v) (a) What is credit ? 1  
 .....
- (b) What is foreign investment ? 1  
 .....