

This Question Paper contains 8 printed pages.
(Sections - A, B, C & D)

Sl.No.

10 (E)
(JULY, 2022)

Time : 3 Hours]

[Maximum Marks :80

Instructions :

- 1) Write in a clear and legible handwriting.
- 2) This question paper has four Sections A, B, C & D and Question Numbers from 1 to 54.
- 3) All questions are compulsory. There are only internal options.
- 4) The numbers to the right represent the marks of the question.
- 5) Draw neat diagrams wherever necessary.
- 6) New sections should be written in a new page. Write the answers in numerical order.
- 7) Question number 54 of section-D is of map filling. It is a compulsory question. only for the blind candidates separate question are given.

SECTION - A

Answer the following questions as required. (Each question carries 1 mark) [24]

■ **Match the following correctly : [5]**

- | (A) | (B) |
|-------------------------|--------------------|
| 1) Tana - Riri festival | (A) India |
| 2) Kuchipudi | (B) 1981 A.D. |
| 3) Rhino vision | (C) Andhra Pradesh |
| 4) Mica | (D) 1995 A.D. |
| 5) Air Pollution Act | (E) Rhino Project |
| | (F) Vadnagar |

■ **State whether the following sentences are True or False:**

- 6) The stone inscription pillar at Sarnath is the best specimen of Sculpture. [1]
- 7) The earlier Buddhist literature was written in Tamil language. [1]
- 8) Fiscal policy means Government's strategy with respect to public expenditure and rising revenue, taxation and public loan policy. [1]
- 9) 1975 was celebrated as "Women Empowerment Year". [1]
- 10) Communalism is a hindrance to the progress of individual, society and nation. [1]

■ **Fill in the blanks with correct option from those given in the brackets :**

- 11) Wildlife protection Act was enacted in _____ A.D. [1]
(1975, 1979, 1972)
- 12) Salarjung Museum is at _____ city. [1]
(Hyderabad, Mumbai, Bhopal)
- 13) In second century, the famous, Grand Anicut Canal, was constructed across the _____ river. [1]
(Krishna, Kaveri, Koshi)
- 14) Irrigation by ponds is practiced more in the _____ states of India. [1]
(Eastern and Southern, Northern and Southern, Western and Eastern)
- 15) The rail route between Dibrugarh and Kanyakumari is the longest railway route in India, which is known as _____. [1]
(Vivek Express, Ashram Express, Shatabdi Express)

■ **Choose the correct option from those given below and answer the question :**

- 16) Which of the following statements is not correct? [1]
- (A) India proved the feeling of "Vasudhaiva Kutumbakam" in the world.
- (B) "I am proud to say that, I represent the religion that has taught the lesson of compassion and brotherhood, to the world!" Swami Vivekananda.
- (C) Indian who believed in tolerance and universal brotherhood even welcomed Dutch and Britishers.
- (D) Ancient Indian Torch bearers stressed upon economic unity of India.

17) Connect the following multipurpose projects with the beneficiary. States and select the correct order. [1]

- | | |
|---------------------|--------------------|
| (1) Bhakra Nangal | (a) Bihar |
| (2) Koshi | (b) Punjab |
| (3) Nagarjuna Sagar | (c) Gujarat |
| (4) Narmada | (d) Andhra Pradesh |
- (A) (1-b), (2-a), (3-c), (4-d)
 (B) (1-b), (2-a), (3-d), (4-c)
 (C) (1-d), (2-c), (3-b), (4-a)
 (D) (1-c), (2-d), (3-a), (4-b)

18) 'Dharoi multi-purpose' Project constructed on which river? [1]

- | | |
|---------------|---------------|
| (A) Mahisagar | (B) Sabarmati |
| (C) Narmada | (D) Tapi |

19) Economically, India is which type of country? [1]

- | | |
|----------------|--------------|
| (A) Developed | (B) Backward |
| (C) Developing | (D) Poor |

20) Which of the following given services is not related to service sector? [1]

- | | |
|-------------------|-------------------------|
| (A) Communication | (B) Health |
| (C) Banking | (D) Mining of raw metal |

■ Answer the following questions in short :

21) During ascent to Everest which people work as labourers to carry goods of mountaineers? [1]

22) Which is the biggest railway station of Gujarat? [1]


23) Which countries have made their economic development through market system? [1]

24) Production from small pin to gigantic machines is included in which sector? [1]

SECTION - B

Answer any 9 questions out of 13 questions given below in 30 to 35 words : (Each question carries 2 marks) [18]

- 25) Explain, 'India is a land of ancient culture'. [2]
- 26) Aryans were nature lovers, Explain. [2]
- 27) Script writers have said that 'Bhavai' is an emotion oriented drama. Why? [2]
- 28) In Gujarat, during Solanki era the Patolas of Patan became world famous. Why?[2]
- 29) Identify, the monument in the given picture and give information about the monument. [2]




- 30) Ahmedabad could be known as a historical city? Why? [2]
- 31) State the reasons for the destruction of wildlife. [2]
- 32) Define the following : [2]
- 1) Bauxite
 - 2) Lead
- 33) State the uses of limestone. [2]

- 34) Today, cotton textile industry is facing a tough competition. Give reasons. [2]
- 35) Identify me :
- 1) "Denim city of India"
 - 2) "Silicon valley of India" [2]
- 36) Explain the difference between rebellion and terrorism. [2]
- 37) State the economic effects of terrorism. [2]

SECTION - C

Answer any six (6) questions out of 9 questions given below in 60 to 80 words: [18]
(Each question carries 3 marks.)

- 38) See the picture given below and answer the following questions. [3]



- 1) Which ancient town planning is given in this picture?
 - 2) This town planning is found in which state of India?
 - 3) Give importance of this town planning.
- 39) There is a temple in North Gujarat, which is constructed in Iranian style of Art. Give information about the temple. [3]
- 40) Give information about the ancient Nalanda University, situated at Badgaon village of Patna district in Bihar. [3]

- 41) Define the following term : [3]
- 1) Rare resources
 - 2) Soil
 - 3) Soil Erosion
- 42) State the remedies of soil conservation. [3]
- 43) State the steps have been taken to conserve environment. [3]
- 44) See the picture given below and write the full name of following Logos. [3]




- 45) State which are the forms of consumer exploitation now a days? [3]
- 46) Which schemes have been started by Gujarat Government to give equality to women? Explain. [3]

SECTION - D

Answer any 4 questions out of 7 questions given below in 120 to 150 words.
Question No. 54 is compulsory.(Each question carries 4 marks) [20]

- 47) Discuss ancient India's progress in medical Science and Surgery. [4]
- 48) Which information are included in Vastushastra? [4]
- 49) State the Technical and Institutional Reforms in Agriculture. [4]

- 50) See the picture and identify the important beverages of India. Give information about the beverages. [4]



- 51) What is poverty? What are the characteristics of the people living below poverty line? [4]
- 52) Explain, the idea of world labour market. [4]
- 53) "Corruption" is a global problem. Explain it's adverse effects on economy or society. [4]

- 54) Show the following details with proper symbols at their proper places in the given outlined map of India. [4]

- (1) Desert soil
- (2) 'Kaziranga' - National Park.
- (3) One region producing Sugarcane
- (4) Iron and Steel industry - 'Bhadravati'

For Blind Candidates:

- (1) In which state of India desert soil is found.
- (2) In which state, is the 'Kaziranga' National Park situated?
- (3) Which state of India does produce more sugarcane.
- (4) Iron and steel industry 'Bhadravati' is in which state of India.

