

SSC CGL 2022 TIER 1 December 7, 2022 SHIFT 1 QUESTION PAPER

Exam Date	07/12/2022
Exam Time	9:00 AM - 10:00 AM
Subject	Combined Graduate Level Examination Tier I 2022

Section : General Intelligence and Reasoning

Q.1 A series is given with one term missing. Select the correct alternative from the given ones that will complete the series.
NTS, JZF, FFS, BLF, ?

- Ans
- 1. XMO
 - 2. XMQ
 - 3. XRS
 - 4. XSM

Question ID : 264330104808
Status : Answered
Chosen Option : 3

Q.2 After arranging the given words according to dictionary order, which word will come at 'Third' position?

1. Native
2. Nationality
3. Nation
4. National
5. Nationalism

- Ans
- 1. Nationalism
 - 2. Nation
 - 3. National
 - 4. Nationality

Question ID : 264330104884
Status : Answered
Chosen Option : 1

Q.3 Select the option that is related to the fifth letter-cluster in the same way as the second letter-cluster is related to the first letter-cluster and the fourth letter-cluster is related to the third letter-cluster.

COMPLEX : OCXELPM :: BALANCE : ABECNAL :: AIRLINE : ?

- Ans
- 1. IAENILR
 - 2. RAINELI
 - 3. ELNIIAR
 - 4. ARLINEI

Question ID : 26433069017
Status : Answered
Chosen Option : 1

Q.4 Three statements are given followed by three conclusions numbered I, II and III. Assuming the statements to be true, even if they seem to be at variance with commonly known facts, decide which of the conclusions logically follow(s) from the statements.

Statements:

All bikes are cars.

Some cars are trucks.

All trucks are cycles.

Conclusions:

I. Some cars are cycles.

II. Some cycles are trucks.

III. Some bikes are trucks.

Ans 1. Only conclusions II and III follow.

2. Only conclusions I and III follow.

3. Only conclusions I and II follow.

4. All conclusions follow.

Question ID : 26433070399

Status : Answered

Chosen Option : 3

Q.5 Select the correct mirror image of the given combination when the mirror is placed at 'PQ' as shown below.

CYLINDE8
P
|
Q

Ans 1. 8YLINDE8

2. 8YLINDE8

3. 8YLINDE8

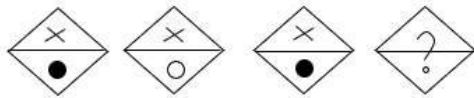
4. 8YLINDE8

Question ID : 26433067826

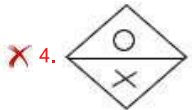
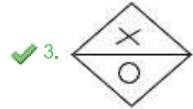
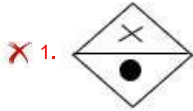
Status : Answered

Chosen Option : 2

Q.6 Select the figure that will replace the question mark (?) in the following figure series.



Ans



Question ID : 26433069145

Status : Answered

Chosen Option : 3

Q.7 Which letter cluster will replace the question mark (?) to complete the given series?
AZBY, BYCX, CXDW, ?, EVFU

Ans ✓ 1. DWEV

✗ 2. DVEW

✗ 3. DWFV

✗ 4. DVEU

Question ID : 26433059850

Status : Answered

Chosen Option : 1

Q.8 Select the set in which the numbers are related in the same way as are the numbers of the following set.

(NOTE: Operations should be performed on the whole numbers, without breaking down the numbers into its constituent digits. E.g., 13 – Operations on 13 such as adding /subtracting /multiplying etc. to 13 can be performed. Breaking down 13 into 1 and 3 and then performing mathematical operations on 1 and 3 is NOT allowed).
(17, 24, 58)
(26, 37, 89)

Ans ✓ 1. (15, 17, 47)

✗ 2. (41, 39, 125)

✗ 3. (10, 20, 44)

✗ 4. (21, 38, 96)

Question ID : 26433074562

Status : Answered

Chosen Option : 1

Q.9 Three different positions of the same dice are shown. Find the number on the face opposite the face showing '5'.

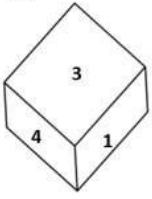


Figure 1

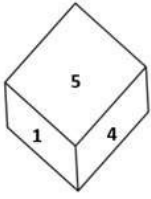


Figure 2

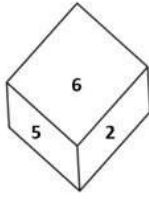


Figure 3

- Ans
- 1. 4
 - 2. 3
 - 3. 6
 - 4. 1

Question ID : 26433081529
Status : Answered
Chosen Option : 2

Q.10 In the following question, select the missing number from the given series.
480, 240, 120, 60, 30, ?

- Ans
- 1. 21
 - 2. 18
 - 3. 15
 - 4. 17

Question ID : 264330105021
Status : Answered
Chosen Option : 3

Q.11 Select the set in which the numbers are related in the same way as are the numbers of the following set.

(NOTE: Operations should be performed on the whole numbers, without breaking down the numbers into its constituent digits.)

(13, 39, 6)

(9, 18, 4)

- Ans
- 1. (12, 48, 8)
 - 2. (12, 50, 13)
 - 3. (15, 45, 3)
 - 4. (20, 28, 8)

Question ID : 26433069241
Status : Answered
Chosen Option : 1

Q.12 Which of the following interchanges of numbers would make the given equation correct?

$$7 \times 4 \div 14 + 12 + 30 = 50$$

- Ans
- 1. 12, 14
 - 2. 7, 14
 - 3. 4, 7
 - 4. 30, 50

Question ID : 26433069599
Status : Answered
Chosen Option : 2

Q.13 Which figure should replace the question mark (?) if the series were to be continued?

		C			L			X			P	
X	☆	P	P	C	X	3	☆	C	C	X	3	?
L			☆			P			☆			

Ans

✗ 1.

		3
☆	X	P
C		

✗ 2.

		3
P	☆	X
C		

✗ 3.

		3
☆	S	P
C		

✓ 4.

		3
S	☆	X
C		

Question ID : 26433076655
 Status : Answered
 Chosen Option : 1

Q.14 In a certain code language, 'CABLES' is written as 'ECDUGN' and 'PHONES' is written as 'RJQUGP'. How will 'MOBILE' be written in that language?

- Ans
- ✗ 1. DQOKNG
 - ✗ 2. OQDNKG
 - ✗ 3. OQDKNG
 - ✓ 4. OQDGNK

Question ID : 26433066019
 Status : Not Answered
 Chosen Option : --

Q.15 In the following question below are given some statements followed by some conclusions based on those statements. Taking the given statements to be true even if they seem to be at variance from commonly known facts. Read all the conclusions and then decide which of the given conclusion logically follows the given statements.

Statements:

I. Some table are chair.

II. No chair is stool.

Conclusion:

I. All chair are table.

II. Some chair are stool.

III. All table are stool.

- Ans
- 1. Only conclusion I follows
 - 2. All conclusion follows
 - 3. Both conclusions II and III follows
 - 4. Neither conclusion follows

Question ID : 264330104928

Status : Answered

Chosen Option : 4

Q.16 Select the correct mirror image of the given combination when the mirror is placed at line MN as shown.

t p 7 d 4 3

- Ans
- 1. ε t b 7 p 3
 - 2. ε t P 7 q t
 - 3. ε 4 b 7 q t
 - 4. ε 4 d 7 d t

Question ID : 26433068200

Status : Answered

Chosen Option : 3

Q.17 By interchanging the given two signs which of the following equation will be correct?
+ and ×

- Ans
- 1. $7 + 5 \times 2 - 8 + 4 = 36$
 - 2. $95 \div 19 + 5 \times 3 - 6 = 22$
 - 3. $13 + 4 \times 5 - 6 + 2 = 51$
 - 4. $4 \times 3 + 6 - 7 + 1 = 18$

Question ID : 264330105116

Status : Answered

Chosen Option : 2

Q.18 In a certain code language, 'GHOST' is written as 'VVSMM' and 'EATER' is written as 'THXFK'. How will 'HANDS' be written in that language?

- Ans
- 1. UGRFN
 - 2. NFRGV
 - 3. WHRGN
 - 4. VGRGN

Question ID : 26433069570

Status : Answered

Chosen Option : 1

Q.19 If $A \times B$ means that A is the brother of B, $A \div B$ means that A is the sister of B, $A + B$ means that A is the father of B then which of the following expression shows that P is the sister of R?

- Ans
- 1. $P + Q \times R$
 - 2. $P + Q \times R$
 - 3. $P \times Q + R$
 - 4. $P \div Q + R$

Question ID : 264330105001

Status : Answered

Chosen Option : 2

Q.20 In the following question, four number pairs are given. In each pair the number on left side of (-) is related to the number of the right side of (-) with some Logic/Rule/Relation. Three pairs are similar on basis of same Logic/Rule/Relation. Select the odd one out from the given alternatives. (NOTE: Operations should be performed on the whole numbers, without breaking down the numbers into its constituent digits. E.g.13 – Operations on 13 such as adding /subtracting /multiplying etc. to 13 can be performed. Breaking down 13 into 1 and 3 and then performing mathematical operations on 1 and 3 is not allowed)

- Ans
- 1. $16 - 30$
 - 2. $44 - 84$
 - 3. $14 - 26$
 - 4. $18 - 34$

Question ID : 264330105061

Status : Answered

Chosen Option : 2

Q.21 Select the set in which the numbers are related in the same way as are the numbers of the following set.

(NOTE : Operations should be performed on the whole numbers, without breaking down the numbers into its constituent digits. E.g. 13 – Operations on 13 such as adding / subtracting / multiplying etc. to 13 can be performed. Breaking down 13 into 1 and 3 and then performing mathematical operations on 1 and 3 is NOT allowed)
(45, 15, 120)
(27, 8, 76)

- Ans
- 1. (72, 58, 84)
 - 2. (30, 12, 80)
 - 3. (23, 14, 38)
 - 4. (56, 48, 32)

Question ID : 26433082546

Status : Answered

Chosen Option : 4

Q.22 After interchanging the given two numbers and two signs what will be the values of equation (I) and (II) respectively?

+ and -, 6 and 9

I. $6 - 5 \times 9 + 8 \div 2$

II. $6 - 4 + 9 \times 5 \div 3$

- Ans
- 1. 17, 5
 - 2. 81, 16
 - 3. 35, 3
 - 4. 54, 5

Question ID : 264330105158

Status : Answered

Chosen Option : 3

Q.23 Select the word-pair that best represents a similar relationship to the one expressed in the pair of words given below. (The words must be considered as meaningful English words and must not be related to each other based on the number of letters/number of consonants/vowels in the word.)

Dog : Kennel

- Ans 1. Bee : Hive
 2. Hare : Den
 3. Lion : Burrow
 4. Spider : Shed

Question ID : 26433068338
Status : Answered
Chosen Option : 1

Q.24 A \$ B means 'A is the husband of B'
A @ B means 'A is the daughter of B'
A # B means 'A is the father of B'
A * B means 'A is the mother of B'
If X @ Y \$ J * M, then how is X related to M?

- Ans 1. Brother
 2. Sister-in-law
 3. Sister
 4. Grandmother

Question ID : 26433068070
Status : Answered
Chosen Option : 3

Q.25 Three of the following letter-clusters are alike in some manner and hence form a group. Which letter-cluster does not belong to that group?

- Ans 1. FKA
 2. CJZ
 3. PUK
 4. CHX

Question ID : 26433081505
Status : Answered
Chosen Option : 2

Section : General Awareness

Q.1 Who among the following is a famous performer of the Kathakali classical dance?

- Ans 1. Pankaj Charan Das
 2. Sunanda Nayar
 3. Gopinath
 4. Raja Reddy

Question ID : 26433064384
Status : Not Answered
Chosen Option : --

Q.2 Who was appointed the Lieutenant Governor of Delhi in May 2022?

- Ans
- 1. Vivek Kumar
 - 2. Arvind Krishna
 - 3. Vinai Kumar Saxena
 - 4. Vijay Shekar Sharma

Question ID : 264330105330
Status : Answered
Chosen Option : 3

Q.3 What powers the Earth's internal heat engine?

- Ans
- 1. Solar Energy
 - 2. Volcanoes
 - 3. Radioactive energy
 - 4. Tides

Question ID : 26433064462
Status : Not Answered
Chosen Option : --

Q.4 Which of the following has unit m/s^2 ?

- Ans
- 1. Speed
 - 2. Distance
 - 3. Acceleration
 - 4. Velocity

Question ID : 264330105462
Status : Answered
Chosen Option : 3

Q.5 Shovana Narayan was awarded which of the following awards in 2013?

- Ans
- 1. Guru Deba Prasad
 - 2. Sangam Kala
 - 3. Kalidas Samman
 - 4. Bharat Muni Samman

Question ID : 26433090712
Status : Not Answered
Chosen Option : --

Q.6 Medisep is a unique and comprehensive social insurance scheme. This scheme was implemented by which state government?

- Ans
- 1. Karnataka
 - 2. Chhattisgarh
 - 3. Kerala
 - 4. Rajasthan

Question ID : 264330105313
Status : Not Answered
Chosen Option : --

Q.7 Which of the following is a unit of distance?

- Ans
- 1. Newton
 - 2. Watt
 - 3. Light year
 - 4. Joule

Question ID : 26433066455
Status : Answered
Chosen Option : 3

Q.8 Rajaraja I and Rajendra I belonged to the _____ dynasty.

- Ans
- 1. Chola
 - 2. Pallava
 - 3. Pandya
 - 4. Chalukya

Question ID : 26433091455
Status : Answered
Chosen Option : 1

Q.9 The abbreviation "CPCL" is associated with the petroleum industry in India. Expand "CPCL":

- Ans
- 1. Central Petroleum Corporation Limited
 - 2. Coimbatore Petroleum Corporation Limited
 - 3. Chennai Petroleum Corporation Limited
 - 4. Corporation of Petroleum and Chemicals Limited

Question ID : 26433089212
Status : Answered
Chosen Option : 4

Q.10 Which law, that was proposed in 1811, predicted that the same volume of gases at the same temperature and pressure would have the same number of molecules?

- Ans
- 1. Dalton's law
 - 2. Gay-Lussac's law
 - 3. Avogadro's law
 - 4. Charles' law

Question ID : 26433064085
Status : Answered
Chosen Option : 4

Q.11 Which of the following dynasty was not the part of "tripartite struggle", which fought for centuries to control over one particularly prized area Kanauj?

- Ans
- 1. Kadamba
 - 2. Rashtrakuta
 - 3. Pala
 - 4. Gurjara-Pratihara

Question ID : 264330105409
Status : Not Answered
Chosen Option : --

Q.12 Which is the most popular coal in commercial use?

- Ans 1. Bituminous
 2. Anthracite
 3. Peat
 4. Lignite

Question ID : 264330105505
Status : Not Answered
Chosen Option : --

Q.13 Which of the following countries will be hosting the first edition of ICC Women's Under-19 Cricket World Cup in 2023?

- Ans 1. India
 2. South Africa
 3. Bangladesh
 4. England

Question ID : 26433059406
Status : Answered
Chosen Option : 2

Q.14 Mariana trench is located in which ocean?

- Ans 1. Arctic ocean
 2. Pacific ocean
 3. Atlantic ocean
 4. Southern ocean

Question ID : 264330105625
Status : Not Answered
Chosen Option : --

Q.15 What is the minimum quorum required in the Lok Sabha so that it can transact any business?

- Ans 1. One-tenth of the total number of Members of the House
 2. One-fourth of the total number of Members of the House
 3. One-third of the total number of Members of the House
 4. One-fifth of the total number of Members of the House

Question ID : 26433072918
Status : Answered
Chosen Option : 3

Q.16 Savings deposits with Post Office savings banks are included in which measure of money supply?

- Ans 1. M1
 2. M4
 3. M2
 4. M3

Question ID : 264330105381
Status : Not Answered
Chosen Option : --

Q.17 In which of the following Olympic games did India NOT win Gold?

- Ans
- 1. 1948
 - 2. 1928
 - 3. 1932
 - 4. 1960

Question ID : 26433071543
Status : Not Answered
Chosen Option : --

Q.18 In which of the following years was the voting age reduced from 21 years to 18 years?

- Ans
- 1. 1990
 - 2. 1992
 - 3. 1988
 - 4. 1989

Question ID : 26433074891
Status : Answered
Chosen Option : 2

Q.19 Which sector was given the main emphasis in the second Five-Year Plan?

- Ans
- 1. Transport
 - 2. Agriculture
 - 3. Trade
 - 4. Industry

Question ID : 26433065446
Status : Answered
Chosen Option : 4

Q.20 Which Indian tabla virtuoso and musician won the 'Best Contemporary World Music Album' Grammy award for 'Global Drum Project'?

- Ans
- 1. Pandit Sandeep Das
 - 2. Ustad Alla Rakha
 - 3. Ustad Zakir Hussain
 - 4. Pandit Anindo Chatterjee

Question ID : 26433071527
Status : Not Answered
Chosen Option : --

Q.21 Who has been appointed as the new Attorney General of India by President Droupadi Murmu for a period of three years?

- Ans
- 1. Shehan Karunatilaka
 - 2. Dhananjaya Yashwant Chandrachud
 - 3. Rishi Sunak
 - 4. R. Venkataramani

Question ID : 264330105218
Status : Answered
Chosen Option : 4

Q.22 In leaves transpiration takes place through _____.

- Ans 1. Stomata
 2. Cork cell
 3. Epidermal cell
 4. Guard cells

Question ID : 264330105456
Status : Not Answered
Chosen Option : --

Q.23 Who was recognised as 'Asthana Nartaki' (resident dancer) of the Tirumala Tirupati Devasthanam for her contribution in the development and promotion of the Indian classical dance forms?

- Ans 1. Rukmini Devi
 2. Ragini Devi
 3. Yamini Krishnamurthy
 4. Uma Sharma

Question ID : 26433092378
Status : Not Answered
Chosen Option : --

Q.24 Manimekalai describes the story of which of the following?

- Ans 1. Kovalan and Madhavi's Daughter
 2. Kovalan's wife Madhavi
 3. Kovalan's first wife Kannagi
 4. Kovalan and Madhavi's Son

Question ID : 264330105205
Status : Not Answered
Chosen Option : --

Q.25 "A History of British India" is a work Published by _____.

- Ans 1. Lord Canning
 2. Lord Dalhousie
 3. James Mill
 4. Warren Hastings

Question ID : 264330105541
Status : Answered
Chosen Option : 3

Q.1 In $\triangle XYZ$, $\angle X=90^\circ$, $YZ=15$ cm, and $XZ=12$ cm. Then find $\cos Y$.

- Ans
- 1. $\frac{2}{5}$
 - 2. $\frac{4}{5}$
 - 3. $\frac{3}{5}$
 - 4. $\frac{3}{4}$

Question ID : 26433085502

Status : Answered

Chosen Option : 3

Q.2 What is the LCM of $(8x^3 + 80x^2 + 200x)$ and $(4x^4 + 16x^3 - 20x^2)$?

- Ans
- 1. $8x^2(x+5)^2(x-1)$
 - 2. $8x^2(x-1)^2(x+5)$
 - 3. $4x^2(x-1)^2(x+5)$
 - 4. $4x^2(x+5)^2(x-1)$

Question ID : 26433080082

Status : Answered

Chosen Option : 4

Q.3 25 men and 45 women can complete a piece of work in 15 days, while 15 men and 60 women can complete it in 20 days. In how many days can 69 men and 67 women complete the work?

- Ans
- 1. 10
 - 2. 5
 - 3. 8
 - 4. 6

Question ID : 26433075298

Status : Answered

Chosen Option : 4

Q.4 In a 1500 m race, if vehicle P gives vehicle Q a start of 200 m, then vehicle P wins the race by 8 sec. Alternatively, if vehicle P gives vehicle Q a start of 400 m, the race ends in a dead heat. How long does vehicle P take to run 1500 m?

- Ans
- 1. 44 sec
 - 2. 45 sec
 - 3. 40 sec
 - 4. 60 sec

Question ID : 26433072975

Status : Not Answered

Chosen Option : --

Q.5 If $\tan A - \tan B - \tan C = \tan A \tan B \tan C$, what is the value of A in terms of B and C?

Ans 1. $A = B + C$

2. $A = 2B - 2C$

3. $A = B - C$

4. $A = \frac{B - C}{2}$

Question ID : 26433061940

Status : Answered

Chosen Option : 1

Q.6 The table given below shows the budget allocation for education in five states in a year.

States	Budget allocation
J	325
K	175
L	350
M	525
N	635

The budget allocation for education in state K is what percent of the budget allocation for education in state L?

Ans 1. 150 percent

2. 55 percent

3. 45 percent

4. 50 percent

Question ID : 264330105747

Status : Answered

Chosen Option : 4

Q.7 If the diameter of a hemisphere is 35 cm, then what is the volume of hemisphere?

Ans 1. 11229.17 cm^3

2. 15248.46 cm^3

3. 17428.33 cm^3

4. 9478.26 cm^3

Question ID : 264330105849

Status : Answered

Chosen Option : 1

Q.8 Wheat worth Rs.80 per kg and Rs.50 per kg is mixed with a third variety in the ratio 1:2:3 . If the mixture is worth Rs.75 per kg, then the price of the third variety per kg will be equal to:

Ans 1. Rs.95

2. Rs.85

3. Rs.80

4. Rs.90

Question ID : 26433061133

Status : Answered

Chosen Option : 4

Q.9 The mean proportional of 6 and 54 is _____ more than 15.

Ans 1. 3

2. 6

3. 4

4. 5

Question ID : 26433066175

Status : Answered

Chosen Option : 1

Q.10 The initial profit percentage on the sale of an item was 55%. If the cost price of the item went up by 24% but the selling price remained the same, what would be the new profit percentage?

Ans 1. 36%

2. 25%

3. 28%

4. 33%

Question ID : 26433066301

Status : Answered

Chosen Option : 2

Q.11 The given table shows the consumption of grains in terms of kilograms of a small village per day over the given set of years. Study the table and answer the question that follows.

Year	Rice	Wheat	Maize	Barley
1998-2000	181	50	35	26
2003-2005	167	44	39	17
2008-2010	169	38	49	25
2013-2015	150	45	51	21
2018-2020	147	54	63	24

For wheat grains, for the given set of years, the highest consumption is approximately how much per cent of that of all grains consumption per day in such a set of years?

Ans 1. 13.52%

2. 18.75%

3. 15.32%

4. 17.85%

Question ID : 26433085492

Status : Not Answered

Chosen Option : --

Q.12 Steel is used to make a hemispherical bowl that is 0.37 cm thick. The bowl's inner radius is 6 cm. Find the bowl's outside curved surface area (take $\pi = \frac{22}{7}$).

Ans 1. 532 cm²

2. 255.0548 cm²

3. 484 cm²

4. 523.4107 cm²

Question ID : 26433065307

Status : Answered

Chosen Option : 2

Q.13 if $\tan^2 \alpha = 3 + Q^2$, then $\sec \alpha + \tan^3 \alpha \operatorname{cosec} \alpha = ?$

- Ans
- 1. $(3 + Q^2)^{\frac{3}{2}}$
 - 2. $(7 + Q^2)^{\frac{3}{2}}$
 - 3. $(5 - Q^2)^{\frac{3}{2}}$
 - 4. $(4 + Q^2)^{\frac{3}{2}}$

Question ID : 26433066338
Status : Answered
Chosen Option : 4

Q.14 The height of an equilateral triangle is $9\sqrt{3}$ cm. What is the area of this equilateral triangle?

- Ans
- 1. $92\sqrt{3}$ cm²
 - 2. $67\sqrt{3}$ cm²
 - 3. $49\sqrt{3}$ cm²
 - 4. $81\sqrt{3}$ cm²

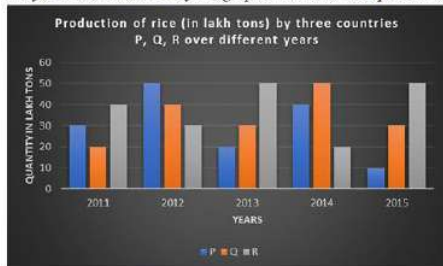
Question ID : 264330105829
Status : Answered
Chosen Option : 4

Q.15 If the angles of a triangle are in the ratio of 1 : 2 : 3, what is the type of such triangle?

- Ans
- 1. Isosceles triangle
 - 2. Equilateral triangle
 - 3. Right-angle triangle
 - 4. Obtuse- angle triangle

Question ID : 26433071272
Status : Answered
Chosen Option : 3

Q.16 The given bar graph shows the data of the production of rice (in lakh tons) by three different countries P, Q and R over the years mentioned. Study the graph and answer the question that follows.



The average production for the five years is maximum for which country?

- Ans
- 1. Only Q
 - 2. P and Q
 - 3. P and R
 - 4. Only R

Question ID : 26433076086
Status : Answered
Chosen Option : 4

Q.17 A person lent certain sum of money at the annual rate of 7 percent on simple interest and the interest received in 11 years is Rs. 920 less than the sum lent. What is the sum lent?

- Ans
- 1. Rs. 41200
 - 2. Rs. 4000
 - 3. Rs. 52000
 - 4. Rs. 2400

Question ID : 264330105670
Status : Answered
Chosen Option : 2

Q.18 Simplify the following equation. What is the difference between the two values of x?

$$7x + 4\{x^2 \div (5x \div 10)\} - 3\left\{5\frac{1}{3} - x^3 \div (3x^2 \div x)\right\} = 0$$

- Ans
- 1. 8
 - 2. 16
 - 3. 5
 - 4. 17

Question ID : 26433082790
Status : Answered
Chosen Option : 4

Q.19 If a number $K = 42 \times 25 \times 54 \times 135$ is divisible by 3^a , then find the maximum value of a.

- Ans
- 1. 6
 - 2. 7
 - 3. 4
 - 4. 5

Question ID : 26433075715
Status : Answered
Chosen Option : 2

Q.20 If $x^2 + y^2 + 2y + 4x + 5 = 0$, then $\frac{x+y}{x-y} =$ _____.

Ans 1. -3

2. $\frac{1}{3}$

3. -1

4. 3

Question ID : 26433091950

Status : Answered

Chosen Option : 4

Q.21 A mask manufacturing company manufactured 'X' number of masks in 2018. It increased its manufacturing capacity by 30% in 2019 and further increased its manufacturing by 15% in 2020. In 2021, due to the machinery breakdown, its manufacturing declined by 40%. What is the value of 'X' if it manufactured 179400 masks in 2021?

Ans 1. 180000

2. 230000

3. 200000

4. 210000

Question ID : 26433061454

Status : Answered

Chosen Option : 3

Q.22 The value of $\frac{(x-y)^3 + (y-z)^3 + (z-x)^3}{6(x-y)(y-z)(z-x)}$, where $x \neq y \neq z$, is equal to:

Ans 1. $\frac{1}{4}$

2. $\frac{1}{2}$

3. $\frac{1}{3}$

4. $\frac{1}{9}$

Question ID : 26433074494

Status : Answered

Chosen Option : 2

Q.23 The table given below shows the number of toys manufactured by five factories.

Factory	Toys
F1	250
F2	450
F3	350
F4	150
F5	550

Number of toys manufactured by F2 are what percent of the number of toys manufactured by F4?

- Ans
- 1. 200 percent
 - 2. 100 percent
 - 3. 300 percent
 - 4. 50 percent

Question ID : 264330105714

Status : Answered

Chosen Option : 3

Q.24 In a shop, a discount of 5 percent is provided, and if the total payable amount after discount is more than ₹2,000, then an additional discount of 10 percent is provided. Determine the final amount to be paid (in ₹) by a customer, if he buys five products each of price ₹500.

- Ans
- 1. ₹2,500
 - 2. ₹2,225.5
 - 3. ₹2,375.5
 - 4. ₹2,137.5

Question ID : 26433076006

Status : Answered

Chosen Option : 4

Q.25 If the circumference of a circle is 220 cm, then what is its radius?

- Ans
- 1. 26 cm
 - 2. 25 cm
 - 3. 35 cm
 - 4. 40 cm

Question ID : 264330105842

Status : Answered

Chosen Option : 3

Section : English Comprehension

Q.1 Select the correct direct form of the given sentence.
She said that she could not believe him.

- Ans
- 1. She said, "You cannot believe him."
 - 2. She said, "I may not believe him."
 - 3. She said, "I cannot believe him."
 - 4. She says, "I could not believed him."

Question ID : 264330104638

Status : Answered

Chosen Option : 1

Q.2 Select the most appropriate synonym of the underlined word in the given sentence.

The next move of the opponent was anticipated by the team.

- Ans
- 1. Forgotten
 - 2. Predicted
 - 3. Suspected
 - 4. Dreaded

Question ID : 26433071963
Status : Answered
Chosen Option : 2

Q.3 Select the most appropriate option to fill in the blank and complete the collocation.

Akshay always gives _____ to Johana for his success.

- Ans
- 1. blame
 - 2. chance
 - 3. opportunity
 - 4. credit

Question ID : 26433073564
Status : Answered
Chosen Option : 4

Q.4 Select the most appropriate synonym of the underlined word in the following sentence.

The way Sheetal imparts knowledge to her students is really praiseworthy.

- Ans
- 1. discloses
 - 2. transmits
 - 3. exposes
 - 4. admits

Question ID : 26433066414
Status : Answered
Chosen Option : 3

Q.5 Select the most appropriate meaning of the underlined idiom in the given sentence.
Nobody in the conference seemed to believe the cock and bull story about such a major movie star.

- Ans
- 1. Factual story
 - 2. Wildly exaggerated or falsified story
 - 3. Interesting story
 - 4. Secretive story

Question ID : 26433061577
Status : Answered
Chosen Option : 2

Q.6 Select the sentences that contains no spelling errors.

- Ans
- 1. My mother asked me to purchase two bread knives having serrated edges.
 - 2. My mother asked me to purchase two bread knives having seerated edges.
 - 3. My mother asked me to purchase two bread knives having serratted edges.
 - 4. My mother asked me to purchase two bread knives having serated edges.

Question ID : 26433070694
Status : Answered
Chosen Option : 4

Q.7 Select the option that can be used as a one-word substitute for the given group of words

Allowance given to a wife from her husband on separation

- Ans 1. Allegory
 2. Alimony
 3. Affidavit
 4. Advocacy

Question ID : 26433070704
Status : Answered
Chosen Option : 2

Q.8 Select the option that expresses the given sentence in passive voice.

The secretary was noting down the dictation.

- Ans 1. The secretary noted the dictation.
 2. The dictation was noted down by the secretary.
 3. The notes were noted by the secretary.
 4. The dictation was being noted down by the secretary.

Question ID : 26433088945
Status : Answered
Chosen Option : 4

Q.9 Fill in the blank with the correct collocation.

Holm, a Danish traveller, had made a/an _____ replica of the tablet, which in 1908 was deposited in the Metropolitan Museum of Art, New York.

- Ans 1. wild
 2. obscure
 3. corrupt
 4. exact

Question ID : 26433090504
Status : Answered
Chosen Option : 4

Q.10 Rectify the sentence by selecting the correct spelling of the underlined word.

She is a nuisance to her family.

- Ans 1. nuisince
 2. niusance
 3. newsance
 4. nuisance

Question ID : 26433065145
Status : Answered
Chosen Option : 4

Q.11 Select the most appropriate synonym of the bracketed words to fill in the blank.

The lights _____ (lighting up) the artwork on the walls of the museum were looking beautiful.

- Ans
- 1. enlightening
 - 2. illuminating
 - 3. trafficking
 - 4. mesmerising

Question ID : 26433071820
Status : Answered
Chosen Option : 2

Q.12 Select the most appropriate meaning of the underlined idiom that can be substituted in the following sentence.

The game is now in full swing.

- Ans
- 1. very passive
 - 2. very uninteresting
 - 3. playing on the swings
 - 4. very active

Question ID : 26433072229
Status : Answered
Chosen Option : 4

Q.13 Select the most appropriate ANTONYM of the highlighted word in the following sentence.

The **managing** director produced cogent reasons for the change in HR policies.

- Ans
- 1. Compelling
 - 2. Unconvincing
 - 3. Pertinent
 - 4. Unexpected

Question ID : 26433065224
Status : Answered
Chosen Option : 2

Q.14 Rearrange the parts of the sentence in correct order.

Thorium has
P. and is part of a nuclear programme in India
Q. of nuclear reactor in countries including
R. been tested as a fuel in other types
S. the United States, Germany and the United Kingdom,

- Ans
- 1. RQSP
 - 2. RPQS
 - 3. PSQR
 - 4. SPQR

Question ID : 264330104686
Status : Answered
Chosen Option : 1

Q.15 The following sentence has been split into four segments. Identify the segment that contains a grammatical error.

You must / be hurry, / otherwise you will / miss the train.

- Ans
- 1. miss the train.
 - 2. be hurry,
 - 3. You must
 - 4. otherwise you will

Question ID : 26433086306
Status : Answered
Chosen Option : 2

Q.16 The following sentence has been split into four segments. Identify the segment that contains a grammatical error.

The boy had run away / because he couldn't stand / his father beat him / for one more day.

- Ans
- 1. his father beat him
 - 2. because he couldn't stand
 - 3. The boy had run away
 - 4. for one more day

Question ID : 26433088159
Status : Answered
Chosen Option : 1

Q.17 Sentences of a paragraph are given below in jumbled order. Arrange the sentences in the correct order to form a meaningful and coherent paragraph.

A. Poor posture may strain neck muscles, whether you're leaning over your computer or hunching over your workstation.

B. However, neck pain may occasionally be an indication of a more serious issue.

C. Neck pain is a frequent problem among many people these days.

D. If your neck pain is accompanied by numbness or lack of strength in your arms or hands, or if you experience shooting pain into your shoulder or down your arm, you should seek medical attention.

- Ans
- 1. CADB
 - 2. CABD
 - 3. BDCA
 - 4. ABDC

Question ID : 26433093052
Status : Answered
Chosen Option : 1

Q.18 Select the correct active form of the given sentence.
Football tournament was being avoided by his son.

- Ans
- 1. His son is avoiding football tournament.
 - 2. His son was avoiding football tournament.
 - 3. His son avoided football tournament.
 - 4. His son avoids football tournament.

Question ID : 264330104589
Status : Answered
Chosen Option : 2

Q.19 Select the most appropriate option to substitute the underlined segment in the given sentence. If there is no need to substitute it, select 'No substitution'.

She lived in well-resourced surroundings.

- Ans 1. **luxurious**
 2. **luxuriousness**
 3. **luxury**
 4. **No substitute**

Question ID : **26433073901**
Status : **Answered**
Chosen Option : 1

Q.20 Rearrange the parts of the sentence in correct order.

The Google doodle

P. with a cup of green tea, beaker and

Q. Tsujimura working in her laboratory

R. some green tea leaves by the side

S. features a graphical representation of

- Ans 1. **RSPQ**
 2. **PQSR**
 3. **RPQS**
 4. **SQPR**

Question ID : **264330104688**
Status : **Answered**
Chosen Option : 4

Comprehension:

In the following passage, some words have been deleted. Read the passage carefully and select the most appropriate option to fill in each blank.

One's options in this world are as (1) _____ as the horizon, which is technically a circle and thus (2) _____ broad. Yet we must choose each step we take with (3) _____ caution, for the footprints we leave (4) _____ are as important as the (5) _____ we will follow. They're part of the same journey: our story.

SubQuestion No : 21

Q.21 Select the most appropriate option to fill in blank number 1.

- Ans 1. **narrow**
 2. **slight**
 3. **contracted**
 4. **vast**

Question ID : **26433084944**
Status : **Answered**
Chosen Option : 4

Comprehension:

In the following passage, some words have been deleted. Read the passage carefully and select the most appropriate option to fill in each blank.

One's options in this world are as (1) _____ as the horizon, which is technically a circle and thus (2) _____ broad. Yet we must choose each step we take with (3) _____ caution, for the footprints we leave (4) _____ are as important as the (5) _____ we will follow. They're part of the same journey: our story.

SubQuestion No : 22**Q.22 Select the most appropriate option to fill in blank number 2.**

- Ans 1. rigorously
 2. severely
 3. strictly
 4. infinitely

Question ID : 26433084945

Status : Answered

Chosen Option : 4

Comprehension:

In the following passage, some words have been deleted. Read the passage carefully and select the most appropriate option to fill in each blank.

One's options in this world are as (1) _____ as the horizon, which is technically a circle and thus (2) _____ broad. Yet we must choose each step we take with (3) _____ caution, for the footprints we leave (4) _____ are as important as the (5) _____ we will follow. They're part of the same journey: our story.

SubQuestion No : 23**Q.23 Select the most appropriate option to fill in blank number 3.**

- Ans 1. utmost
 2. slack
 3. unmindful
 4. inattentive

Question ID : 26433084946

Status : Answered

Chosen Option : 1

Comprehension:

In the following passage, some words have been deleted. Read the passage carefully and select the most appropriate option to fill in each blank.

One's options in this world are as (1) _____ as the horizon, which is technically a circle and thus (2) _____ broad. Yet we must choose each step we take with (3) _____ caution, for the footprints we leave (4) _____ are as important as the (5) _____ we will follow. They're part of the same journey: our story.

SubQuestion No : 24**Q.24 Select the most appropriate option to fill in blank number 4.**

- Ans 1. discarded
 2. surplus
 3. behind
 4. excessive

Question ID : 26433084947

Status : Answered

Chosen Option : 3

Comprehension:

In the following passage, some words have been deleted. Read the passage carefully and select the most appropriate option to fill in each blank.

One's options in this world are as (1) _____ as the horizon, which is technically a circle and thus (2) _____ broad. Yet we must choose each step we take with (3) _____ caution, for the footprints we leave (4) _____ are as important as the (5) _____ we will follow. They're part of the same journey: our story.

SubQuestion No : 25

Q.25 Select the most appropriate option to fill in blank number 5.

Ans 1. approach

2. path

3. manner

4. custom

Question ID : 26433084948

Status : Answered

Chosen Option : 2

SSC CGL 2022 TIER 1 DECEMBER 6, 2022 SHIFT 2 QUESTION PAPER

Exam Date	07/12/2022
Exam Time	11:45 AM - 12:45 PM
Subject	Combined Graduate Level Examination Tier I 2022

Section : General Intelligence and Reasoning

Q.1 In the following question below are given some statements followed by some conclusions based on those statements. Taking the given statements to be true even if they seem to be at variance from commonly known facts. Read all the conclusions and then decide which of the given conclusion logically follows the given statements.

Statements:

I. All M are A.

II. No A is R.

Conclusion:

I. No M is R.

II. Some A are M.

III. Some R are A.

- Ans 1. Both conclusions I and II follows
2. Both conclusions II and III follows
3. All conclusion follows
4. Both conclusions I and III follows

Question ID : 264330104939

Status : Answered

Chosen Option : 1

Q.2 Which two signs and two numbers should be interchanged in the following equation to make it correct?

$$98 - 9 \times 21 \div 7 + 56 = 69$$

- Ans 1. 56 and 9, + and \times
2. 56 and 21, + and \times
3. 98 and 9, + and \times
4. 21 and 7, + and -

Question ID : 26433068681

Status : Not Answered

Chosen Option : --

Q.3 By interchanging the given two signs which of the following equation will be correct?
+ and -

- Ans 1. $55 \div 11 - 15 + 3 \times 2 = 15$
2. $4 \times 3 - 6 + 2 + 7 = 7$
3. $15 - 7 \times 8 + 18 \div 3 = 65$
4. $529 \div 23 + 10 - 5 \times 4 = 30$

Question ID : 264330105117

Status : Not Answered

Chosen Option : --

Q.4 After arranging the given words according to dictionary order, which word will come at 'Fourth' position?

1. Remark
2. Remain
3. Remember
4. Remnant
5. Remanent

Ans 1. Remanent
 2. Remark
 3. Remnant
 4. Remember

Question ID : 264330104891
Status : Answered
Chosen Option : 4

Q.5 A series is given with one term missing. Select the correct alternative from the given ones that will complete the series.
NMTS, SGAK, XAHC, CUOU, ?

Ans 1. OMQR
 2. HVMO
 3. HOVM
 4. RMNO

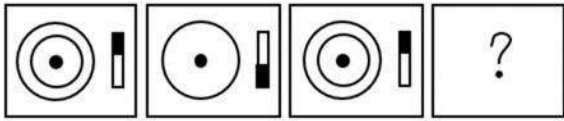
Question ID : 264330104827
Status : Answered
Chosen Option : 3

Q.6 If $A \div B$ means that A is the father of B, $A - B$ means that A is the mother of B, $A + B$ means that A is the brother of B then which of the following expression shows that P is the mother of R?

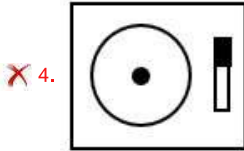
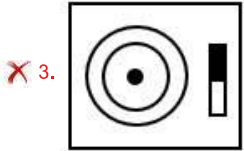
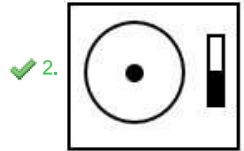
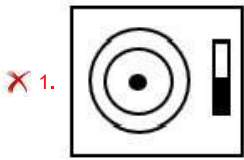
Ans 1. $Q - P + R$
 2. $P - Q + R$
 3. $P - Q \div R$
 4. $R + P - Q$

Question ID : 264330104984
Status : Answered
Chosen Option : 2

Q.7 Select the figure that will replace the question mark (?) in the following figure series.



Ans



Question ID : 26433065980

Status : Answered

Chosen Option : 2

Q.8 Three of the following letter-clusters are alike in some manner and hence form a group. Which letter-cluster does not belong to that group?

Ans ✓ 1. HBL

✗ 2. IJR

✗ 3. XUC

✗ 4. TYG

Question ID : 26433081493

Status : Answered

Chosen Option : 1

Q.9 Select the correct mirror image of the given combination when the mirror is placed at 'PQ' as shown below.



- Ans
- 1.
 - 2.
 - 3.
 - 4.

Question ID : 26433067822

Status : Answered

Chosen Option : 4

Q.10 Select the correct combination of mathematical signs to sequentially replace the % signs and to balance the given equation.

$$[(32 \% 28) \% (6 \% 4)] \% (1 \% 7)] \% 5 \% 20$$

- Ans
- 1. -, +, x, ÷, x, x, =
 - 2. x, ÷, x, x, -, +, =
 - 3. x, -, +, x, ÷, x, =
 - 4. -, +, x, x, x, x, =

Question ID : 26433087054

Status : Not Answered

Chosen Option : --

Q.11 Three different positions of the same dice are shown. Find the number on the face opposite the face having '3'.

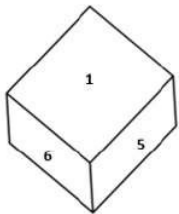


Figure 1

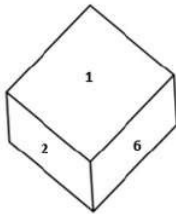


Figure 2

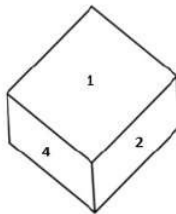


Figure 3

- Ans
- 1. 1
 - 2. 2
 - 3. 5
 - 4. 6


Question ID : 26433079372

Status : Answered

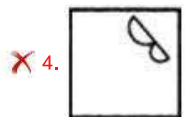

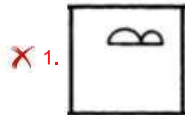
Chosen Option : 1

Q.12 Select the figure from among the given options that can replace the question mark

(?) in the following series.



Ans



Question ID : 26433080520

Status : Not Answered

Chosen Option : --

Q.13 In a certain code language, 'ABOUT' is written as 'YZQSR' and 'PARTS' is written as 'NYTRQ'. How will 'PLANT' be written in that language?

Ans 1. NICRL

2. NJCLR

3. RJCLV

4. NJDLP

Question ID : 26433069566

Status : Answered

Chosen Option : 2

Q.14 Select the option that is related to the third term in the same way as the second term is related to the first term and the sixth term is related to the fifth term.

5 : 150 :: 6 : ? :: 8 : 576

Ans 1. 252

2. 255

3. 225

4. 222

Question ID : 26433078945

Status : Answered

Chosen Option : 1

Q.15 Which letter cluster will replace the question mark (?) to complete the given series?
ZYWT, XWUR, VUSP, ?, RQOL

- Ans 1. TSQN
 2. TSQM
 3. TSPN
 4. STQN

Question ID : 26433059854
Status : Answered
Chosen Option : 1

Q.16 Select the option figure in which the given figure (X) is embedded as its part (rotation is NOT allowed).



- Ans 1.
- 2.
- 3.
- 4.

Question ID : 26433068899
Status : Answered
Chosen Option : 2

Q.17 Study the given pattern carefully and select the number that can replace the question mark (?) in it.

First row - 6, 9, 90

Second row - 12, 8, 120

Third row - 13, 6, ?

(NOTE : Operations should be performed on the whole numbers, without breaking down the numbers into its constituent digits. E.g. 13 – Operations on 13 such as adding / subtracting / multiplying etc. to 13 can be performed. Breaking down 13 into 1 and 3 and then performing mathematical operations on 1 and 3 is NOT allowed)

- Ans 1. 114
 2. 125
 3. 102
 4. 110

Question ID : 26433069202
Status : Not Answered
Chosen Option : --

Q.18 Which of the following numbers will replace the question mark (?) in the given series?
286, 192, 263, 176, 240, 160, 217, 144, ?

- Ans 1. 186
 2. 194
 3. 165
 4. 190

Question ID : 26433067870
Status : Answered
Chosen Option : 2

Q.19 Select the set in which the numbers are related in the same way as are the numbers of the following set.
(NOTE: Operations should be performed on the whole numbers, without breaking down the numbers into its constituent digits.)
(12, 112, 9)
(10, 84, 8)

- Ans 1. (12, 149, 12)
 2. (13, 55, 4)
 3. (11, 99, 9)
 4. (18, 94, 5)

Question ID : 26433069231
Status : Not Answered
Chosen Option : --

Q.20 Three statements are given, followed by two conclusions numbered I and II. Assuming the statements to be true, even if they seem to be at variance with commonly known facts, decide which of the conclusions logically follow(s) from the statements.

Statements:

All c are f.

No f is t.

All p are c.

Conclusions:

I. Some t are c.

II. No p is t.

- Ans 1. Only conclusion II follows.
 2. Only conclusion I follows.
 3. Neither conclusion I nor II follows.
 4. Either conclusion I or II follows.

Question ID : 26433068490
Status : Answered
Chosen Option : 1

Q.21 In the following question, four number pairs are given. In each pair the number on left side of (-) is related to the number of the right side of (-) with some Logic/Rule/Relation. Three pairs are similar on basis of same Logic/Rule/Relation. Select the odd one out from the given alternatives. (NOTE: Operations should be performed on the whole numbers, without breaking down the numbers into its constituent digits. E.g.13 – Operations on 13 such as adding /subtracting /multiplying etc. to 13 can be performed. Breaking down 13 into 1 and 3 and then performing mathematical operations on 1 and 3 is not allowed)

- Ans 1. 7 – 24
 2. 13 – 42
 3. 11 – 37
 4. 5 – 18

Question ID : 264330105066
Status : Answered
Chosen Option : 3

Q.22 'A ∞ B' means 'A is the sister of B'.
'A * B' means 'A is the mother of B'.
'A @ B' means 'B is the father of A'.
'A # B' means 'B is the wife of A'.
If V ∞ U @ W # Y * Z, then how is V related to Z?

- Ans 1. Sister
 2. Mother
 3. Wife
 4. Father

Question ID : 26433068462
Status : Answered
Chosen Option : 1

Q.23 Select the word-pair that best represents a similar relationship to the one expressed in the given pair of words.

(The words must be considered as meaningful English words and must not be related to each other based on the number of letters/number of consonants/vowels in the word)

Thermometer : Temperature

- Ans 1. Glucometer : Measure
 2. Odometer : Car
 3. Oximeter : Oxygen level of blood
 4. Pedometer : Bone Fractures

Question ID : 26433068420
Status : Answered
Chosen Option : 3

Q.24 In a certain code language, 'PRESIDENT' is written as 'RPESDINTE' and 'KNOWLEDGE' is written as 'NKOWELGED'. How will 'EDUCATION' be written in that language?

- Ans 1. DEUCTAONI
 2. DEUCTOANI
 3. DUECTAONI
 4. DECUTAONI

Question ID : 26433059889
Status : Answered
Chosen Option : 1

Q.25 Select the option that is related to the fifth letter-cluster in the same way as the second letter-cluster is related to the first letter-cluster and the fourth letter-cluster is related to the third letter-cluster.

BEAR : QZDA :: DUST : SRTC :: GOLD : ?

- Ans 1. CKNF
 2. KCFN
 3. CNFJ
 4. FGNC

Question ID : 26433069018
Status : Answered
Chosen Option : 1

Q.1 With which of the following Indian states is the folk dance Lezim associated?

Ans 1. Maharashtra

2. Kerala

3. Arunachal Pradesh

4. Jharkhand

Question ID : 26433064652

Status : **Not Answered**

Chosen Option : --

Q.2 The 11th Fundamental Duty was added to Indian Constitution in which year?

Ans 1. 2000

2. 1970

3. 2002

4. 2006

Question ID : 26433080967

Status : **Answered**

Chosen Option : 2

Q.3 How many delegates participated in the second session of Indian National Congress?

Ans 1. 434

2. 628

3. 212

4. 190

Question ID : 26433085279

Status : **Not Answered**

Chosen Option : --

Q.4 In October 2022, 'Tele-MANAS' initiative was launched by the Union Ministry of Health and Family Welfare. What does 'M' stand for in MANAS?

Ans 1. Memorandum

2. Multicultural

3. Medicinal

4. Mental health

Question ID : 264330105289

Status : **Answered**

Chosen Option : 3

Q.5 'Nupa' dance is associated with which Indian state?

Ans 1. Karnataka

2. Manipur

3. Jharkhand

4. Tamil Nadu

Question ID : 26433054324

Status : **Not Answered**

Chosen Option : --

Q.6 The largest wind farm cluster of India is located in _____.

- Ans 1. Gujarat
 2. Tamil Nadu
 3. Maharashtra
 4. Karnataka

Question ID : 264330105501
Status : Answered
Chosen Option : 2

Q.7 Which of the following is a right bank tributary of the Ganga?

- Ans 1. Son
 2. Gomati
 3. Gandak
 4. Koshi

Question ID : 26433066515
Status : Answered
Chosen Option : 1

Q.8 The Delhi Municipal Corporation (Amendment) Bill, 2022 was passed in Lok Sabha on _____.

- Ans 1. April 30, 2022
 2. April 20, 2022
 3. May 15, 2022
 4. March 25, 2022

Question ID : 264330105290
Status : Not Answered
Chosen Option : --

Q.9 Which of the following festivals is NOT associated with Sikkim?

- Ans 1. Losar
 2. Lohri
 3. Sakewa
 4. Yenya

Question ID : 26433071668
Status : Answered
Chosen Option : 2

Q.10 Identify the function of the enzyme trypsin.

- Ans 1. Digesting proteins
 2. Breaking down carbohydrates
 3. Digesting roughage and fats
 4. Emulsifying insulin

Question ID : 26433086748
Status : Answered
Chosen Option : 2

Q.11 In India the residuary powers to legislate any matter that is NOT mentioned in the three federal lists lies with the _____.

- Ans
- 1. supreme court
 - 2. union legislature
 - 3. state legislature
 - 4. respective ministry

Question ID : 26433064840
Status : Answered
Chosen Option : 2

Q.12 The interest rate at which the Reserve Bank of India provides overnight liquidity to banks is called _____.

- Ans
- 1. Reverse repo rate
 - 2. Marginal standing facility rate
 - 3. Repo rate
 - 4. Leverage rate

Question ID : 264330105377
Status : Not Answered
Chosen Option : --

Q.13 Which country is the leading producer of jute?

- Ans
- 1. Brazil
 - 2. China
 - 3. India
 - 4. Columbia

Question ID : 264330105614
Status : Not Answered
Chosen Option : --

Q.14 Thanjavur was the capital of which dynasty?

- Ans
- 1. Pala
 - 2. Chola
 - 3. Vakataka
 - 4. Parmara

Question ID : 264330105441
Status : Not Answered
Chosen Option : --

Q.15 _____ is a group of cells similar in structure and function.

- Ans
- 1. Organ system
 - 2. Organ
 - 3. Tissue
 - 4. Molecule

Question ID : 264330105451
Status : Answered
Chosen Option : 3

Q.16 Which law was based on notes of the music?

- Ans 1. Newton law
 2. Law of octaves
 3. Mendeleev law
 4. Modern periodic law

Question ID : 26433086700
Status : Answered
Chosen Option : 2

Q.17 In November 2022, the Supreme Court upheld the validity of the 103 constitutional amendment providing _____ per cent reservation to people belonging to economically weaker section (EWS).

- Ans 1. 5
 2. 15
 3. 10
 4. 20

Question ID : 264330105213
Status : Answered
Chosen Option : 3

Q.18 The Rural Landless Labour Employment Guarantee Programme (RLEGP) was started in which of the following Five-Year Plans?

- Ans 1. Sixth
 2. Seventh
 3. Fifth
 4. Fourth

Question ID : 26433064513
Status : Not Answered
Chosen Option : --

Q.19 Which of the following book was written by Aryabhata?

- Ans 1. Dhatupatha
 2. Aryabhatiyam
 3. Natya Shastra
 4. Romaka Siddhanta

Question ID : 264330105207
Status : Answered
Chosen Option : 2

Q.20 Which of the following was "NOT" a main centre of Revolt of 1857?

- Ans 1. Kanpur
 2. Bareilly
 3. Rohtak
 4. Lucknow

Question ID : 264330105588
Status : Answered
Chosen Option : 3

Q.21 Which of the following river basin is present in Odisha?

- Ans 1. Narmada
 2. Mahanadi
 3. Krishna
 4. Kaveri

Question ID : 264330105666
Status : Answered
Chosen Option : 2

Q.22 'Samvidhan Divas', is celebrated on _____.

- Ans 1. 18th November
 2. 26th January
 3. 26th November
 4. 15th August

Question ID : 26433086585
Status : Answered
Chosen Option : 3

Q.23 The first edition of the Commonwealth Youth Games was held at _____.

- Ans 1. Edinburgh
 2. Sydney
 3. Melbourne
 4. Brisbane

Question ID : 26433071547
Status : Not Answered
Chosen Option : --

Q.24 Which of the following strokes in swimming does NOT start with a dive into the pool from outside?

- Ans 1. Butterfly
 2. Backstroke
 3. Breaststroke
 4. Freestyle

Question ID : 26433059445
Status : Not Answered
Chosen Option : --

Q.25 The chemical formula of gypsum is _____.

- Ans 1. $\text{CaSO}_4 \cdot 12\text{H}_2\text{O}$
 2. $\text{MgSO}_4 \cdot 12\text{H}_2\text{O}$
 3. $\text{MgSO}_4 \cdot 2\text{H}_2\text{O}$
 4. $\text{CaSO}_4 \cdot 2\text{H}_2\text{O}$

Question ID : 26433066468
Status : Answered
Chosen Option : 4

Q.1 The perimeter of a square is 124 metres. What is its area?

- Ans
- 1. 448 m²
 - 2. 884 m²
 - 3. 764 m²
 - 4. 961 m²

Question ID : 26433063902

Status : Answered

Chosen Option : 4

Q.2 In triangle XYZ, P is the incentre of the triangle XYZ. If angle XYZ = 50 degree, then what is the value of angle XPZ?

- Ans
- 1. 100 degree
 - 2. 115 degree
 - 3. 140 degree
 - 4. 130 degree

Question ID : 264330105834

Status : Answered

Chosen Option : 2

Q.3 A shopkeeper sells an article at $13\frac{1}{2}\%$ loss. If he sells it for ₹1,274 more, then he gains 11%. What is the cost price of the article?

- Ans
- 1. Rs.4,874
 - 2. Rs.4,800
 - 3. Rs.5,200
 - 4. Rs.5,274

Question ID : 26433063696

Status : Answered

Chosen Option : 3

Q.4 The table given below shows the expenditure of two companies in different years.

	Companies	
Years	L	M
P	200	500
Q	150	350
R	300	250
S	100	150
T	400	100

J1 = The total expenditure of company L in all the 5 years.

J2 = The total expenditure of company M in all the 5 years.

What is the value of (J1 : J2)?

- Ans
- 1. 27 : 23
 - 2. 21 : 29
 - 3. 23 : 27
 - 4. 29 : 23

Question ID : 264330105741

Status : Answered

Chosen Option : 3

Q.5 The average weight of 12 persons increases by 3.5 kg when a new person comes in place of one of them weighing 58 kg. The weight of the new person is:

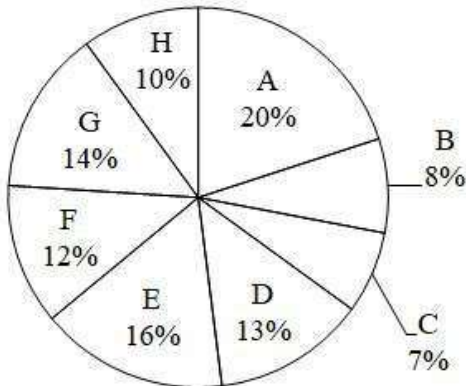
- Ans 1. 100 kg
 2. 16 kg
 3. 70 kg
 4. 42 kg

Question ID : 26433062626

Status : Answered

Chosen Option : 1

Q.6 The pie chart given below shows the number of cars sold by 8 different companies. The total number of car sold by all these 8 companies are 10,000. Number of cars sold by a particular company is shown as a percent of total number of cars sold by all these 8 companies.



Which of the following statement is correct?

- I. The average number of cars sold by company B, F and H are 100.
II. The ratio of number of cars sold by A to the number of cars sold by E are 4 : 5.

- Ans 1. Only I
 2. Only II
 3. Neither I nor II
 4. Both I and II

Question ID : 264330105768

Status : Not Answered

Chosen Option : --

Q.7 If $K + \frac{1}{K} + 2 = 0$ and $K < 0$, then what is the value of $K^{10} + \frac{1}{K^{11}}$?

- Ans 1. 1
 2. 0
 3. -1
 4. 2

Question ID : 264330105916

Status : Answered

Chosen Option : 4

Q.8 What is the value of $\cos 45^\circ \sin 15^\circ$?

Ans

1. $\frac{(\sqrt{3}-1)}{2}$

2. $\frac{(\sqrt{3}-1)}{4}$

3. $(\sqrt{3}+1)$

4. $2\sqrt{3}-1$

Question ID : 264330105902

Status : Answered

Chosen Option : 2

Q.9 If $x + \frac{1}{x} = 2$, then $x^3 + \frac{1}{x^3} = ?$

Ans

1. 1

2. 8

3. 2

4. 0

Question ID : 26433075267

Status : Answered

Chosen Option : 3

Q.10 Study the following table and select the correct statement.

Height (in cm)	Weight (in kg)
156	69
155	68
145	61
142	60
141	58
139	55
135	45

Ans

1. Weight increases with the increase in height.

2. Weight increases with the decrease in height.

3. Weight decreases with the increase in height.

4. Height and weight are not related to each other.

Question ID : 26433092154

Status : Answered

Chosen Option : 1

Q.11 Two concentric circles are drawn with radii 20 cm and 16 cm. What will be the length of a chord of the larger circle which is tangent to the smaller circle?

- Ans
- 1. 34 cm
 - 2. 24 cm
 - 3. 48 cm
 - 4. 12 cm

Question ID : 26433066394
Status : Answered
Chosen Option : 2

Q.12 The circumference of the two circles is 308 cm and 440 cm respectively. What is the difference between their radii?

- Ans
- 1. 21 cm
 - 2. 49 cm
 - 3. 35 cm
 - 4. 14 cm

Question ID : 264330105856
Status : Answered
Chosen Option : 1

Q.13

$$3\left[a - \frac{1}{a}\right] + \left[a - \frac{1}{a}\right]^3 = ?$$

- Ans
- 1. $a^2 - \frac{1}{a^3}$
 - 2. $a^3 - \frac{1}{a^3}$
 - 3. $a^3 + \frac{1}{a^3}$
 - 4. $a^2 - \frac{1}{a^2}$

Question ID : 26433085783
Status : Answered
Chosen Option : 2

Q.14 How many numbers from 1 to 430 are divisible by 7 and 11 both?

- Ans
- 1. 5
 - 2. 11
 - 3. 9
 - 4. 7

Question ID : 26433074219
Status : Answered
Chosen Option : 1

Q.15 In a partnership firm two partners, Vijay and Praveen are working on an assignment. It will take 12 weeks for Vijay to complete the entire assignment alone, while Praveen will take 8 weeks to complete it alone. Due to work pressure, they decided to work on that assignment on the alternate week basis. In the first week Praveen will work and in the second week Vijay will work and so on. In how many weeks the work will be completed if they work on alternate week basis?

- Ans
- 1. 8
 - 2. 8.5
 - 3. 9.5
 - 4. 9

Question ID : 26433081645
Status : Not Answered
Chosen Option : --

Q.16 If $14 : 30 :: 7 : x$, then what is the value of x ?

- Ans
- 1. 15
 - 2. 21
 - 3. 09
 - 4. 12

Question ID : 26433066365
Status : Answered
Chosen Option : 1

Q.17 A circle is inscribed in a ΔABC having sides $AB = 16$ cm, $BC = 20$ cm and $AC = 24$ cm, and side AB , BC and AC touches circle at D , E and F , respectively. The measure of AD is:

- Ans
- 1. 10 cm
 - 2. 20 cm
 - 3. 6 cm
 - 4. 14 cm

Question ID : 26433061333
Status : Answered
Chosen Option : 1

Q.18 If $\Delta ABC \sim \Delta DEF$ such that $2AB = DE$ and $BC = 8$ cm, then the length of EF is:

- Ans
- 1. 16 cm
 - 2. 18 cm
 - 3. 22 cm
 - 4. 20 cm

Question ID : 26433075283
Status : Answered
Chosen Option : 1

Q.19 Find the least number exactly divisible by 9,24 and 36.

- Ans
- 1. 72
 - 2. 36
 - 3. 24
 - 4. 9

Question ID : 26433075787
Status : Marked For Review
Chosen Option : 1

Q.20 If $1 + \sin\theta = m\cos\theta$, then what is the value of $\sin\theta$?

Ans

1. $\frac{2m^2-1}{m^2+1}$

2. $\frac{m^2-1}{m^2+1}$

3. $\frac{m^2+1}{2m^2-1}$

4. $\frac{m^2+1}{m^2-1}$

Question ID : 26433066255

Status : Not Answered

Chosen Option : --

Q.21 A discount of 20% is given for the purchase of two books by a bookseller and a discount of 25% is offered if a customer buys more than two books. A 10% discount is being offered to all the customers on purchase of one book. An additional 5% discount will be given to students. Sohan, a student of M.Com. in college, bought a book for Rs.513. What was the marked price of the book?

Ans

1. Rs.650

2. Rs.540

3. Rs.600

4. Rs.605

Question ID : 26433075860

Status : Answered

Chosen Option : 3

Q.22 A man rows to a place 48 km distant and comes back in 14 hours. He finds that he can row 4 km with the stream in the same time as 3 km against the stream. The speed of the stream is:

Ans

1. 1.5 km/h

2. 3.5 km/h

3. 1.8 km/h

4. 1 km/h

Question ID : 26433082104

Status : Answered

Chosen Option : 4

Q.23 20% of the inhabitants of a village having died of malaria, a panic set in, during which 30% of the remaining inhabitants left the village. The population was then reduced to 12,000. What was the number of inhabitants initially (Consider integral part only)

Ans

1. 21000

2. 21428

3. 21500

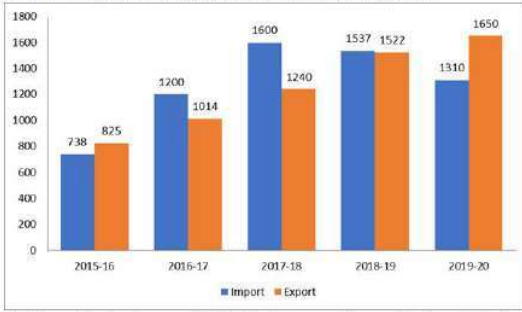
4. 30428

Question ID : 26433074982

Status : Answered

Chosen Option : 2

Q.24 The import and export of a country (in lakhs rupees) during a certain period of time is given in the following bar-graph. Read the bar-graph carefully and answer the following question.



The import during the year 2017-18 is how many times of the import during the year 2016-17? (correct up to two decimals)

- Ans** 1. 1.33
 2. 1.50
 3. 1.23
 4. 1.60

Question ID : 26433080345
Status : Answered
Chosen Option : 1

Q.25 A sum is deposited in a bank which gives simple interest. The sum becomes 1.25 times in 3 years. If there is a requirement of ₹7,60,000 after seven years, how much amount (in ₹) should one deposit to fulfil the requirement?

- Ans** 1. 5,20,000
 2. 5,70,000
 3. 4,80,000
 4. 6,00,000

Question ID : 26433085459
Status : Not Answered
Chosen Option : --

Section : English Comprehension

Q.1 Select the option that expresses the given sentence in passive voice.

The patient remembers his son taking him to the temple.

- Ans** 1. The patient remembers he was taken to the temple by his son.
 2. The patient remembers taken to the temple by his son.
 3. The patient remembers himself being taken to the temple by his son.
 4. The patient remembers being taken to the temple by his son.

Question ID : 26433088546
Status : Answered
Chosen Option : 3

Q.2 Select the option that can be used as a one-word substitute for the given group of words.

Formal forgiveness of a person's sins

- Ans
- 1. Ablutions
 - 2. Absolution
 - 3. Absolutism
 - 4. Forgiveness

Question ID : 26433071928
Status : Not Answered
Chosen Option : --

Q.3 Select the most appropriate ANTONYM of the underlined word.
It is undesirable to invest a part of your earnings for future use.

- Ans
- 1. advisable
 - 2. foolish
 - 3. unadvisable
 - 4. meek

Question ID : 26433059729
Status : Answered
Chosen Option : 1

Q.4 Select the sentence with the appropriate use of preposition.

- Ans
- 1. Ashok was in the bus stop.
 - 2. Ashok was to the bus stop.
 - 3. Ashok was on the bus stop.
 - 4. Ashok was at the bus stop.

Question ID : 26433073889
Status : Answered
Chosen Option : 4

Q.5 Select the most appropriate meaning of the underlined idiom in the given sentence.

The MD of the company let the cat out of the bag by telling her secretary, who got the much coveted promotion.

- Ans
- 1. openly confess
 - 2. Creating a false story
 - 3. To allow a secret to be known, usually without intending to
 - 4. secretly confide

Question ID : 26433072087
Status : Answered
Chosen Option : 3

Q.6 Select the most appropriate ANTONYM of the underlined word.
Construction plays a central role in transforming the natural environment into the built environment, and many considerations and restrictions can apply before a project is given consent to proceed in terms of how it may influence the environment.

- Ans
- 1. Bickering
 - 2. Expulsion
 - 3. Directive
 - 4. Interdiction

Question ID : 26433061567
Status : Marked For Review
Chosen Option : 4

Q.7 Parts of a sentence are given below in jumbled order. Arrange the parts in the correct order to form a meaningful sentence.

A great transition / marked / the 20th century / for mankind

- Ans
- 1. A great transition marked the 20th century for mankind.
 - 2. The 20th century marked a great transition for mankind.
 - 3. A great transition for mankind marked the 20th century.
 - 4. For mankind, a great transition marked the 20th century.

Question ID : 26433058345
Status : Answered
Chosen Option : 2

Q.8 In the given sentence the underlined word may have been incorrectly spelt. Identify the option that rectifies the spelling. If there is no error in spelling, select 'No error'.

During my time-taking and gradual convaelescenc after my back injury, my family was by my side.

- Ans
- 1. convalesaence
 - 2. No error
 - 3. convalecense
 - 4. convalescence

Question ID : 26433058642
Status : Answered
Chosen Option : 4

Q.9 Fill in the blank with the correct collocation.

Brady straightened, the _____ baton in hand.

- Ans
- 1. charge
 - 2. wooden
 - 3. swing
 - 4. open

Question ID : 26433090500
Status : Answered
Chosen Option : 2

Q.10 Select the most appropriate meaning of the given idiom.
Take something at face value

- Ans 1. Accept something as it looks without thinking about whether it might, in fact, not be quite what it appears
2. According to the appearance of something
3. Not laugh or change your expression even though you want to laugh
4. Show that you do not like something by making an unpleasant expression

Question ID : 26433060470
Status : Answered
Chosen Option : 2

Q.11 Select the correct direct form of the given sentence.
The secretary assures the audience that he/she is going to help them.

- Ans 1. The secretary said to the audience, "I am going to help you."
2. The secretary says to the audience, "I am going to help you."
3. The secretary says to the audience, "I was going to help you."
4. The secretary says to the audience, "I will be going to help you."

Question ID : 264330104647
Status : Answered
Chosen Option : 2

Q.12 Select the correct active form of the given sentence.
My cafe has been revisited by many tourists.

- Ans 1. Many tourists revisited my cafe.
2. Many tourists did revisited my cafe.
3. Many tourists have revisited my cafe.
4. Many tourists has revisited my cafe.

Question ID : 264330104579
Status : Answered
Chosen Option : 3

Q.13 Select the most appropriate ANTONYM of the underlined word.

The actor was ridiculed for her nonchalant attitude towards her work.

- Ans 1. Boisterous
2. Unconcerned
3. Considerate
4. Retrospective

Question ID : 26433070521
Status : Answered
Chosen Option : 2

Q.14 Select the most appropriate ANTONYM of the given word.

Pacify

- Ans 1. Placate
2. Assuage
3. Aggravate
4. Quell

Question ID : 26433060696
Status : Answered
Chosen Option : 3

Q.15 Rearrange the parts of the sentence in correct order.

Kemp's ridleys are

P. usually found in nearshore and

Q. inshore waters of the northern

R. Gulf of Mexico, especially in Louisiana waters,

S. which are their primary feeding grounds

Ans 1. SRQP

2. QPSR

3. PQRS

4. PRSQ

Question ID : 264330104684

Status : Answered

Chosen Option : 3

Q.16 Select the most appropriate option to fill in the blank.

A faint mist _____ over the valley.

Ans 1. hung

2. swung

3. swayed

4. dangled

Question ID : 26433087939

Status : Answered

Chosen Option : 3

Q.17 Select the correct indirect form of the given sentence.

She said to me, "You will speak at the conference tomorrow."

Ans 1. She told me that I would speak at the conference that day.

2. She told me that I might speak at the conference the next day.

3. She told me that I will speak at the conference the today.

4. She told me that I would speak at the conference the next day.

Question ID : 264330104608

Status : Answered

Chosen Option : 4

Q.18 Select the INCORRECTLY spelt word.

Ans 1. Languish

2. Altitude

3. Discusion

4. Longitudinal

Question ID : 26433060910

Status : Answered

Chosen Option : 4

Q.19 Sentences of a paragraph are given below in jumbled order. Arrange the sentences in the correct order to form a meaningful and coherent paragraph.

A. It not only distances the addict from his/her social circles but also impacts their productivity badly.

B. People begin drinking just for the sake of it and gradually make it a habit.

C. Addiction of any kind, including alcoholic addiction impacts all aspects of an individual's life.

D. Once it becomes a habit, it does not require much to change into an addiction.

- Ans
- 1. BDAC
 - 2. DBCA
 - 3. BDCA
 - 4. ACBD

Question ID : 26433093053

Status : Answered

Chosen Option : 3

Q.20 Select the most appropriate option to substitute the underlined segment in the given sentence.

He is in debt due to his judicious tastes and habits.

- Ans
- 1. affluent
 - 2. frugal
 - 3. extravagant
 - 4. moderate

Question ID : 26433088484

Status : Answered

Chosen Option : 3

Comprehension:

In the following passage, some words have been deleted. Read the passage carefully and select the most appropriate option to fill in each blank

The British king, Charles I, had (1)_____ a very difficult financial situation from his father. His period saw a very high rate of inflation. He wanted to (2)_____ money. Therefore, he (3) _____ creating the title of Baronet and selling it to (4) _____ candidates. However, his decision was (5)_____ by the British parliament.

SubQuestion No : 21

Q.21 Select the most appropriate option to fill in blank number 1.

- Ans
- 1. owned
 - 2. inherited
 - 3. devised
 - 4. genetic

Question ID : 26433086468

Status : Answered

Chosen Option : 2

Comprehension:

In the following passage, some words have been deleted. Read the passage carefully and select the most appropriate option to fill in each blank

The British king, Charles I, had (1)_____ a very difficult financial situation from his father. His period saw a very high rate of inflation. He wanted to (2)_____ money. Therefore, he (3) _____ creating the title of Baronet and selling it to (4) _____ candidates. However, his decision was (5)_____ by the British parliament.

SubQuestion No : 22

Q.22 Select the most appropriate option to fill in blank number 2.

- Ans 1. raise
 2. upraise
 3. bring
 4. lift

Question ID : 26433086469
Status : Answered
Chosen Option : 1

Comprehension:

In the following passage, some words have been deleted. Read the passage carefully and select the most appropriate option to fill in each blank

The British king, Charles I, had (1)_____ a very difficult financial situation from his father. His period saw a very high rate of inflation. He wanted to (2)_____ money. Therefore, he (3) _____ creating the title of Baronet and selling it to (4) _____ candidates. However, his decision was (5)_____ by the British parliament.

SubQuestion No : 23

Q.23 Select the most appropriate option to fill in blank number 3.

- Ans 1. ventured
 2. started
 3. continued
 4. appeared

Question ID : 26433086470
Status : Answered
Chosen Option : 1

Comprehension:

In the following passage, some words have been deleted. Read the passage carefully and select the most appropriate option to fill in each blank

The British king, Charles I, had (1)_____ a very difficult financial situation from his father. His period saw a very high rate of inflation. He wanted to (2)_____ money. Therefore, he (3) _____ creating the title of Baronet and selling it to (4) _____ candidates. However, his decision was (5)_____ by the British parliament.

SubQuestion No : 24

Q.24 Select the most appropriate option to fill in blank number 4.

- Ans 1. resourceful
 2. opulent
 3. healthy
 4. wealthy

Question ID : 26433086471
Status : Answered
Chosen Option : 4

Comprehension:

In the following passage, some words have been deleted. Read the passage carefully and select the most appropriate option to fill in each blank

The British king, Charles I, had (1)_____ a very difficult financial situation from his father. His period saw a very high rate of inflation. He wanted to (2)_____ money. Therefore, he (3) _____ creating the title of Baronet and selling it to (4) _____ candidates. However, his decision was (5)_____ by the British parliament.

SubQuestion No : 25

Q.25 Select the most appropriate option to fill in blank number 5.

Ans 1. banished

2. rejected

3. unaccepted

4. abandoned

Question ID : 26433086472

Status : Answered

Chosen Option : 2

Combined Graduate Level Examination Tier I 2022

Roll Number	
Candidate Name	
Venue Name	Webinfotron Technologies Pvt. Ltd.
Exam Date	08/12/2022
Exam Time	2:30 PM - 3:30 PM
Subject	Combined Graduate Level Examination Tier I 2022

Section : General Intelligence and Reasoning

Q.1 Select the correct combination of mathematical signs to sequentially replace the * signs and balance the given equation.

$$59 * 12 * 6 * 24 * 2 * 105$$

- Ans
- 1. -, +, -, +, =
 - 2. x, -, +, x, =
 - 3. +, x, +, -, =
 - 4. -, ÷, +, x, =

Question ID : 26433068683
Status : Answered
Chosen Option : 4


Q.2 F + M means 'F is the husband of M'
F ÷ M means 'F is the daughter of M'
F - M means 'F is the father of M'
F × M means 'F is the mother of M'
If U + V × K - B, then how is U related to B?

- Ans
- 1. Paternal grandmother
 - 2. Paternal grandfather
 - 3. Maternal grandmother
 - 4. Father

Question ID : 26433068071
Status : Answered
Chosen Option : 2

Q.3 Select the correct mirror image of the given combination when the mirror is placed at line MN as shown.

p m 9 4 h



- Ans
- 1. p t 6 m d
 - 2. d 4 e m q
 - 3. h 4 e m q
 - 4. h 4 e w q

Question ID : 26433068206
Status : Answered
Chosen Option : 2

Q.4 Which figure should replace the question mark (?) if the series were to be continued?

T	N	△	N	
A O Z	△ T A	O A T	E △ O	?
N	O	N	A	

Ans

✗ 1.

A
N O △
E

✓ 2.

E
A O △
N

✗ 3.

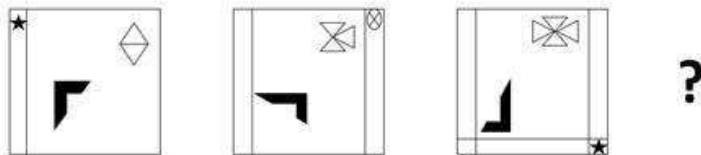
A
△ O E
N

✗ 4.

A
O N E
△

Question ID : 26433076660
 Status : Marked For Review
 Chosen Option : 2

Q.5 Select the figure that will come next in the following figure series.



Ans

- ✓ 1.
- ✗ 2.
- ✗ 3.
- ✗ 4.

Question ID : 26433057523
 Status : Answered
 Chosen Option : 1

Q.6 Which of the following terms will replace the question mark (?) in the given series?

LKC KMD ? IQF HSG

- ✗ 1. JOP
- ✗ 2. IOJ
- ✗ 3. IOE
- ✓ 4. JOE

Question ID : 26433085329
 Status : Answered
 Chosen Option : 4

Q.7 In a certain code language, 'ABASE' is coded as 'ZEZVD' and 'BANDS' is coded as 'EZQGV'. How will 'CABIN' be coded in that language?

- ✗ 1. FZYLK
- ✗ 2. FAEIQ
- ✓ 3. FZEHQ
- ✗ 4. FDELQ

Question ID : 26433067339
 Status : Answered
 Chosen Option : 4

Q.8 Which number will replace the question mark (?) in the following series?

37, 39, ?, 242, 970, 4852

Ans 1. 80

2. 122

3. 108

4. 160

Question ID : 26433068965

Status : Answered

Chosen Option : 1

Q.9 Select the set in which the numbers are related in the same way as are the numbers of the following set.

(NOTE: Operations should be performed on the whole numbers, without breaking down the numbers into its constituent digits.)

(2, 4, 18)

(1, 9, 50)

Ans 1. (3, 5, 32)

2. (2, 5, 49)

3. (6, 4, 10)

4. (5, 4, 18)

Question ID : 26433069237

Status : Marked For Review

Chosen Option : 2

Q.10 Which letter-cluster will replace the question mark (?) to complete the given series?

EGJM, GFLN, IENO, ?, MCRQ

Ans 1. KDPP

2. KPDD

3. KPDK

4. KPDP

Question ID : 26433065949

Status : Answered

Chosen Option : 1

Q.11 Read the given statement(s) and conclusions carefully. Assuming that the information given in the statements is true, even if it appears to be at variance with commonly known facts, decide which of the given conclusions logically follow(s) from the statement(s).

Statements:

Some floors are plates.

No plate is a sofa.

All gardens are plates.

Conclusions:

I. Some floors being gardens is a possibility.

II. No garden is a sofa.

III. All plates are gardens.

IV. No floors is a sofa.

Ans 1. Only Conclusion I follows

2. Only Conclusions I, II and IV follow

3. Only Conclusions II and III follow

4. Only Conclusions I and II follow

Question ID : 26433070348

Status : Answered

Chosen Option : 4

Q.12 If $A \div B$ means that A is the brother of B, $A \times B$ means that A is the sister of B, $A - B$ means that A is the father of B then which of the following expression shows that P is the father of R?

- Ans 1. $P - Q \times R$
 2. $P \times Q - R$
 3. $P \div Q \times P$
 4. $P - Q \div R$

Question ID : 264330105005
Status : Answered
Chosen Option : 4

Q.13 In the following question below are given some statements followed by some conclusions based on those statements. Taking the given statements to be true even if they seem to be at variance from commonly known facts. Read all the conclusions and then decide which of the given conclusion logically follows the given statements.

Statements:

I. No P is Q.

II. All B are Q.

Conclusions:

I. No P is B.

II. Some Q are not P.

III. Some B are not Q.

- Ans 1. Both conclusions I and II follows
 2. Both conclusions I and III follows
 3. Only conclusion I follows
 4. Neither conclusion follows

Question ID : 264330104943
Status : Answered
Chosen Option : 1

Q.14 Select the set in which the numbers are related in the same way as are the numbers of the following sets.

(NOTE : Operations should be performed on the whole numbers, without breaking down the numbers into its constituent digits. E.g. 13 – Operations on 13 such as adding /subtracting /multiplying etc. to 13 can be performed. Breaking down 13 into 1 and 3 and then performing mathematical operations on 1 and 3 is not allowed)

(5, 35, 7)

(8, 32, 4)

- Ans 1. (11, 56, 5)
 2. (3, 27, 9)
 3. (4, 30, 7)
 4. (9, 38, 4)

Question ID : 26433070241
Status : Answered
Chosen Option : 2

Q.15 By interchanging the given two signs which of the following equation will be correct?
× and –

- Ans 1. $7 \times 9 - 8 \div 2 + 6 = 25$
 2. $8 \times 6 - 9 \div 3 + 10 = 0$
 3. $16 - 4 \div 2 + 8 \times 1 = 36$
 4. $5 + 7 \times 3 - 4 \div 2 = 8$

Question ID : 264330105118
Status : Answered
Chosen Option : 2

Q.16 Select the set in which the numbers are related in the same way as are the numbers of the following sets:

(99, 199, 1199)

(15, 115, 1115)

(NOTE : Operations should be performed on the whole numbers, without breaking down the numbers into its constituent digits. E.g. 13 – Operations on 13 such as adding / subtracting / multiplying etc. to 13 can be performed. Breaking down 13 into 1 and 3 and then performing mathematical operations on 1 and 3 is NOT allowed)

Ans 1. (11, 111, 1000)

2. (33, 133, 1133)

3. (22, 222, 2222)

4. (77, 717, 7117)

Question ID : 26433087186

Status : Answered

Chosen Option : 2

Q.17 By interchanging the given two signs which of the following equation will be correct?

÷ and +

Ans 1. $18 \div 24 - 6 \times 6 + 3 = 32$

2. $12 - 8 + 12 \times 9 + 3 = 10$

3. $12 \div 8 \times 3 + 6 - 10 = 8$

4. $7 + 21 \times 42 \div 14 - 9 = 19$

Question ID : 264330105114

Status : Answered

Chosen Option : 4

Q.18 Three different positions of the same dice are shown. Find the number on the face opposite the face showing '1'.

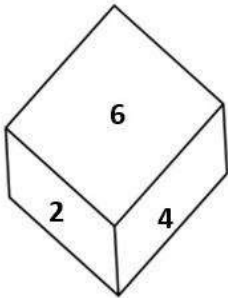


Figure 1

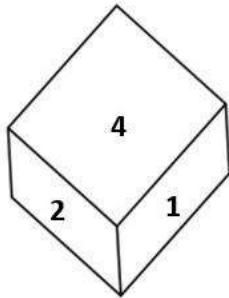


Figure 2

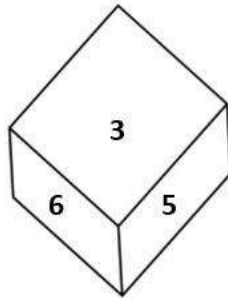


Figure 3

Ans 1. 6

2. 3

3. 2

4. 4

Question ID : 26433069065

Status : Answered

Chosen Option : 1

Q.19 In a certain code language, 'come home soon' is coded as '444', 'are you coming' is coded as '336' and 'raining badly outside' is coded as '757'. How will 'kids are happy' be coded in that language?

- Ans 1. 543
 2. 435
 3. 345
 4. 534

Question ID : 26433067772
Status : Answered
Chosen Option : 2

Q.20 Select the option that is related to the third word in the same way as the second word is related to the first word. (The words must be considered as meaningful English words and must not be related to each other based on the number of letters/number of consonants/vowels in the word)
Cells : Tissue :: Organs : ?

- Ans 1. Kidney
 2. Lungs
 3. Body
 4. Heart

Question ID : 26433067808
Status : Answered
Chosen Option : 3

Q.21 Select the word-pair that best represents a similar relationship to the one expressed in the pair of words given below. (The words must be considered as meaningful English words and must not be related to each other based on the number of letters/number of consonants/vowels in the word)
Librarian : Library

- Ans 1. Sailor : Aeroplane
 2. Priest : Temple
 3. Watchmen : Train
 4. Doctor : Treatment

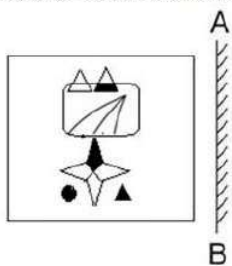
Question ID : 26433065977
Status : Answered
Chosen Option : 2

Q.22 Four letter-clusters have been given out of which three are alike in some manner and one is different. Select the one that is different.

- Ans 1. MJG
 2. GEB
 3. WTQ
 4. OLI

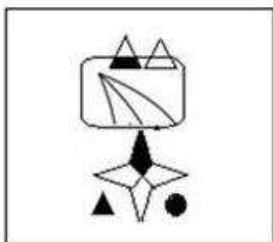
Question ID : 26433068506
Status : Answered
Chosen Option : 2

Q.23 Select the correct mirror image of the given figure when the mirror is placed at 'AB' as shown.

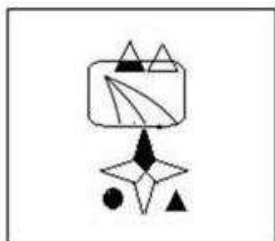


Ans

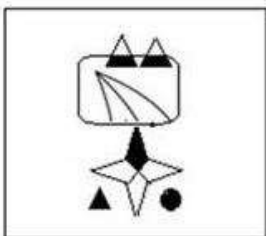
✓ 1.



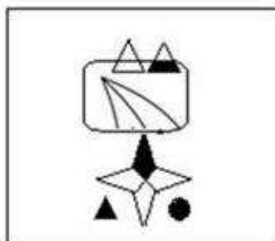
✗ 2.



✗ 3.



✗ 4.



Question ID : 26433057948

Status : Answered

Chosen Option : 1

Q.24 Select the option that represents the correct order of the given words as they would appear in an English dictionary.

- 1- Empress
- 2- Employee
- 3- Empty
- 4- Emporium
- 5- Employer

- Ans
- 1. 5, 2, 1, 4, 3
 - 2. 2, 5, 1, 4, 3
 - 3. 2, 5, 4, 1, 3
 - 4. 5, 2, 4, 1, 3

Question ID : 26433079442

Status : Answered

Chosen Option : 3

Q.25 In the following question, four number pairs are given. In each pair the number on left side of (-) is related to the number of the right side of (-) with some Logic/Rule/Relation. Three pairs are similar on basis of same Logic/Rule/Relation. Select the odd one out from the given alternatives. (NOTE: Operations should be performed on the whole numbers, without breaking down the numbers into its constituent digits. E.g.13 – Operations on 13 such as adding /subtracting /multiplying etc. to 13 can be performed. Breaking down 13 into 1 and 3 and then performing mathematical operations on 1 and 3 is not allowed)

- Ans
- 1. 12 – 142
 - 2. 8 – 62
 - 3. 4 – 14
 - 4. 14 – 192

Question ID : 264330105056

Status : Answered

Chosen Option : 4

Section : General Awareness

Q.1 Which of the following towns was grown as a temple town during the Chola dynasty?

- Ans
- 1. Bhillasvamin
 - 2. Ajmer
 - 3. Ahmedabad
 - 4. Ahmednagar

Question ID : 264330105443

Status : Marked For Review

Chosen Option : 4

Q.2 The major resources of Gondwana coal, which are metallurgical coal are located in _____.

- Ans
- 1. Damadar valley
 - 2. Chambal valley
 - 3. Krishna valley
 - 4. Narmada valley

Question ID : 264330105508

Status : Answered

Chosen Option : 1

Q.3 The ICC Women's cricket World Cup 2022 was held in _____.

- Ans
- 1. England
 - 2. India
 - 3. Australia
 - 4. New Zealand

Question ID : 26433071549
Status : Not Answered
Chosen Option : --

Q.4 Identify an example of organisms that do NOT belong to the third trophic level.

- Ans
- 1. Fishes
 - 2. Wolves
 - 3. Birds
 - 4. Cows

Question ID : 26433087875
Status : Answered
Chosen Option : 2

Q.5 In 'Andes Mountain' of South America animal which is used for transportation is _____.

- Ans
- 1. Bullocks
 - 2. Camels
 - 3. Donkeys
 - 4. Llamas

Question ID : 264330105603
Status : Answered
Chosen Option : 4

Q.6 The early Turkish rulers ruled between _____ years over Delhi.

- Ans
- 1. 1165 and 1198
 - 2. 1226 and 1290
 - 3. 1206 and 1290
 - 4. 1192 and 1225

Question ID : 264330105422
Status : Answered
Chosen Option : 3

Q.7 Surekha Punekar is a _____ dancer from the Indian state of Maharashtra.

- Ans
- 1. Tamasha
 - 2. Lavani
 - 3. Povada
 - 4. Koli

Question ID : 26433064306
Status : Marked For Review
Chosen Option : 2

Q.8 The 15th Men's FIH hockey World Cup will be held in the year _____.

- Ans
- 1. 2022
 - 2. 2025
 - 3. 2024
 - 4. 2023

Question ID : 26433071558
Status : **Not Answered**
Chosen Option : --

Q.9 The core of earth is made up of _____.

- Ans
- 1. cobalt and nickel
 - 2. iron and cobalt
 - 3. nickel and magnesium
 - 4. nickel and iron

Question ID : 26433066511
Status : **Answered**
Chosen Option : 4

Q.10 Who among the following is NOT an exponent of Mohiniyattam classical dance form?

- Ans
- 1. Smitha Rajan
 - 2. Jayaprabha Menon
 - 3. Prateeksha Kashi
 - 4. Radha Dutta

Question ID : 26433082132
Status : **Not Answered**
Chosen Option : --

Q.11 Fundamental Rights are mentioned in which part of the Constitution of India?

- Ans
- 1. Part IV
 - 2. Part III
 - 3. Part VI
 - 4. Part IX

Question ID : 26433086799
Status : **Answered**
Chosen Option : 2

Q.12 The famous hill station udagamandalam is also known as _____.

- Ans
- 1. Kodaikanal
 - 2. Shivpuri
 - 3. Ooty
 - 4. Mussorie

Question ID : 264330105659
Status : **Answered**
Chosen Option : 3

Q.13 The Council of Ministers shall not exceed ___% of the total number of members of the Assembly of States.

Ans 1. 15

2. 20

3. 12

4. 10

Question ID : 26433064851
Status : Answered
Chosen Option : 4

Q.14 The United Nations Environment Programme has signed a Memorandum of Understanding with the _____ government to support its 'Majhi Vasundhara' campaign.

Ans 1. Maharashtra

2. Rajasthan

3. Karnataka

4. Gujarat

Question ID : 264330105281
Status : Answered
Chosen Option : 2

Q.15 Among the following, which contains the lowest amount of sugar?

Ans 1. Apple

2. Mango

3. Potato

4. Banana

Question ID : 26433064433
Status : Answered
Chosen Option : 1

Q.16 The Family Courts (Amendment) Bill was introduced in Lok Sabha on July 18, 2022. Under this act, which of the following states has set up Family Courts?

Ans 1. Himachal Pradesh

2. Arunachal Pradesh

3. Assam

4. Gujarat

Question ID : 264330105231
Status : Marked For Review
Chosen Option : 1

Q.17 Which of the following organisations of the Government of India has been reporting the GDP at factor cost and at market prices?

Ans 1. Reserve Bank of India

2. National Sample Survey Organisation

3. Central Statistics Office

4. NITI Aayog

Question ID : 264330105392
Status : Answered
Chosen Option : 1

Q.18 Who founded the value of 'G'?

Ans 1. Henry Cavendish

2. Michael Faraday

3. Isaac Newton

4. Marie Curie

Question ID : 26433086737

Status : Answered

Chosen Option : 3

Q.19 Which Indian musician served as the artistic director of the World Music Department at the Rotterdam Music Conservatory in the Netherlands?

Ans 1. Hariprasad Chaurasia

2. Pravin Godkhindi

3. Ronu Majumdar

4. Nityanand Haldipur

Question ID : 26433054847

Status : Not Answered

Chosen Option : --

Q.20 Identify the statement that is NOT true about ATP.

Ans 1. nerve impulse propagation

2. Secretion of enzymes

3. Contraction of muscles

4. Protein synthesis

Question ID : 26433066669

Status : Answered

Chosen Option : 3

Q.21 The Industrial Policy Resolution 1956, classified industries into how many categories?

Ans 1. 3

2. 5

3. 6

4. 4

Question ID : 26433065437

Status : Not Answered

Chosen Option : --

Q.22 The iron pillar situated at Mehrauli, Delhi is belonged to which of the following Gupta ruler?

Ans 1. Skandagupta

2. Samudragupta

3. Kumargupta

4. Chandragupta II

Question ID : 264330105202

Status : Answered

Chosen Option : 2

Q.23 Vasco da Gama, a Portuguese explorer, discovered the sea route to India in _____.

Ans 1. 1488

2. 1498

3. 1508

4. 1518

Question ID : 264330105551

Status : Answered

Chosen Option : 2

Q.24 Name the classical dancer who was given the Prani Mitra Award in 1968.

Ans 1. Dr Padma Subrahmanyam

2. Shovana Narayan

3. Rukmini Devi Arundale

4. Bipin Singh

Question ID : 26433082131

Status : Not Answered

Chosen Option : --

Q.25 In August 2022, the Union government has appointed _____ as a director in the Prime Minister's Office (PMO).

Ans 1. Gopal Vittal

2. Rajesh Verma

3. Anuj Poddar

4. Shweta Singh

Question ID : 264330105328

Status : Answered

Chosen Option : 4

Section : Quantitative Aptitude

Q.1 In the first year the population of a town decreased by 5% due to the Corona virus first wave. In the next year it decreased again by 5% due to the second wave and in the third year it increased by 5%. At the end of the third year the population was 9,47,625. What was the population at the beginning of the first year?

Ans 1. 7,00,000

2. 10,00,000

3. 8,97,993

4. 9,92,519

Question ID : 26433066182

Status : Answered

Chosen Option : 2

Q.2 A shopkeeper claims to sell his article at a discount of 10%, but marks his articles by increasing the cost of each by 20%. His gain percentage is:

Ans 1. 18%

2. 12%

3. 8%

4. 16%

Question ID : 26433075153

Status : Answered

Chosen Option : 3

Q.3 Find the total surface area of a cube whose volume is 343 m^3 .

- Ans
- 1. 186 m^2
 - 2. 294 m^2
 - 3. 196 m^2
 - 4. 210 m^2

Question ID : 26433063911
Status : Answered
Chosen Option : 2

Q.4 Find the fourth proportional to the numbers 17, 272 and 19.

- Ans
- 1. 332
 - 2. 323
 - 3. 403
 - 4. 304

Question ID : 26433065085
Status : Answered
Chosen Option : 4

Q.5 In a linear race of 500 m, A can beat B by 50 m and in a race of 600 m, B can beat C by 60 m. By how many metres will A beat C in a race of 400 m?

- Ans
- 1. 70
 - 2. 68
 - 3. 76
 - 4. 72

Question ID : 26433075202
Status : Answered
Chosen Option : 2

Q.6 Raju, Sunil and Vishal can separately finish a work in 20, 30 and 40 days, respectively. In how many days Raju can finish the work, if he is assisted by Sunil and Vishal on alternate days, starting with Sunil?

- Ans
- 1. $12\frac{3}{5}$
 - 2. $12\frac{1}{20}$
 - 3. $11\frac{1}{20}$
 - 4. $11\frac{3}{5}$

Question ID : 26433075572
Status : Answered
Chosen Option : 1

Q.7 Mohit purchased a table for Rs.1,260 and due to some scratches on its top, he sold it for Rs.1,197. What is his loss percent?

- Ans
- 1. 7%
 - 2. 4%
 - 3. 6%
 - 4. 5%

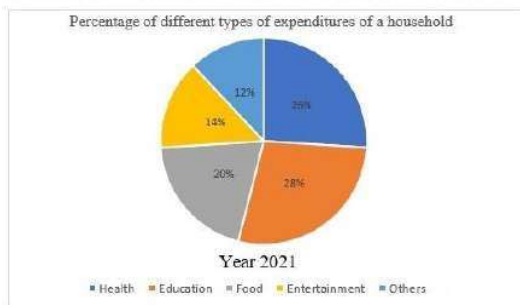
Question ID : 26433066358
Status : Answered
Chosen Option : 4

Q.8 A student's marks were wrongly entered as 65 instead of 45. Due to this, the average marks for the class got increased by $\frac{1}{3}$. The number of students in the class is:

- Ans
- 1. 40
 - 2. 20
 - 3. 60
 - 4. 30

Question ID : 26433072995
Status : Answered
Chosen Option : 3

Q.9 Study the following pie chart and answer the question that follows.



The difference in the expenditure on health and entertainment is what percentage of the expenditure on food?

- Ans
- 1. 60%
 - 2. 20%
 - 3. 30%
 - 4. 200%

Question ID : 26433087402
Status : Not Answered
Chosen Option : --

Q.10 The table given below shows the sales of bikes and cars of five companies.

Companies	Bike	Car
P	200	1200
Q	100	300
R	500	700
S	600	1000
T	800	800

J1 = The average sale of bikes of company P, Q and R.

J2 = The average sale of cars of company R, S and T.

What is the value of (J1 : J2)?

Ans 1. 24 : 11

2. 8 : 25

3. 7 : 24

4. 25 : 8

Question ID : 264330105742

Status : Answered

Chosen Option : 2

Q.11 Find the HCF of 4.08 and 6.63.

Ans 1. 0.50

2. 0.52

3. 0.51

4. 0.53

Question ID : 26433080078

Status : Answered

Chosen Option : 3

Q.12 Which of the following will satisfy $a^2 = b^2 + (ab)^2$ for the values a and b?

Ans 1. $a = \sin x$, $b = \cot x$

2. $a = \cos x$, $b = \tan x$

3. $a = \cot x$, $b = \cos x$

4. $a = \sin x$, $b = \tan x$

Question ID : 26433061627

Status : Answered

Chosen Option : 2

Q.13 7 is added to a certain number and the sum is multiplied by 5. The product is then divided by 3 and 4 is subtracted from the quotient. If the result comes to 16, then what is the original number?

Ans 1. 3

2. 1

3. 5

4. 4

Question ID : 26433063765

Status : Answered

Chosen Option : 3

Q.14 $\theta = 135^\circ$; $\gamma = 15^\circ$.

What is the value of $2 \cos(\theta) \sin(\gamma)$?

Ans

1. $\frac{\sqrt{3}-1}{2}$

2. $\frac{1-\sqrt{3}}{2}$

3. $2-\sqrt{3}$

4. $\sqrt{3}-2$

Question ID : 26433061335

Status : Answered

Chosen Option : 2

Q.15

If $abc = 5$, what is the value of $\left(\frac{1}{1+a+b^{-1}} + \frac{1}{1+b+5c^{-1}} + \frac{1}{1+\frac{c}{5}+a^{-1}}\right)$?

Ans

1. 5

2. 1

3. $\frac{1}{5}$

4. $(a+b+c)$

Question ID : 26433075785

Status : Answered

Chosen Option : 2

Q.16

If $\sec x - \cos x = 4$, then what will be the value of $\frac{(1 + \cos^2 x)}{\cos x}$?

Ans

1. $\frac{9}{4}$

2. $\frac{1}{4}$

3. $2\sqrt{5}$

4. $\sqrt{5}$

Question ID : 264330105900

Status : Answered

Chosen Option : 3

Q.17 Study the given graph and table and answer the following question.

Data of different states regarding population of states in the year 1998



Total population of the given states = 32760000

States	Sex and literacy wise Population Ratio			
	Sex		Literacy	
	M	F	Literate	Illiterate
Arunachal Pradesh	5	3	2	7
Madhya Pradesh	3	1	1	4
Delhi	2	3	2	1
Goa	3	5	3	2
Bihar	3	4	4	1
Uttar Pradesh	3	2	7	2
Tamil Nadu	3	4	9	4

What was the ratio of the number of females in Arunachal Pradesh to the number of females in Uttar Pradesh ?

- Ans
- 1. 21 : 50
 - 2. 25 : 16
 - 3. 16 : 25
 - 4. 50 : 21

Question ID : 26433086279

Status : Not Answered

Chosen Option : --

Q.18 The radius of a circle is 5 cm. Calculate the length of a tangent drawn to this circle from a point at a distance of 10 cm from its centre.

- Ans
- 1. $5\sqrt{5}$ cm
 - 2. $5\sqrt{2}$ cm
 - 3. 5 cm
 - 4. $5\sqrt{3}$ cm

Question ID : 26433066390

Status : Answered

Chosen Option : 4

Q.19 A hollow sphere has an outer radius of 6 cm and inner radius of 3 cm. What is the volume of this hollow sphere?

- Ans
- 1. $252p$ cm³
 - 2. $356p$ cm³
 - 3. $144p$ cm³
 - 4. $175p$ cm³

Question ID : 264330105875

Status : Answered

Chosen Option : 1

Q.20 A certain amount will become six times in 20 years. How long does it take for the same amount to become 5 times? Assume the same rate of simple interest in each case.

- Ans
- 1. 16 years 8 months
 - 2. 15 years 8 months
 - 3. 15 years
 - 4. 16 years

Question ID : 26433075916
Status : Answered
Chosen Option : 4

Q.21 The table given below shows the earnings of two persons on five different days.

Days	Earnings	
	A	B
Tuesday	85	130
Wednesday	76	90
Thursday	45	102
Friday	95	86
Saturday	110	48

What is the difference between the total earnings of A and B on all the five days?

- Ans
- 1. 45
 - 2. 35
 - 3. 50
 - 4. 55

Question ID : 264330105753
Status : Answered
Chosen Option : 1

Q.22 If the angles of a triangle are $(x - 6)$ degree, $(x + 26)$ degree and $8x$ degree, then what is the value of $2x$?

- Ans
- 1. 12 degrees
 - 2. 16 degrees
 - 3. 48 degrees
 - 4. 32 degrees

Question ID : 264330105816
Status : Answered
Chosen Option : 4

Q.23 If $4(z + 7)(2z - 1) = Az^2 + Bz + C$, then the value of $A + B + C$ is:

- Ans
- 1. 28
 - 2. 32
 - 3. 74
 - 4. 81

Question ID : 26433076344
Status : Answered
Chosen Option : 4

Q.24 In a $\triangle ABC$, AD, BE and CF are the medians from vertices A, B and C, respectively. The point of intersection of AD, BE and CF is called _____.

- Ans
- 1. median point
 - 2. orthocentre
 - 3. centroid
 - 4. incentre

Question ID : 26433075866
Status : Answered
Chosen Option : 3

Q.25 Factorize the following expression:
 $p^3 + 27$

- Ans
- 1. $(p - 3)(p^2 - 3p + 9)$
 - 2. $(p + 3)(p^2 + 3p + 9)$
 - 3. $(p + 3)(p^2 - 3p + 9)$
 - 4. $(p + 3)(p^2 - 3p - 9)$

Question ID : 26433091628
Status : Answered
Chosen Option : 1

Section : English Comprehension

Q.1 Select the correct passive form of the given sentence.
Did he do his mission?

- Ans
- 1. Was his mission done by him?
 - 2. Was his mission do by him?
 - 3. Was his mission being done by him?
 - 4. Had his mission been done by him?

Question ID : 264330104550
Status : Answered
Chosen Option : 1

Q.2 Select the option that expresses the given sentence in active voice.

Does she know me?

- Ans
- 1. Am I known by her?
 - 2. Is she known to me?
 - 3. Is she known by me?
 - 4. Am I known to her?

Question ID : 26433072473
Status : Marked For Review
Chosen Option : 4

Q.3 Select the most appropriate ANTONYM of the given word.
Hazard

- Ans
- 1. Peril
 - 2. Jeopardy
 - 3. Protection
 - 4. Danger

Question ID : 26433060434
Status : Marked For Review
Chosen Option : 3

Q.4 Select the most appropriate synonym of the underlined word in the given sentence.

The wrestler retaliated the blow that he received.

- Ans
- 1. Respected
 - 2. Welcomed
 - 3. Reciprocated
 - 4. Forgave

Question ID : 26433071966
Status : Answered
Chosen Option : 3

Q.5 Choose the incorrectly spelt word.

- Ans
- 1. Contradiction
 - 2. Abhorrent
 - 3. Condensing
 - 4. Hereditary

Question ID : 264330104756
Status : Answered
Chosen Option : 3

Q.6 Select the INCORRECTLY spelt word.

- Ans
- 1. Bouquet
 - 2. Hygene
 - 3. Mortgage
 - 4. Champagne

Question ID : 26433065133
Status : Answered
Chosen Option : 3

Q.7 Select the most appropriate meaning of the given idiom.
On cloud nine

- Ans
- 1. Flying
 - 2. Floating
 - 3. Dreaming
 - 4. Very happy

Question ID : 26433070800
Status : Answered
Chosen Option : 4

Q.8 Select the most appropriate synonym of the underlined word in the given sentence.

The professor refused to comment on the erroneous description of the historical events in the journal.

- Ans
- 1. Suitable
 - 2. Lucid
 - 3. Inaccurate
 - 4. Sensitive

Question ID : 26433071960
Status : Marked For Review
Chosen Option : 2

Q.9 Select the option that can be used as a one-word substitute for the given group of words.

An exaggerated statement not to be taken seriously or literally

- Ans
- 1. Hypertext
 - 2. Hyperbole
 - 3. Hypocrisy
 - 4. Hippocrates

Question ID : 26433060866
Status : Marked For Review
Chosen Option : 3

Q.10 Sentences of a paragraph are given in jumbled order. Arrange the sentences in the correct order to form a meaningful and coherent paragraph.

- A. Dozens of distinctly different regional languages are spoken in India, which share many characteristics such as grammatical structure and vocabulary.
- B. India has had a longer exposure to English than any other country which uses it as a second language, its distinctive words, idioms, grammar and rhetoric spreading gradually to affect all places, habits and culture.
- C. The historical background of India is never far away from everyday usage of English.
- D. Since the early 1600s, the English language has had a toehold on the Indian subcontinent, when the East India Company established settlements in Chennai, Kolkata, and Mumbai, formerly Madras, Calcutta, and Bombay, respectively.

- Ans
- 1. ABCD
 - 2. ADCB
 - 3. DBCA
 - 4. DCAB

Question ID : 26433070666
Status : Marked For Review
Chosen Option : 1

Q.11 Rearrange the parts of the sentence in correct order.

- The ministry officials
- P. recommend the shortlisted names to
- Q. the awards selection committee
- R. sieve through the applicants' credentials and
- S. have been working overtime to

- Ans
- 1. SRPQ
 - 2. QRPS
 - 3. SPQR
 - 4. PQRS

Question ID : 264330104653
Status : Answered
Chosen Option : 1

Q.12 Select the most appropriate option that can substitute the underlined segment in the given sentence. If there is no need to substitute it, select 'No substitution'.

The rate of interest for the loan went out all our calculations.

- Ans
- 1. under all our calculations
 - 2. No substitution
 - 3. beyond all our calculations
 - 4. besides all our calculations

Question ID : 26433089277
Status : Answered
Chosen Option : 3

Q.13 Select the most appropriate synonym of the underlined word in the following sentence.

Iyadurai Solomon was a great teacher because he instilled in all the children a sense of their own worth.

- Ans
- 1. stopped
 - 2. took out
 - 3. inculcate
 - 4. neglected

Question ID : 26433060805
Status : Answered
Chosen Option : 3

Q.14 Select the most appropriate meaning of the given idiom.
Someone's heart is in the right place

- Ans
- 1. Suddenly feel so excited or frightened that your heart beats faster
 - 2. Change your opinion or the way you feel
 - 3. Share secret worries with someone else
 - 4. Someone is good even if they sometimes behave in a wrong manner

Question ID : 26433060471
Status : Answered
Chosen Option : 4

Q.15 The following sentence has been split into four segments. Identify the segment that contains a grammatical error.

She has / not written / a single novel / by three years.

- Ans
- 1. not written
 - 2. She has
 - 3. by three years
 - 4. a single novel

Question ID : 26433092267
Status : Answered
Chosen Option : 3

Q.16 Select the option that can be used as a one-word substitute for the given group of words.

Cancel or do away with (a law or agreement)

- Ans 1. Abrogate
 2. Cancellation
 3. Ultimatum
 4. Prorogation

Question ID : 26433071927
Status : Answered
Chosen Option : 1

Q.17 Select the most appropriate option to replace the underlined segment in the given sentence.

Shyama does not laugh, nor she smiles.

- Ans 1. nor she does smile
 2. she does smile
 3. nor does she smile
 4. nor she smile does

Question ID : 26433084737
Status : Answered
Chosen Option : 3

Q.18 Select the most appropriate option to fill in the blank.

The _____ weapons which are easily available in the market are a big threat to the security of some nations.

- Ans 1. heated
 2. deadly
 3. casual
 4. valuable

Question ID : 26433073794
Status : Answered
Chosen Option : 2

Q.19 Select the correct indirect form of the given sentence. .

Anita said to the mother, "Your child has been crying since morning."

- Ans 1. Anita told the mother that her child was crying since morning.
 2. Anita told the mother that her child had been crying since morning.
 3. Anita told the mother that her child had been cry since morning.
 4. Anita told the mother that your child had been crying since morning.

Question ID : 264330104606
Status : Answered
Chosen Option : 2

Q.20 A sentence has been given with a blank to be filled with an appropriate word. Choose the correct alternative.

This year, orange prices are forecast to grow, despite an expected increase in global

_____.

- Ans 1. production
 2. organisation
 3. abduction
 4. assumption

Question ID : 264330104760

Status : Answered

Chosen Option : 1

Comprehension:

In the following passage, some words have been deleted. Read the passage carefully and select the most appropriate option to fill in each blank.

The saving of certain wild animals from extinction (1)_____ many years been a problem for the zoologists and other specialists; but more recently the problem has become so (2)_____, and has received so much publicity, that most people are now (3)_____ about it. This may at first seem strange because one of the most gratifying developments of the last few years has been the passing of strict laws to protect wild animals and the (4)_____ decline in the hunting of big-game for sport. Why is it then that some rare wild animals are still (5)_____ with extinction and even some of the less rare ones are rapidly declining in number?

SubQuestion No : 21

Q.21 Select the most appropriate option to fill in the blank 1.

- Ans 1. has for
 2. had for
 3. is for
 4. was of

Question ID : 26433073382

Status : Answered

Chosen Option : 1

Comprehension:

In the following passage, some words have been deleted. Read the passage carefully and select the most appropriate option to fill in each blank.

The saving of certain wild animals from extinction (1)_____ many years been a problem for the zoologists and other specialists; but more recently the problem has become so (2)_____, and has received so much publicity, that most people are now (3)_____ about it. This may at first seem strange because one of the most gratifying developments of the last few years has been the passing of strict laws to protect wild animals and the (4)_____ decline in the hunting of big-game for sport. Why is it then that some rare wild animals are still (5)_____ with extinction and even some of the less rare ones are rapidly declining in number?

SubQuestion No : 22

Q.22 Select the most appropriate option to fill in the blank 2.

- Ans 1. acute
 2. rare
 3. narrow
 4. steep

Question ID : 26433073383

Status : Answered

Chosen Option : 1

Comprehension:

In the following passage, some words have been deleted. Read the passage carefully and select the most appropriate option to fill in each blank.

The saving of certain wild animals from extinction (1)_____ many years been a problem for the zoologists and other specialists; but more recently the problem has become so (2)_____, and has received so much publicity, that most people are now (3)_____ about it. This may at first seem strange because one of the most gratifying developments of the last few years has been the passing of strict laws to protect wild animals and the (4)_____ decline in the hunting of big-game for sport. Why is it then that some rare wild animals are still (5)_____ with extinction and even some of the less rare ones are rapidly declining in number?

SubQuestion No : 23

Q.23 Select the most appropriate option to fill in the blank 3.

- Ans 1. trouble
 2. affect
 3. involved
 4. concerned

Question ID : 26433073384

Status : Answered

Chosen Option : 4

Comprehension:

In the following passage, some words have been deleted. Read the passage carefully and select the most appropriate option to fill in each blank.

The saving of certain wild animals from extinction (1)_____ many years been a problem for the zoologists and other specialists; but more recently the problem has become so (2)_____, and has received so much publicity, that most people are now (3)_____ about it. This may at first seem strange because one of the most gratifying developments of the last few years has been the passing of strict laws to protect wild animals and the (4)_____ decline in the hunting of big-game for sport. Why is it then that some rare wild animals are still (5)_____ with extinction and even some of the less rare ones are rapidly declining in number?

SubQuestion No : 24

Q.24 Select the most appropriate option to fill in the blank 4.

- Ans 1. probable
 2. advance
 3. varied
 4. consequent

Question ID : 26433073385

Status : Answered

Chosen Option : 4

Comprehension:

In the following passage, some words have been deleted. Read the passage carefully and select the most appropriate option to fill in each blank.

The saving of certain wild animals from extinction (1)_____ many years been a problem for the zoologists and other specialists; but more recently the problem has become so (2)_____, and has received so much publicity, that most people are now (3)_____ about it. This may at first seem strange because one of the most gratifying developments of the last few years has been the passing of strict laws to protect wild animals and the (4)_____ decline in the hunting of big-game for sport. Why is it then that some rare wild animals are still (5)_____ with extinction and even some of the less rare ones are rapidly declining in number?

SubQuestion No : 25**Q.25 Select the most appropriate option to fill in the blank 5.**

- Ans  1. danger
 2. frighten
 3. bullied
 4. threatened

Question ID : **26433073386**Status : **Answered**Chosen Option : **4**

SSC CGL 2022 TIER 1 DECEMBER 7, 2022 SHIFT 3 QUESTION PAPER

Exam Date	07/12/2022
Exam Time	2:30 PM - 3:30 PM
Subject	Combined Graduate Level Examination Tier I 2022

Section : General Intelligence and Reasoning

Q.1 A # B means 'A is the brother of B'.
A @ B means 'A is the son of B'.
A & B means 'A is the father of B'.
A % B means 'A is the mother of B'.
If W # Q @ T & Y @ M % K % L, then how is K related to W?

- Ans 1. Sister
2. Sister-in-law
3. Mother
4. Daughter

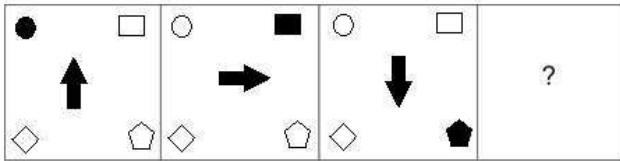
Question ID : 26433068147
Status : Answered
Chosen Option : 1

Q.2 In a certain code language, 'PEPPER' is coded as 76 and 'CUCUMBER' is coded as 86.
How will 'CAULIFLOWER' be coded in that language?

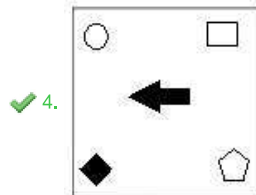
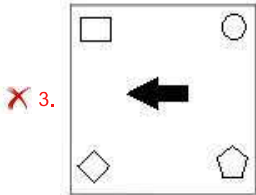
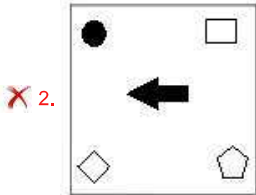
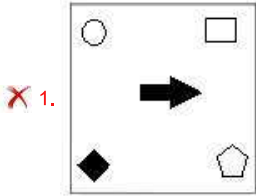
- Ans 1. 125
2. 126
3. 116
4. 106

Question ID : 26433068002
Status : Answered
Chosen Option : 1

Q.3 Select the figure that will replace the question mark (?) in the following figure series.



Ans



Question ID : 26433070417
 Status : Answered
 Chosen Option : 4

Q.4 If $A - B$ means that A is the father of B, $A + B$ means that A is the mother of B, $A \times B$ means that A is the brother of B then which of the following expression shows that Q is the brother of P?

Ans ✓ 1. $P \times Q - R$

✗ 2. $P \times Q + R$

✗ 3. $R + P \times Q$

✗ 4. $Q \times P - R$

Question ID : 264330104982
 Status : Answered
 Chosen Option : 1

Q.5 By interchanging the given two signs which of the following equation will be not correct?
+ and ÷

- Ans 1. $12 \div 8 \times 12 + 6 - 7 = 21$
 2. $9 - 3 + 12 \times 8 \div 4 = 11$
 3. $46 + 23 + 14 \times 5 - 6 = 66$
 4. $6 + 20 \div 12 \times 7 - 11 = 70$

Question ID : 264330105131
Status : Answered
Chosen Option : 4

Q.6 Select the option that is related to the third term in the same way as the second term is related to the first term and the sixth term is related to the fifth term.
 $4 : 84 :: 11 : ? :: 13 : 2379$

- Ans 1. 1221
 2. 1463
 3. 1440
 4. 819

Question ID : 26433068373
Status : Answered
Chosen Option : 2

Q.7 Select the option that represents the correct order of the given words as they would appear in an English dictionary.

1. Effluent
2. Edifice
3. Effleurage
4. Edacious
5. Effeminate
6. Eccentric
7. Effulgent

- Ans 1. 6, 4, 2, 5, 3, 1, 7
 2. 6, 4, 2, 3, 5, 1, 7
 3. 6, 4, 2, 5, 1, 3, 7
 4. 6, 4, 2, 5, 7, 3, 1

Question ID : 26433068928
Status : Answered
Chosen Option : 1

Q.8 Which letter-cluster will replace the question mark (?) to complete the given series?
XDNC, VGOE, ?, RMQI, PPRK

- Ans 1. TJRG
 2. TKPG
 3. TJPG
 4. TJQG

Question ID : 26433065957
Status : Answered
Chosen Option : 3

Q.9 Select the set in which the numbers are related in the same way as are the numbers of the given set.

(NOTE: Operations should be performed on the whole numbers, without breaking down the numbers into its constituent digits. E.g. 13 – Operations on 13 such as adding / subtracting / multiplying etc. to 13 can be performed. Breaking down 13 into 1 and 3 and then performing mathematical operations on 1 and 3 is not allowed.)

(3, 13, 18)
(29, 39, 44)

- Ans 1. (17, 27, 42)
 2. (25, 30, 55)
 3. (26, 30, 47)
 4. (16, 26, 31)

Question ID : 26433068382

Status : Answered

Chosen Option : 4

Q.10 In the following question, select the missing number from the given series.

7, 21, 63, 189, 567, ?

- Ans 1. 1701
 2. 1800
 3. 1720
 4. 1781

Question ID : 264330105020

Status : Answered

Chosen Option : 1

Q.11 A series is given with one term missing. Select the correct alternative from the given ones that will complete the series.

NTRQ, GOIF, ZJZU, SEQJ, ?

- Ans 1. LZHY
 2. QNRT
 3. LMRC
 4. LXYQ

Question ID : 264330104830

Status : Not Attempted and Marked For Review

Chosen Option : --

Q.12 By Interchanging the given two numbers which of the following equation will be correct?

5 and 8

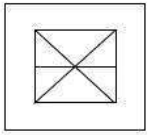
- Ans 1. $5 \times 2 - 8 + 9 \div 1 = 20$
 2. $8 + 5 \times 4 - 9 + 3 = 30$
 3. $5 \times 7 + 8 - 3 + 1 = 55$
 4. $8 - 5 \times 2 + 6 \div 2 = -9$

Question ID : 264330105097

Status : Answered

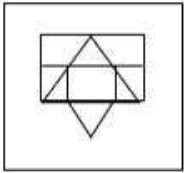
Chosen Option : 1

Q.13 Select the option in which the given figure is embedded (rotation is NOT allowed).

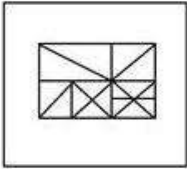


Ans

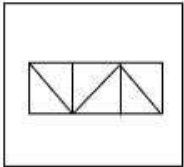
✗ 1.



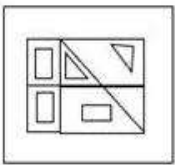
✓ 2.



✗ 3.



✗ 4.



Question ID : 26433068619

Status : Answered

Chosen Option : 2

Q.14 Three different positions of the same dice are shown. Find the number on the face opposite the face showing '2'.

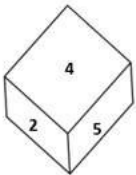


Figure 1

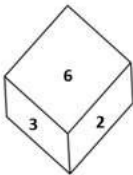


Figure 2

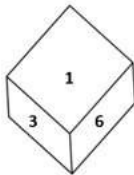


Figure 3

Ans ✓ 1. 1

✗ 2. 6

✗ 3. 3

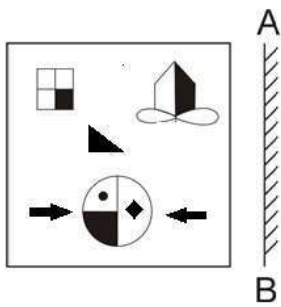
✗ 4. 4

Question ID : 26433069439

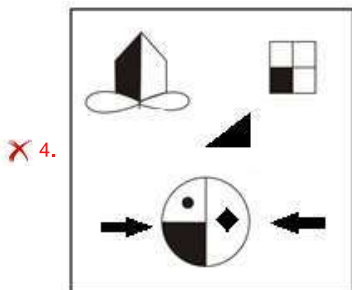
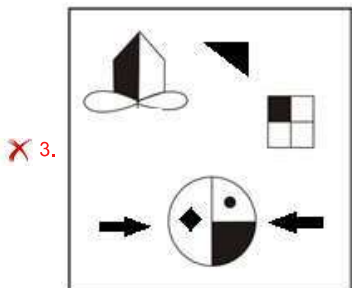
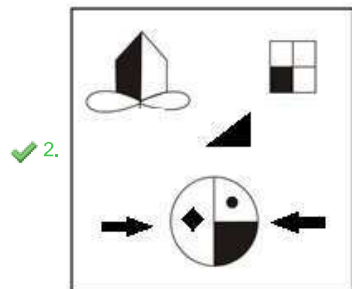
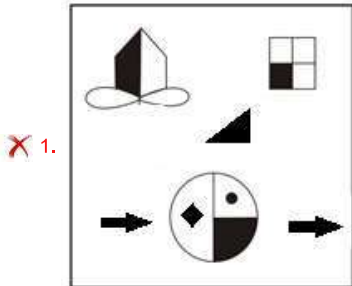
Status : Answered

Chosen Option : 1

Q.15 Select the correct mirror image of the given figure when the mirror is placed at AB as shown.



Ans



Question ID : 26433070443

Status : Answered

Chosen Option : 2

Q.16 In a certain code language, 'health is wealth' is coded as '626', 'exercise regularly' is coded as '89' and 'bring good food' is coded as '544'. How will 'balanced diet is key' be coded in that language?

Ans 1. 8423

2. 7312

3. 3721

4. 4832

Question ID : 26433067777

Status : Answered

Chosen Option : 1

Q.17 In the following question below are given some statements followed by some conclusions based on those statements. Taking the given statements to be true even if they seem to be at variance from commonly known facts. Read all the conclusions and then decide which of the given conclusion logically follows the given statements.

Statements:

I. Some G are U.

II. Some S are U.

Conclusion:

I. No S is G.

II. No U is G.

Ans 1. Only conclusion I follows

2. Only conclusion II follows

3. Neither conclusion follows

4. Both conclusions I and II follows

Question ID : 264330104914

Status : Answered

Chosen Option : 3

Q.18 Select the odd group of numbers. (NOTE: Operations should be performed on the whole numbers, without breaking down the numbers into its constituent digits. E.g.13 – Operations on 13 such as adding /subtracting /multiplying etc. to 13 can be performed. Breaking down 13 into 1 and 3 and then performing mathematical operations on 1 and 3 is not allowed)

Ans 1. 18 – 329

2. 16 – 263

3. 14 – 201

4. 12 – 49

Question ID : 264330105088

Status : Answered

Chosen Option : 4

Q.19 Read the given statements and conclusions carefully. Assuming that the information given in the statements is true, even if it appears to be at variance with commonly known facts, decide which of the given conclusions logically follow(s) from the statements.

Statements:

All the medicines are capsules.

Some capsules are bangles.

Some bangles are toothpastes.

Conclusions:

I. Some bangles are medicines.

II. Some toothpastes are capsules.

III. Some medicines are bangles.

IV. Some medicines are toothpastes.

Ans 1. Only conclusions III and IV follow

2. None of the conclusions follow

3. Only conclusions II and III follow

4. Only conclusions I and II follow

Question ID : 26433068551

Status : Answered

Chosen Option : 2

Q.20 Three of the following four letter-clusters are alike in a certain way and one is different. Pick the odd one out.

Ans 1. UVD

2. PQI

3. JKZ

4. EFT

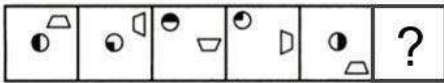
Question ID : 26433069006

Status : Answered

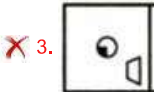
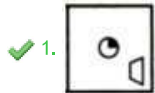
Chosen Option : 3

Q.21 Select the figure from among the given options that can replace the question mark

(?) in the following series.



Ans



Question ID : 26433080508

Status : Answered

Chosen Option : 1

Q.22 If '+' means '-', '-' means '+', 'x' means '-' and '÷' means 'x', what will be the value of the following expression?

$$[(34 \times 12) - (4 \div 3)] + (12 - 5) \div 5$$

Ans 1. 10

2. 1

3. 2

4. 20

Question ID : 26433067862

Status : Answered

Chosen Option : 1

Q.23 Select the option that is related to the third word in the same way as the second word is related to the first word. (The words must be considered as meaningful English words and must not be related to each other based on the number of letters/number of consonants/vowels in the word)

Kite : Diamond :: Ball : ?

Ans 1. Triangle

2. Square

3. Round

4. Pentagon

Question ID : 26433067811

Status : Answered

Chosen Option : 3

Q.24 Select the word-pair that best represents a similar relationship to the one expressed in the given pair of words.

(The words must be considered as meaningful English words and must not be related to each other based on the number of letters/number of consonants/vowels in the word)

Money plant : Climber

Ans 1. Rose : Shrub

2. Peas : Green

3. Basil : Tree

4. Banyan : Roots

Question ID : 26433068426

Status : Answered

Chosen Option : 4

Q.25 Select the option that is related to the third number in the same way as the second number is related to the first number and the sixth number is related to the fifth number.

$$15 : 125 :: 27 : ? :: 36 : 1728$$

Ans 1. 689

2. 749

3. 790

4. 729

Question ID : 26433067907

Status : Answered

Chosen Option : 4

Q.1 Who has been signed on as a brand ambassador of lubricant manufacturer Gulf Oil India in October 2022?

- Ans
- 1. Sonu Sood
 - 2. Rishabh Pant
 - 3. Sania Nehwal
 - 4. Smriti Mandhana

Question ID : 264330105353
Status : **Not Answered**
Chosen Option : --

Q.2 The motion of the body moving along a circular path is an example of _____.

- Ans
- 1. decelerated motion
 - 2. accelerated motion
 - 3. non-uniform motion
 - 4. uniform motion

Question ID : 264330105468
Status : **Marked For Review**
Chosen Option : 2

Q.3 Which of the following bills can be initiated only in the Lok Sabha?

- Ans
- 1. Private members bill
 - 2. Constitution amendment bill
 - 3. Government bill
 - 4. Money bill

Question ID : 26433064850
Status : **Answered**
Chosen Option : 4

Q.4 Where does the headquarters of the Indian Council of Agricultural Research Institute located?

- Ans
- 1. Amritsar
 - 2. Surat
 - 3. Lucknow
 - 4. New Delhi

Question ID : 26433089213
Status : **Marked For Review**
Chosen Option : 3

Q.5 From which year did Sangeet Natak Akademi, New Delhi, institute the Ustad Bismillah Khan Yuva Puraskar?

- Ans
- 1. 2001
 - 2. 2005
 - 3. 2004
 - 4. 2006

Question ID : 26433072882
Status : **Not Answered**
Chosen Option : --

Q.6 Which of the following are food preservatives?

- Ans 1. Salt, sodium nitrite, spices and vinegar
 2. Gypsum, soda and methyl alcohol
 3. Gypsum, salt and formic acid
 4. Formic acid, vinegar and methyl alcohol

Question ID : 26433071444
Status : Answered
Chosen Option : 1

Q.7 Who among the following was conferred with the Padma Shri Award, 2021, for populating folk dance in rural Karnataka, Tamil Nadu, and Andhra Pradesh?

- Ans 1. Rama Swamy Annavarapu
 2. P Anitha
 3. Pappammal
 4. Matha B Manjamma Jogati

Question ID : 26433082124
Status : Not Answered
Chosen Option : --

Q.8 Which of the following Chola ruler built a temple for goddess Nishumbhasudini?

- Ans 1. Aditya I
 2. Rajendra II
 3. Vijayalaya
 4. Rajaraja I

Question ID : 264330105416
Status : Answered
Chosen Option : 4

Q.9 Which of the following line separates Pakistan and Afghanistan?

- Ans 1. McMohan line
 2. Jinnah line
 3. Durand line
 4. Radcliffe line

Question ID : 264330105521
Status : Answered
Chosen Option : 2

Q.10 The Phase –I programme of 'Sagar Parikrama' has been organized in Gujarat, started on 5th March, 2022 from _____.

- Ans 1. Kheda
 2. Porbandar
 3. Banaskantha
 4. Mandvi

Question ID : 264330105279
Status : Answered
Chosen Option : 2

Q.11 Who was Player of the Match in the final of U-19 World Cup cricket,2022?

- Ans
- 1. James Rew
 - 2. Nishant Sindhu
 - 3. Raj Bawa
 - 4. Yash Dhull

Question ID : 26433071545
Status : Answered
Chosen Option : 1

Q.12 Warren Hastings became the first Governor General of India in which year?

- Ans
- 1. 1767
 - 2. 1757
 - 3. 1773
 - 4. 1783

Question ID : 264330105540
Status : Not Answered
Chosen Option : --

Q.13 When expenditure exceeds revenue, the budget is said to be in _____.

- Ans
- 1. deficit
 - 2. surplus
 - 3. reserve
 - 4. debt

Question ID : 264330105364
Status : Answered
Chosen Option : 1

Q.14 Who wrote the book titled 'Gift to Monotheism'?

- Ans
- 1. Swami Vivekanand
 - 2. Dayanand Saraswati
 - 3. Keshavchand Sen
 - 4. Rajaram Mohan Rai

Question ID : 26433089159
Status : Answered
Chosen Option : 4

Q.15 Yamini Krishnamurthy is famous for which dance form?

- Ans
- 1. Manipuri
 - 2. Odissi
 - 3. Bharatanatyam
 - 4. Yakshagana

Question ID : 26433064383
Status : Answered
Chosen Option : 3

Q.16 What is the set of ecosystem called?

- Ans 1. Stratosphere
 2. Hydrosphere
 3. Biome
 4. Atmosphere

Question ID : 26433064447
Status : Answered
Chosen Option : 4

Q.17 Who choreographed the Bollywood song 'Mohe Rang Do Laal' from Bajirao Mastani?

- Ans 1. Saroj Khan
 2. Farah Khan
 3. Ganesh Acharya
 4. Birju Maharaj

Question ID : 26433082156
Status : Not Answered
Chosen Option : --

Q.18 Which of the following is a strong reducing agent used to reduce aldehydes, ketones, esters, carboxylic acid chlorides, carboxylic acids and even carboxylate salts to alcohols?

- Ans 1. Titanium hydride
 2. Lithium aluminum hydride
 3. Calcium hydride
 4. Bismuth hydride

Question ID : 26433064074
Status : Not Answered
Chosen Option : --

Q.19 The headwaters of the river Ganga is called _____.

- Ans 1. Mandakini
 2. Alaknanda
 3. Bhagirathi
 4. Sursari

Question ID : 264330105661
Status : Not Answered
Chosen Option : --

Q.20 In hockey, what is the meaning of the signal if the umpire points both arms horizontally towards the goal?

- Ans 1. Free hit
 2. Penalty corner
 3. Penalty stroke
 4. Goal scored

Question ID : 26433071569
Status : Answered
Chosen Option : 4

Q.21 Government of India has appointed _____ as Controller General of Accounts in October 2022.

- Ans
- 1. Vinayak Godse
 - 2. Sandeep Bakshi
 - 3. Bharati Das
 - 4. KG Mohan

Question ID : 264330105340
Status : Not Answered
Chosen Option : --

Q.22 Low annual range of temperature and high annual rainfall are characteristics of a _____.

- Ans
- 1. Mediterranean climate
 - 2. temperate climate
 - 3. tropical humid climate
 - 4. cold climate

Question ID : 26433066507
Status : Answered
Chosen Option : 3

Q.23 In ancient times, the area to the south of the Ganga was known as _____.

- Ans
- 1. Magadha
 - 2. Kosala
 - 3. Anga
 - 4. Matsya

Question ID : 264330105159
Status : Not Answered
Chosen Option : --

Q.24 _____ port, situated at the head of Gulf of Kutch has been developed as a major port to cater to the needs of western and north-western parts of the country and also to reduce the pressure at Mumbai port.

- Ans
- 1. Ahmedabad
 - 2. Kandla
 - 3. Kochchi
 - 4. Kolkata

Question ID : 26433072954
Status : Answered
Chosen Option : 2

Q.25 In which of the following years was the Citizenship Act passed by the Indian Parliament?

- Ans
- 1. 1950
 - 2. 1945
 - 3. 1955
 - 4. 1948

Question ID : 26433086767
Status : Not Answered
Chosen Option : --

Q.1 The table given below shows the production and consumption of coals of 6 different countries.

Country	Production	Consumption
P	170	132
Q	336	248
R	244	185
S	330	245
T	275	226
U	195	174

What is the value of total consumption of coal of all the 6 countries?

- Ans
- 1. 1010
 - 2. 401
 - 3. 1210
 - 4. 201

Question ID : 264330105759
Status : Answered
Chosen Option : 3

Q.2

$$\text{If } x^4 + \frac{1}{x^4} = 194 \text{ and } x^3 + \frac{1}{x^3} = ?$$

- Ans
- 1. 52
 - 2. 58
 - 3. 76
 - 4. 67

Question ID : 26433075429
Status : Answered
Chosen Option : 1

Q.3

Simplify the given expression.

$$(5x + 8y)(25x^2 + 64y^2 - 40xy)$$

- Ans
- 1. $125x^3 - 512y^3$
 - 2. $25x^3 + 64y^3$
 - 3. $125x^3 + 512y^3$
 - 4. $25x^3 - 64y^3$

Question ID : 26433085782
Status : Answered
Chosen Option : 3

Q.4 A civil contractor planned to build an over bridge of 3 km distance in 600 days. For this purpose, he employed 90 workers. After 200 days of work, it was observed that only 0.5 km of the bridge was completed. What is the number of extra workers required to complete the work in time?

- Ans
- 1. 100
 - 2. 140
 - 3. 125
 - 4. 135

Question ID : 26433075926
Status : Answered
Chosen Option : 4

Q.5 A shopkeeper bought a cycle for ₹1,200 and sold it for ₹1,500. Find his profit/loss percentage.

- Ans
- 1. 3% profit
 - 2. 15% profit
 - 3. 30% loss
 - 4. 25% profit

Question ID : 26433066056
Status : Answered
Chosen Option : 4

Q.6 9435 is added to 7593, then 2607 is subtracted from the sum. The result is divisible by:

- Ans
- 1. 4
 - 2. 10
 - 3. 3
 - 4. 5

Question ID : 26433074980
Status : Answered
Chosen Option : 3

Q.7 In a ΔXYZ , XO is the median and $XO = \frac{1}{2} YZ$. If $\angle YXO = 30^\circ$, then what is the value of $\angle XYZ$?

- Ans
- 1. 15°
 - 2. 90°
 - 3. 30°
 - 4. 60°

Question ID : 26433075364
Status : Answered
Chosen Option : 4

Q.8 Find the LCM of 186.6 and 373.2.

- Ans
- 1. 373.2
 - 2. 398.2
 - 3. 186.6
 - 4. 276.6

Question ID : 26433080079
Status : Answered
Chosen Option : 1

Q.9 A copper sphere of diameter 18 metre is drawn into a cylindrical wire of length 12 metre. What is the radius of the wire?

- Ans
- 1. 5 metre
 - 2. 9 metre
 - 3. 3 metre
 - 4. 12 metre

Question ID : 264330105880
Status : Answered
Chosen Option : 2

Q.10 The length and breadth of a cuboid is increased by 20% and 25%, respectively, while its height is reduced by 30%. What must be the total percentage increase/decrease in the volume of the cuboid?

- Ans
- 1. Increase by 5%
 - 2. Increase by 3%
 - 3. Decrease by 2%
 - 4. Decrease by 4%

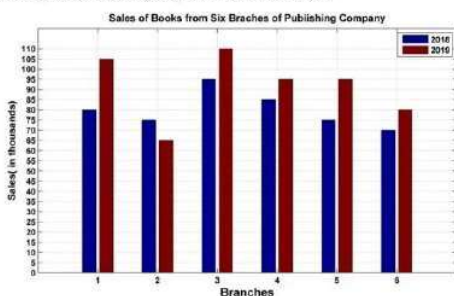
Question ID : 26433061400
Status : Answered
Chosen Option : 1

Q.11 Find the fourth proportional to the numbers 24, 192 and 27.

- Ans
- 1. 216
 - 2. 108
 - 3. 162
 - 4. 170.67

Question ID : 26433065084
Status : Answered
Chosen Option : 1

Q.12 The following bar graph shows the sales of books (in thousands) from six branches of a publishing company during two consecutive years 2018 and 2019.

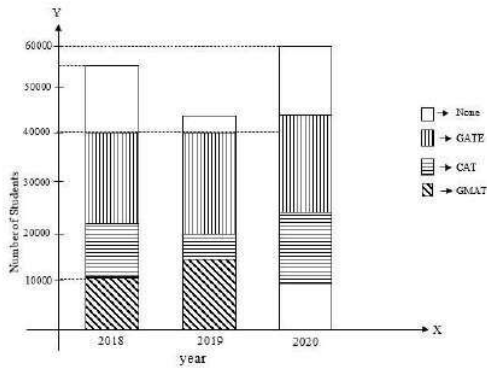


What is the average sales of all the branches (in thousands) for the year 2018?

- Ans
- 1. 84
 - 2. 78
 - 3. 80
 - 4. 86

Question ID : 26433082419
Status : Answered
Chosen Option : 3

Q.13 The below bar graph represents the number of students who qualified in the GATE exam, the GMAT exam, the CAT exam and those who qualified in none of these exams. (Given that there are no students who passed two or more exams.)



The percentage of students who qualified in at least one of the three exams in 2018 was:

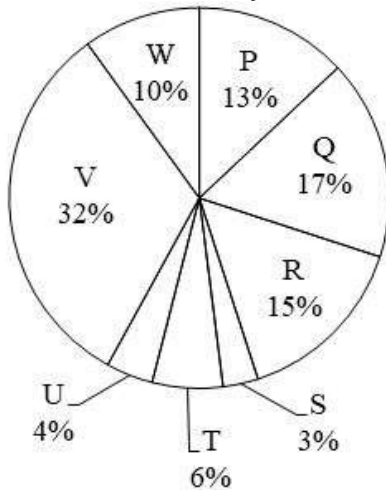
- Ans 1. 72.72%
 2. 77.67%
 3. 83.83%
 4. 67.67%

Question ID : 26433080247

Status : Not Attempted and Marked For Review

Chosen Option : --

Q.14 The pie chart given below shows the number of television sold by 8 different companies. The total number of television sold by all these 8 companies is 21000. The number of television sold by a particular company is shown as a percent of total number of television sold by all these 8 companies.



J1 = The value of average number of television sold by P and W.

J2 = The value of average number of television sold by Q, R, S and V.

What is the value of $(J2 - J1)$?

- Ans 1. 5630
 2. 2046
 3. 11025
 4. 3260

Question ID : 264330105782

Status : Answered

Chosen Option : 3

Q.15 The length of the altitude of an equilateral triangle is $6\sqrt{3}$ m. The perimeter of the equilateral triangle (in m) is:

- Ans
- 1. $12\sqrt{2}$
 - 2. $36\sqrt{2}$
 - 3. 36
 - 4. $24\sqrt{3}$

Question ID : 26433075824
Status : Answered
Chosen Option : 3

Q.16 $\cos(30^\circ + \theta) - \sin(60^\circ - \theta) = \underline{\hspace{2cm}}$.

- Ans
- 1. $\frac{\sqrt{3}}{2}$
 - 2. 0
 - 3. $\frac{1}{2}$
 - 4. $\frac{1}{\sqrt{2}}$

Question ID : 26433058180
Status : Answered
Chosen Option : 2

Q.17 A starts from a point at a speed of 34 m/s. After 5 seconds, B starts chasing A from the same point at a speed of 44 m/s. What will be the distance travelled by B before A is caught by B?

- Ans
- 1. 748 metres
 - 2. 862 metres
 - 3. 675 metres
 - 4. 549 metres

Question ID : 264330105700
Status : Not Answered
Chosen Option : --

Q.18 The average of the first 7 non-zero multiples of 17 is:

- Ans
- 1. 67
 - 2. 68
 - 3. 69
 - 4. 66

Question ID : 26433071275
Status : Answered
Chosen Option : 2

Q.19 Find the value of the following expression.

$$5(\sin^4\theta + \cos^4\theta) + 3(\sin^6\theta + \cos^6\theta) + 19\sin^2\theta\cos^2\theta$$

Ans 1.8

2.5

3.6

4.7

Question ID : 26433075026

Status : Answered

Chosen Option : 1

Q.20 What is the total surface area of a cone, if the slant height and radius of a cone is 30 cm and 14 cm, respectively?

Ans 1. 1980 cm³

2. 1963 cm³

3. 1908 cm³

4. 1936 cm³

Question ID : 26433066058

Status : Answered

Chosen Option : 4

Q.21 What annual instalment will discharge a debt of Rs.9,600 due in 5 years at 10% simple interest?

Ans 1. Rs.1450

2. Rs.1550

3. Rs.1500

4. Rs.1600

Question ID : 26433075734

Status : Not Answered

Chosen Option : --

Q.22 Simplify $\sqrt{36x^2 - 108x + 81}$.

Ans 1. $6x - 9$

2. $2x - 9$

3. $5x - 9$

4. $3x - 3$

Question ID : 26433075035

Status : Answered

Chosen Option : 1

Q.23

What will be the value of $\frac{\tan 45^\circ - \tan 15^\circ}{1 + \tan 45^\circ \tan 15^\circ}$?

Ans

1. $\sqrt{3}$

2. $\frac{1}{\sqrt{2}}$

3. $\frac{1}{\sqrt{3}}$

4. $\sqrt{2}$

Question ID : 264330105909

Status : Answered

Chosen Option : 3

Q.24

If $\sin \theta = \frac{3}{5}$, then what is $\tan \theta$?

Ans

1. $\frac{3}{5}$

2. $\frac{4}{3}$

3. $\frac{4}{5}$

4. $\frac{3}{4}$

Question ID : 26433075360

Status : Answered

Chosen Option : 4

Q.25 What will be the cost price of the goods if a shopkeeper allows a discount of 10% on the marked price of Rs.100 and gains 8%(rounded off to the nearest integer)?

Ans

1. Rs.83

2. Rs.86

3. Rs.87

4. Rs.81

Question ID : 26433075236

Status : Answered

Chosen Option : 1

Section : English Comprehension

Q.1 Choose the correct meaning of the given idiom.
Turn over a new leaf

Ans

1. To begin again

2. To stop finally

3. To plant a tree

4. To take a break

Question ID : 26433060918

Status : Answered

Chosen Option : 1

Q.2 Sentences of a paragraph are given below in jumbled order. Arrange the sentences in the correct order to form a meaningful and coherent paragraph.

- A. The principal wished the students continued to aim for perfection in their future endeavours.
- B. The principal also lauded educators for their tireless efforts to educate students and inspire them to come up with new ideas.
- C. Our college's principal delivered an excellent speech in which he lauded the pupils.
- D. The principal mentioned how teaching assistants assisted students in resolving academic and social challenges.

- Ans
- 1. ABCD
 - 2. CDBA
 - 3. CABD
 - 4. DBAC

Question ID : 26433070627
Status : Answered
Chosen Option : 2

Q.3 Select the most appropriate meaning of the underlined idiom in the given sentence.

A fair-weather friend can never be trusted in the times of exigency.

- Ans
- 1. A close friend
 - 2. A pen friend
 - 3. A selfish friend
 - 4. An old acquaintance

Question ID : 26433071986
Status : Answered
Chosen Option : 3

Q.4 Parts of the following sentence have been given as options. Select the option that contains a grammatical error.

Bobo was / very richer than Jim / as he had illicitly accumulated / all his wealth.

- Ans
- 1. very richer than Jim
 - 2. all his wealth.
 - 3. as he had illicitly accumulated
 - 4. Bobo was

Question ID : 26433073824
Status : Answered
Chosen Option : 1

Q.5 Select the most appropriate option that can substitute the underlined segment in the given sentence.

Unemployment has become a fiery question of the day.

- Ans
- 1. become a burning question
 - 2. become a freezing question
 - 3. become a furious question
 - 4. become a flaming question

Question ID : 26433084633
Status : Answered
Chosen Option : 1

Q.6 Select the most appropriate ANTONYM of the word 'PENILESS' from the given sentence.

Living in a house with a spacious lawn a proper parking space and a nice swimming pool is still a dream for many rich people in Mumbai.

- Ans
- 1. Rich
 - 2. Space
 - 3. Spacious
 - 4. Dream

Question ID : 26433060700
Status : Answered
Chosen Option : 1

Q.7 Select the option that is similar in meaning to the underlined word.

He gave a concise explanation of the company's retirement plan.

- Ans
- 1. Clear
 - 2. Verbose
 - 3. Terse
 - 4. Sharp

Question ID : 26433060590
Status : Answered
Chosen Option : 1

Q.8 The following sentence has been split into four segments. Identify the segment that contains a grammatical error.
They all, except Shirin, were very sad / during the farewell party given / to the teacher retiring, and her / indifference were well noticed.

- Ans
- 1. They all, except Shirin, were very sad
 - 2. during the farewell party given
 - 3. indifference were well noticed
 - 4. to the teacher retiring, and her

Question ID : 26433084906
Status : Answered
Chosen Option : 3

Q.9 Select the word segment that substitutes (replaces) the bracketed word segment correctly and completes the sentence meaningfully:
Estella had hardly heard the news (after) she began to weep.

- Ans
- 1. while
 - 2. well
 - 3. than
 - 4. when

Question ID : 26433088799
Status : Answered
Chosen Option : 4

Q.10 Select the most appropriate ANTONYM of the given word.

Accept

- Ans 1. Agree
 2. Respond
 3. Deny
 4. Confirm

Question ID : 26433060894
Status : Answered
Chosen Option : 3

Q.11 Select the most appropriate option to fill in the blank.

I am _____ after five years.

- Ans 1. making an exam
 2. taking an exam
 3. keeping an exam
 4. frying an exam

Question ID : 26433088786
Status : Answered
Chosen Option : 2

Q.12 Select the most appropriate option to replace the underlined segment in the given sentence.

They spoke about the political turmoil in the state.

- Ans 1. expressed
 2. said
 3. talked
 4. stated

Question ID : 26433084735
Status : Answered
Chosen Option : 3

Q.13 Select the correct active form of the given sentence.

Luckily, the machinery was not used by them.

- Ans 1. Luckily, they had not used the machinery.
 2. Luckily, they did not used the machinery.
 3. Luckily, they have not used the machinery.
 4. Luckily, I did not used the machinery.

Question ID : 264330104588
Status : Answered
Chosen Option : 1

Q.14 Select the most appropriate option to fill in the blank and complete the collocation.

Happiness can be spread by being grateful or _____ compliments to someone.

- Ans
- 1. giving
 - 2. paying
 - 3. accepting
 - 4. sharing

Question ID : 26433073565
Status : Answered
Chosen Option : 1

Q.15 Parts of the given sentence have been given as options. One of them contains a spelling error. Select the option that rectifies the error.

In research done by an online publication it was found that the most popular password is 123456!

- Ans
- 1. publication
 - 2. password
 - 3. research
 - 4. popular

Question ID : 26433059574
Status : Answered
Chosen Option : 1

Q.16 Select the correct active form of the given sentence.
You are asked to tell the plumber to mend all the pipes.

- Ans
- 1. Command the plumber mending all the pipes.
 - 2. Tell the plumber to mend all the pipes.
 - 3. All the pipes must be mend.
 - 4. Tell the plumber mending all the pipes.

Question ID : 264330104590
Status : Answered
Chosen Option : 2

Q.17 Select the option that can be used as a one-word substitute for the given group of words.

Holding on to something or keeping an opinion with determination

- Ans
- 1. Gracious
 - 2. Tenacious
 - 3. Obnoxious
 - 4. Loquacious

Question ID : 26433073680
Status : Answered
Chosen Option : 1

Q.18 Parts of the following sentence have been given as options. Select the option that contains a grammatical error. If you don't find any error, mark 'No error' as your answer.

Her concerts / are very admired / by the foreigners / no error.

- Ans 1. are very admired
 2. by the foreigners.
 3. No error
 4. Her concerts

Question ID : 26433073823
Status : Answered
Chosen Option : 1

Q.19 Select the INCORRECTLY spelt word.

- Ans 1. Sabbatical
 2. Confluence
 3. Sinhaleese
 4. Conform

Question ID : 26433063145
Status : Answered
Chosen Option : 4

Q.20 Select the most appropriate ANTONYM of the word vivid from the given sentence:
In my murky memory lane, I still could vividly apprehend and envision the pictures of Nischindipu while reading Bibhutibhushan Bandyopadhyay's "Pather Panchali"

- Ans 1. perceive
 2. apprehend
 3. murky
 4. envision

Question ID : 26433058557
Status : Answered
Chosen Option : 4

Comprehension:

In the following passage, some words have been deleted. Read the passage carefully and select the most appropriate option to fill in each blank.

The thing nodded vigorously; as it nodded, the left button-eye fell off and (1) _____ (2) _____ the concrete floor. The thing looked around (3) _____ with its one eye, as if it had lost her. The thing twisted bonelessly (4) _____ its one eye was again facing her. And it (5) _____ across the cellar towards her then.

SubQuestion No : 21

Q.21 Select the most appropriate option to fill in blank number 1.

- Ans 1. clattered
 2. hissed
 3. fizzed
 4. buzzed

Question ID : 26433084853
Status : Answered
Chosen Option : 1

Comprehension:

In the following passage, some words have been deleted. Read the passage carefully and select the most appropriate option to fill in each blank.

The thing nodded vigorously; as it nodded, the left button-eye fell off and (1) _____ (2) _____ the concrete floor. The thing looked around (3) _____ with its one eye, as if it had lost her. The thing twisted bonelessly (4) _____ its one eye was again facing her. And it (5) _____ across the cellar towards her then.

SubQuestion No : 22

Q.22 Select the most appropriate option to fill in blank number 2.

- Ans 1. up
 2. to
 3. at
 4. on to

Question ID : 26433084854

Status : Answered

Chosen Option : 4

Comprehension:

In the following passage, some words have been deleted. Read the passage carefully and select the most appropriate option to fill in each blank.

The thing nodded vigorously; as it nodded, the left button-eye fell off and (1) _____ (2) _____ the concrete floor. The thing looked around (3) _____ with its one eye, as if it had lost her. The thing twisted bonelessly (4) _____ its one eye was again facing her. And it (5) _____ across the cellar towards her then.

SubQuestion No : 23

Q.23 Select the most appropriate option to fill in blank number 3.

- Ans 1. wittily
 2. ferociously
 3. vacantly
 4. involuntarily

Question ID : 26433084855

Status : Answered

Chosen Option : 2

Comprehension:

In the following passage, some words have been deleted. Read the passage carefully and select the most appropriate option to fill in each blank.

The thing nodded vigorously; as it nodded, the left button-eye fell off and (1) _____ (2) _____ the concrete floor. The thing looked around (3) _____ with its one eye, as if it had lost her. The thing twisted bonelessly (4) _____ its one eye was again facing her. And it (5) _____ across the cellar towards her then.

SubQuestion No : 24

Q.24 Select the most appropriate option to fill in blank number 4.

- Ans 1. unless
 2. until
 3. ever after
 4. even so

Question ID : 26433084856

Status : Answered

Chosen Option : 2

Comprehension:

In the following passage, some words have been deleted. Read the passage carefully and select the most appropriate option to fill in each blank.

The thing nodded vigorously; as it nodded, the left button-eye fell off and (1) _____ (2) _____ the concrete floor. The thing looked around (3) _____ with its one eye, as if it had lost her. The thing twisted bonelessly (4) _____ its one eye was again facing her. And it (5) _____ across the cellar towards her then.

SubQuestion No : 25

Q.25 Select the most appropriate option to fill in blank number 5.

- Ans 1. hung
 2. rung
 3. lunged
 4. flung

Question ID : 26433084857

Status : Answered

Chosen Option : 1

Combined Graduate Level Examination Tier I 2022

Roll Number	
Candidate Name	
Venue Name	iON Digital Zone iDZ Perecherla
Exam Date	07/12/2022
Exam Time	5:15 PM - 6:15 PM
Subject	Combined Graduate Level Examination Tier I 2022

Section : General Intelligence and Reasoning

Q.1 In a certain code language, 'NUMEROUS' is written as 'WPGOQTUW' and 'OPTIONAL' is written as 'RQKVPQNC'. How will 'NOTEBOOK' be written in that language?

Ans 1. QPGVQDMQ

2. QPGVQDNQ

3. QPGVDQMQ

4. QPVGQDMQ

Question ID : 26433067337

Status : Not Answered

Chosen Option : --

Q.2 In the following question below are given some statements followed by some conclusions based on those statements. Taking the given statements to be true even if they seem to be at variance from commonly known facts. Read all the conclusions and then decide which of the given conclusion logically follows the given statements.

Statements:

I. All F are K.

II. All W are K.

Conclusions:

I. All W are F.

II. Some K are not W.

III. Some F are W.

Ans 1. Both conclusions I and III follows

2. Both conclusions II and III follows

3. Only conclusion I follows

4. Neither conclusion follows

Question ID : 264330104954

Status : Answered

Chosen Option : 2

Q.3 Which two signs should be interchanged to make the given equation correct?

$$16 + 4 \div 2 * 12 - 4 = 40$$

Ans 1. + and *

2. + and -

3. + and *

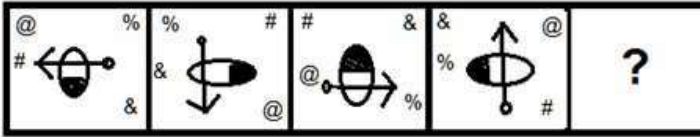
4. ÷ and +

Question ID : 26433067851

Status : Not Answered

Chosen Option : --

Q.4 Select the figure that will come next in the following figure series.



Ans

- ✓ 1.
- ✗ 2.
- ✗ 3.
- ✗ 4.

Question ID : 26433068974
 Status : Answered
 Chosen Option : 1

Q.5 In a certain code language, 'ARTIST' is written as 'ASTITT' and 'ADVICE' is written as 'AEVIDE'. How will 'ASPECT' be written in that language?

- ✗ 1. ATEPDT
- ✗ 2. ATQFDT
- ✓ 3. ATPEDT
- ✗ 4. ATPECT

Question ID : 26433066024
 Status : Answered
 Chosen Option : 3

Q.6 Select the set in which the numbers are related in the same way as are the numbers of the following sets.

(NOTE : Operations should be performed on the whole numbers, without breaking down the numbers into its constituent digits. E.g. 13 – Operations on 13 such as adding / subtracting / multiplying etc. to 13 can be performed. Breaking down 13 into 1 and 3 and then performing mathematical operations on 1 and 3 is not allowed)
 (42, 18, 3)
 (36, 14, 4)

- ✓ 1. (34, 13, 4)
- ✗ 2. (50, 20, 4)
- ✗ 3. (46, 18, 4)
- ✗ 4. (42, 15, 5)

Question ID : 26433070239
 Status : Not Answered
 Chosen Option : --

SSC CGL 2022 TIER 1 DECEMBER 7, 2022 SHIFT 4 QUESTION PAPER

Exam Date	07/12/2022
Exam Time	5:15 PM - 6:15 PM
Subject	Combined Graduate Level Examination Tier I 2022

Section : General Intelligence and Reasoning

Q.1 In a certain code language, 'NUMEROUS' is written as 'WPGOQTUW' and 'OPTIONAL' is written as 'RQKVPQNC'. How will 'NOTEBOOK' be written in that language?

- Ans 1. QPGVQDMQ
 2. QPGVQDNQ
 3. QPGVDQMQ
 4. QPVGQDMQ

Question ID : 26433067337
Status : Not Answered
Chosen Option : --

Q.2 In the following question below are given some statements followed by some conclusions based on those statements. Taking the given statements to be true even if they seem to be at variance from commonly known facts. Read all the conclusions and then decide which of the given conclusion logically follows the given statements.

Statements:

- I. All F are K.
II. All W are K.

Conclusions:

- I. All W are F.
II. Some K are not W.
III. Some F are W.

- Ans 1. Both conclusions I and III follows
 2. Both conclusions II and III follows
 3. Only conclusion I follows
 4. Neither conclusion follows

Question ID : 264330104954
Status : Answered
Chosen Option : 2

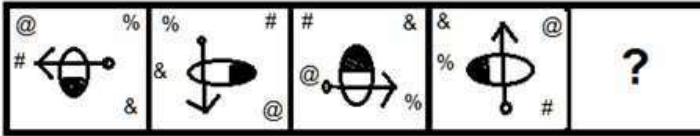
Q.3 Which two signs should be interchanged to make the given equation correct?

$$16 + 4 \div 2 * 12 - 4 = 40$$

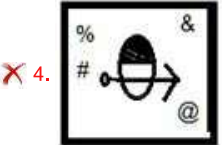
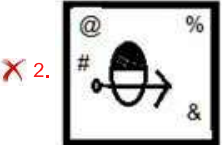
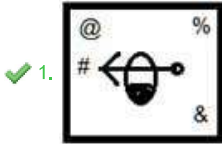
- Ans 1. + and *
 2. + and -
 3. + and *
 4. ÷ and +

Question ID : 26433067851
Status : Not Answered
Chosen Option : --

Q.4 Select the figure that will come next in the following figure series.



Ans



Question ID : 26433068974

Status : Answered

Chosen Option : 1

Q.5 In a certain code language, 'ARTIST' is written as 'ASTITT' and 'ADVICE' is written as 'AEVIDE'. How will 'ASPECT' be written in that language?

- Ans
- ✗ 1. ATEPDT
 - ✗ 2. ATQFDT
 - ✓ 3. ATPEDT
 - ✗ 4. ATPECT

Question ID : 26433066024

Status : Answered

Chosen Option : 3

Q.6 Select the set in which the numbers are related in the same way as are the numbers of the following sets.

(NOTE : Operations should be performed on the whole numbers, without breaking down the numbers into its constituent digits. E.g. 13 – Operations on 13 such as adding / subtracting / multiplying etc. to 13 can be performed. Breaking down 13 into 1 and 3 and then performing mathematical operations on 1 and 3 is not allowed)
 (42, 18, 3)
 (36, 14, 4)

- Ans
- ✓ 1. (34, 13, 4)
 - ✗ 2. (50, 20, 4)
 - ✗ 3. (46, 18, 4)
 - ✗ 4. (42, 15, 5)

Question ID : 26433070239

Status : Not Answered

Chosen Option : --

Q.7 Select the option that is related to the third number in the same way as the second number is related to the first number and the sixth number is related to the fifth number.

$$144 : 36 :: 81 : ? :: 196 : 42$$

- Ans
- 1. 30
 - 2. 23
 - 3. 27
 - 4. 29

Question ID : 26433067908
Status : Not Answered
Chosen Option : --

Q.8 Which two signs and two numbers should be interchanged in the following equation to make it correct?

$$20 - 10 \times 342 \div 19 + 51 = 211$$

- Ans
- 1. 51 and 20, - and +
 - 2. 20 and 342, - and +
 - 3. 10 and 20, - and \times
 - 4. 19 and 342, \times and +

Question ID : 26433096019
Status : Not Answered
Chosen Option : --

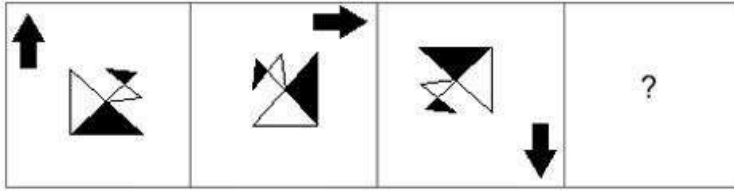
Q.9 Select the option that is related to the third word in the same way as the second word is related to the first word. (The words must be considered as meaningful English words and must not be related to each other based on the number of letters/number of consonants/vowels in the word.)

Time : Second :: Electric Current : ?

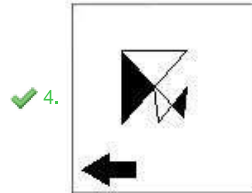
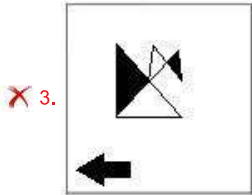
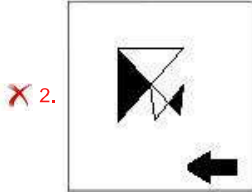
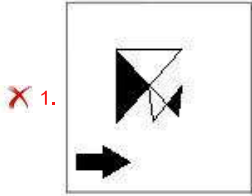
- Ans
- 1. Ampere
 - 2. Kelvin
 - 3. Candela
 - 4. Mole

Question ID : 26433068357
Status : Answered
Chosen Option : 1

Q.10 Select the figure that will come next in the following figure series.



Ans



Question ID : 26433083104
Status : Answered
Chosen Option : 4

Q.11 Select the word-pair that best represents a similar relationship to the one expressed in the given pair of words.

(The words must be considered as meaningful English words and must not be related to each other based on the number of letters/number of consonants/vowels in the word)

Horizontal : Vertical

Ans 1. Smart : Intelligent

2. Humid : Dry

3. Include : Involve

4. Exit : Leave

Question ID : 26433068419
Status : Answered
Chosen Option : 2

Q.12 In the following question, select the missing number from the given series.
17, 34, 51, ?, 85, 102

Ans 1. 68

2. 70

3. 74

4. 78

Question ID : 264330105025

Status : Answered

Chosen Option : 1

Q.13 Read the given statements and conclusions carefully. Assuming that the information given in the statements is true, even if it appears to be at variance with commonly known facts, decide which of the given conclusions logically follow(s) from the statements.

Statements:

- All Tim are Jack.
- No Jack is Ben.
- Some Ben is Ruth.

Conclusions:

- I. No Ruth is Jack.
- II. Some Ben are Jack.
- III. No Ben is Tim.

Ans 1. Only conclusion I and II follow

2. Only conclusion III follows

3. Only conclusion I follows

4. Only conclusion I and III follow

Question ID : 26433058078

Status : Answered

Chosen Option : 2

Q.14 A series is given with one term missing. Select the correct alternative from the given ones that will complete the series.
MOR, SXE, YGR, EPE, ?

Ans 1. KYR

2. NRQ

3. NRM

4. KMR


Question ID : 264330104798

Status : Answered

Chosen Option : 1

Q.15 Select the correct mirror image of the given combination when the mirror is placed at 'PQ' as shown below.

THOUGHTF9L



- Ans
- 1. JUETHGOUHT
 - 2. JETHGOUHT
 - 3. J8ETHGOUHT
 - 4. JETHGOUHT

Question ID : 26433067825
Status : Answered
Chosen Option : 4

Q.16 By interchanging the given two signs which of the following equation will be correct?
+ and -

- Ans
- 1. $7 - 5 \times 3 + 24 \div 6 = 7$
 - 2. $20 \div 4 - 5 \times 6 + 3 = 32$
 - 3. $4 + 5 \times 2 - 9 \div 3 = 5$
 - 4. $7 \times 3 - 10 + 8 \div 2 = 29$

Question ID : 264330105113
Status : Answered
Chosen Option : 2

Q.17 In the following question, four number pairs are given. In each pair the number on left side of (-) is related to the number of the right side of (-) with some Logic/Rule/Relation. Three pairs are similar on basis of same Logic/Rule/Relation. Select the odd one out from the given alternatives. (NOTE: Operations should be performed on the whole numbers, without breaking down the numbers into its constituent digits. E.g.13 - Operations on 13 such as adding /subtracting /multiplying etc. to 13 can be performed. Breaking down 13 into 1 and 3 and then performing mathematical operations on 1 and 3 is not allowed)

- Ans
- 1. $11 - 23$
 - 2. $9 - 16$
 - 3. $25 - 51$
 - 4. $13 - 27$

Question ID : 264330105052
Status : Answered
Chosen Option : 2

Q.18 A + B means 'A is the father of B'
 A - B means 'A is the mother of B'
 A * B means 'A is the sister of B'
 A % B means 'A is the husband of B'
 If A % B - C + D * E, then how is A related to E?

- Ans 1. Father's father
 2. Brother
 3. Father's brother
 4. Father-in-law

Question ID : 26433059898
 Status : Answered
 Chosen Option : 1

Q.19 Three different positions of the same dice are shown (figures 1 to 3). Find the number on the face opposite to the face having '5'.

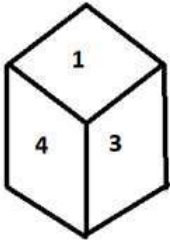


figure 1

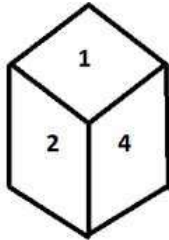


figure 2

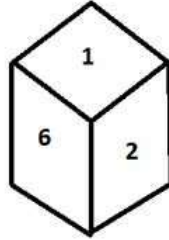


figure 3

- Ans 1. 4
 2. 3
 3. 6
 4. 1

Question ID : 26433070247
 Status : Answered
 Chosen Option : 4

Q.20 Three of the following letter-clusters are alike in some manner and hence form a group. Which letter-cluster does not belong to that group?

- Ans 1. KPW
 2. QGM
 3. DIP
 4. SXE

Question ID : 26433081491
 Status : Answered
 Chosen Option : 2

Q.21 Which of the following letters will replace the question mark (?) and complete the letter series?

J, D, X, R, L, ?

Ans 1. F

2. D

3. E

4. G

Question ID : 26433066004

Status : Answered

Chosen Option : 1

Q.22 If $A + B$ means that A is the father of B, $A \times B$ means that A is the mother of B, $A - B$ means that A is the brother of B then which of the following expression shows that P is the paternal grandmother of R?

Ans 1. $Q \times P + R$

2. $P \times Q - R$

3. $P + R \times Q$

4. $P \times Q + R$

Question ID : 264330104981

Status : Answered

Chosen Option : 4

Q.23 Select the set in which the numbers are related in the same way as are the numbers of the following set.

(NOTE: Operations should be performed on the whole numbers, without breaking down the numbers into its constituent digits.)

(4, 50, 6)

(13, 128, 3)

Ans 1. (12, 60, 5)

2. (2, 125, 3)

3. (2, 62, 6)

4. (15, 162, 3)

Question ID : 26433069232

Status : Not Answered

Chosen Option : --

Q.24 Select the option that represents the correct order of the given words as they would appear in an English dictionary.

1- Submerse

2- Sublimity

3- Submerge

4- Submit

5- Submarine

Ans 1. 5, 3, 2, 4, 1

2. 2, 5, 4, 1, 3

3. 2, 3, 5, 1, 4


4. 2, 5, 3, 1, 4

Question ID : 26433079455

Status : Answered

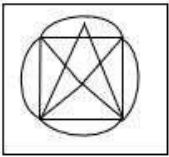
Chosen Option : 4

Q.25 Select the option in which the given figure is embedded. (Rotation is NOT allowed)

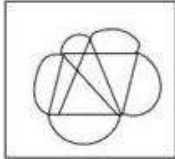


Ans

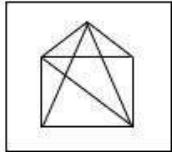
✓ 1.



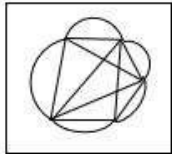
✗ 2.



✗ 3.



✗ 4.



Question ID : 26433068123
Status : Answered
Chosen Option : 1

Section : General Awareness

Q.1 Which of the following is a characteristic of sedimentary rocks?

Ans ✗ 1. Lineation

✗ 2. Bands

✗ 3. Foliation

✓ 4. Lithification

Question ID : 26433066703
Status : Not Answered
Chosen Option : --

Q.2 Which of the following countries was the host of the ICC Men's T20 World Cup, 2021?

Ans ✗ 1. West Indies And USA

✗ 2. Australia and New Zealand

✓ 3. UAE and Oman

✗ 4. England and Scotland

Question ID : 26433071550
Status : Answered
Chosen Option : 4

Q.3 In rainforests which kind of cultivation is practices?

- Ans
- 1. Dry farming
 - 2. Vertical farming
 - 3. Terrace farming
 - 4. Slash and burn

Question ID : 264330105604
Status : Answered
Chosen Option : 2

Q.4 Who has been elected the 14th Vice President of India?

- Ans
- 1. Pratibha Banerjee
 - 2. Jagdeep Dhankhar
 - 3. Margaret Alva
 - 4. Venkaiah Naidu

Question ID : 264330105230
Status : Answered
Chosen Option : 2

Q.5 In which state is the festival of Gudi Padwa specially celebrated?

- Ans
- 1. Maharashtra
 - 2. Punjab
 - 3. Goa
 - 4. Odisha

Question ID : 26433074092
Status : Answered
Chosen Option : 1

Q.6 Who among the following became one of the Deputy Chief Ministers of Uttar Pradesh in March 2022?

- Ans
- 1. Brajesh Pathak
 - 2. Swatantra Dev Singh
 - 3. Laxmi Narayan Chaudhary
 - 4. Jayveer Singh

Question ID : 26433054556
Status : Not Answered
Chosen Option : --

Q.7 The birthday of Prophet Muhammad is also celebrated by the name of _____.

- Ans
- 1. Eid-ul-Fitr
 - 2. Ramadan
 - 3. Eid-ul-Adha
 - 4. Mawlid al-Nabi

Question ID : 26433070842
Status : Answered
Chosen Option : 4

Q.8 Which of the following functions of government budget is associated with distribution of income?

- I. Allocation function
- II. Redistribution function

- Ans
- 1. Only I
 - 2. Neither I nor II
 - 3. Both I and II
 - 4. Only II

Question ID : 264330105384
Status : Not Answered
Chosen Option : --

Q.9 Identify the correct statement about green algae.

- Ans
- 1. Green algae usually have a soft cell wall made of an inner layer of pectose.
 - 2. Green algae usually have a rigid cell wall made of an inner layer of protein and an outer layer of fibre.
 - 3. Green algae usually have a rigid cell wall made of an inner layer of cellulose and an outer layer of pectose.
 - 4. Green algae usually have a rigid cell wall made of an inner layer of fat and an outer layer of protein.

Question ID : 26433064748
Status : Not Answered
Chosen Option : --

Q.10 Dhondo Keshav Karve was an eminent Indian who championed the cause of _____.

- Ans
- 1. allowing child marriages
 - 2. prohibiting widow remarriages
 - 3. strengthening the caste norms
 - 4. spread of women education

Question ID : 26433085312
Status : Not Answered
Chosen Option : --

Q.11 Which of the following is potash alum?

- Ans
- 1. $\text{Na}_2\text{SO}_4\text{Al}_2(\text{SO}_4)_3 \cdot 24\text{H}_2\text{O}$
 - 2. $\text{K}_2\text{SO}_4\text{Al}_2(\text{SO}_4)_3 \cdot 24\text{H}_2\text{O}$
 - 3. $\text{K}_2\text{SO}_4\text{Al}_2(\text{SO}_4)_3 \cdot 12\text{H}_2\text{O}$
 - 4. $\text{Na}_2\text{SO}_4\text{Al}_2(\text{SO}_4)_3 \cdot 20\text{H}_2\text{O}$

Question ID : 26433066462
Status : Not Answered
Chosen Option : --

Q.12 Clove is an _____ indicator.

- Ans
- 1. Chemical
 - 2. Olfactory
 - 3. Universal
 - 4. Gustatory

Question ID : 26433087877
Status : Not Answered
Chosen Option : --

Q.13 Which of the following sports was initially known as Poona?

Ans 1. Badminton

2. Baseball

3. Volleyball

4. Kho-Kho

Question ID : 26433059444

Status : **Not Answered**

Chosen Option : --

Q.14 Rajiv Kumar assumed charge as the _____ Chief Election Commissioner of India in May 2022.

Ans 1. 25th

2. 20th

3. 27th

4. 23rd

Question ID : 264330105320

Status : **Answered**

Chosen Option : 1

Q.15 _____ was conferred with 'Officier de la Legion d'Honneur', France's highest civilian award, in 2009.

Ans 1. Asha Bhosale

2. Lata Mangeshkar

3. S.Janaki

4. K.S.Chithra

Question ID : 26433054476

Status : **Not Answered**

Chosen Option : --

Q.16 Who has taken charge as India's new Foreign Secretary in May 2022?

Ans 1. Rajeev Kumar

2. Vinay Mohan Kwatra

3. T V Somanathan

4. Rakesh Mishra

Question ID : 264330105319

Status : **Not Answered**

Chosen Option : --

Q.17 Which of the following region was the capital of the Chalukyas?

Ans 1. Kanchipuram

2. Raichur

3. Aihole

4. Kolar

Question ID : 264330105196

Status : **Answered**

Chosen Option : 1

Q.18 What is the purpose of the Licensing Policy in India?

- Ans
- 1. To promote benefits to a particular group
 - 2. To maintain the identity of an area
 - 3. To show power of the government
 - 4. To promote regional equality

Question ID : 26433066636
Status : Answered
Chosen Option : 4

Q.19 Wood's Despatch is related with _____.

- Ans
- 1. Education
 - 2. Famine
 - 3. Trade
 - 4. Military

Question ID : 264330105580
Status : Not Answered
Chosen Option : --

Q.20 When did the Indian Independence Act receive the British royal assent?

- Ans
- 1. July 1947
 - 2. June 1947
 - 3. May 1947
 - 4. August 1947

Question ID : 26433089878
Status : Answered
Chosen Option : 1

Q.21 Which Indian music director was awarded Japan's Fukuoka prize - 2016 for his outstanding contribution in creating, preserving and showcasing South Asian traditional fusion music?

- Ans
- 1. Vishal Bharadwaj
 - 2. Pritam Chakraborty
 - 3. AR Rahman
 - 4. MM Keeravani

Question ID : 26433054471
Status : Not Answered
Chosen Option : --

Q.22 The official enumeration of population done periodically is called _____.

- Ans
- 1. Census
 - 2. demographic count
 - 3. Estimation
 - 4. Record

Question ID : 264330105489
Status : Answered
Chosen Option : 1

Q.23 Chemical formula of bleaching powder is _____.

- Ans
- 1. CaOCl_2
 - 2. CaO
 - 3. CaCO_3
 - 4. Ca(OH)_2

Question ID : 264330105485
Status : Answered
Chosen Option : 1

Q.24 Every law enacted by the government has to be in conformity with the _____.

- Ans
- 1. Fundamental Right
 - 2. Directive Principles
 - 3. Constitution
 - 4. Preamble

Question ID : 26433086762
Status : Answered
Chosen Option : 3

Q.25 Which of the following is a tree found in Mountain vegetation?

- Ans
- 1. Sundari
 - 2. Keekar
 - 3. Chir
 - 4. Teak

Question ID : 264330105633
Status : Not Answered
Chosen Option : --

Section : Quantitative Aptitude

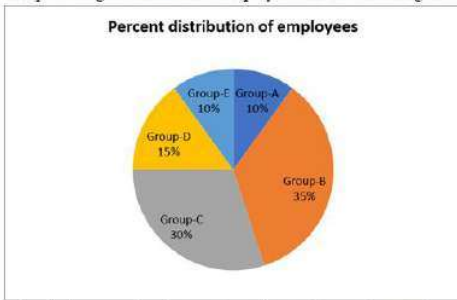
Q.1

If $4\tan\theta = 3$, then $\frac{4\sin\theta - \cos\theta + 1}{4\sin\theta + \cos\theta - 1} =$ _____.

- Ans
- 1. $\frac{14}{11}$
 - 2. $\frac{12}{11}$
 - 3. $\frac{10}{11}$
 - 4. $\frac{13}{11}$

Question ID : 26433066401
Status : Answered
Chosen Option : 4

Q.2 The percentage distribution of employees in different categories in a company is shown by the following pie chart.



What is the central angle corresponding to the employees of Group-B?

- Ans
- 1. 130°
 - 2. 120°
 - 3. 126°
 - 4. 136°

Question ID : 26433080348
Status : Answered
Chosen Option : 3

Q.3 The volume of the sphere is $38,808 \text{ cm}^3$. What is the surface area of the sphere?

- Ans
- 1. 4455 cm^2
 - 2. 4433 cm^2
 - 3. 5544 cm^2
 - 4. 3344 cm^2

Question ID : 26433063971
Status : Not Answered
Chosen Option : --

Q.4 If $x + \frac{1}{x} = 7$, find the value of $x^3 + \frac{1}{x^3}$.

- Ans
- 1. 343
 - 2. 322
 - 3. 340
 - 4. 332

Question ID : 26433075287
Status : Answered
Chosen Option : 2

Q.5 If $\tan A = 10/15$, then what will be the value of $\cos^2 A$?

- Ans
- 1. $59/269$
 - 2. $49/269$
 - 3. $69/269$
 - 4. $169/269$

Question ID : 264330105897
Status : Not Answered
Chosen Option : --

Q.6 If $(a+1)^2 + (a+2)^2 = 16$ then what is the value of $40 + 12a + 4a^2$?

- Ans
- 1. 56
 - 2. 62
 - 3. 74
 - 4. 52

Question ID : 264330105923
Status : Answered
Chosen Option : 2

Q.7 12 men and 12 women can complete a piece of work in 9 days. 6 men and 15 women can complete the same work in 12 days. How long (in days) would it take 9 women to complete half the work?

- Ans
- 1. 36
 - 2. 12
 - 3. 18
 - 4. 24

Question ID : 26433075772
Status : Not Answered
Chosen Option : --

Q.8 The radius of a hemisphere is 5.6 cm. What will be its volume?

- Ans
- 1. 367.95 cm³
 - 2. 195.95 cm³
 - 3. 380 cm³
 - 4. 265.65 cm³

Question ID : 264330105850
Status : Answered
Chosen Option : 2

Q.9 Two trains are moving in the same direction at the speed of 36 km/hr and 48 km/hr. The time taken by faster train to cross a man sitting in the slower train is 33 seconds. What will be the length of the faster train?

- Ans
- 1. 770 metres
 - 2. 90 metres
 - 3. 110 metres
 - 4. 180 metres

Question ID : 264330105702
Status : Answered
Chosen Option : 3

Q.10 If $\tan \theta + \cot \theta = 12$, then $\tan^2 \theta + \cot^2 \theta$ is:

- Ans
- 1. 66
 - 2. 128
 - 3. 142
 - 4. 132

Question ID : 26433066264
Status : Answered
Chosen Option : 3

Q.11 The following table shows the production of different types of two wheelers from 1993 to 1998.

Number of two wheelers (in 1000s)

Type \ Year	1993	1994	1995	1996	1997	1998
A	36	34	40	35	37.5	40
B	20	22	25	23	19.5	18
C	14	22	16	25	29	35
D	60	62	67.5	75	76	80
E	40	45	48	50	80	105
F	45	52	55	60	57.5	56
Total	215	237	251.5	268	299.5	334

In which year is the percentage increase in the total production minimum in comparison to the previous year?

- Ans
- 1. 1994
 - 2. 1995
 - 3. 1996
 - 4. 1997

Question ID : 26433079787
Status : Answered
Chosen Option : 2

Q.12 Which of the following statement is correct?

I. If $K + \frac{1}{K} = 12$, then $K^2 + \frac{1}{K^2} = 142$

II. The value of $\left(k^2 + \frac{1}{k^2}\right)\left(k - \frac{1}{k}\right)\left(k^4 + \frac{1}{k^4}\right)\left(k + \frac{1}{k}\right)$ is

$$k^{16} - \frac{1}{k^{16}}$$

- Ans
- 1. Only I
 - 2. Neither I nor II
 - 3. Both I and II
 - 4. Only II

Question ID : 264330105960
Status : Answered
Chosen Option : 3

Q.13 Study the table and answer the question.

Maximum Marks → Students ↓	Subjects				
	Chemistry	Mathematics	Physics	Hindi	English
	300	300	150	300	200
Raju	60	85	90	80	65
Shyamu	65	70	60	75	65
Mohan	70	75	80	65	85
Shobh	60	65	60	85	80
Sushil	65	75	70	60	75

Percentage of marks obtained by 5 students in different subjects.

Marks obtained by Sushil in English is less/greater than that by Shyamu is:

- Ans
- 1. 10 less
 - 2. 15 more
 - 3. 20 more
 - 4. 25 less

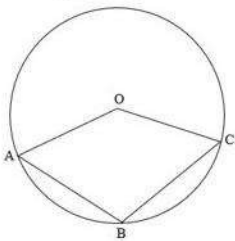
Question ID : 26433092175
Status : Answered
Chosen Option : 3

Q.14 Find the remainder when we divide $3x^4 - 2x^2 + 4x - 1$ by $2x - 1$.

- Ans
- 1. 2
 - 2. 3
 - 3. $\frac{11}{16}$
 - 4. $\frac{15}{16}$

Question ID : 26433075180
Status : Not Answered
Chosen Option : --

Q.15 In the given figure, O is the centre of the circle and $\angle AOC = 140^\circ$. Find $\angle ABC$.



- Ans
- 1. 95°
 - 2. 110°
 - 3. 120°
 - 4. 103°

Question ID : 26433074486
Status : Not Answered
Chosen Option : --

Q.16 Three candidates were participating in an election. The person at third place got 20% of the total votes while the difference between the votes of the winner and the first runner up was 20% of the total votes. If the difference between the votes of the first runner up and the second runner up was 37,000, how many votes did the winner receive?

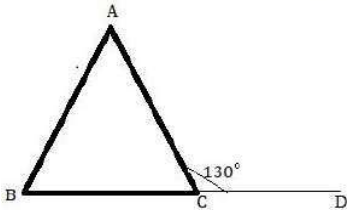
- Ans
- 1. 1,80,000
 - 2. 1,85,000
 - 3. 1,75,000
 - 4. 1,95,000

Question ID : 26433074728

Status : Answered

Chosen Option : 2

Q.17 If in a triangle ABC as drawn in the figure, $AB = AC$ and $\angle ACD = 130^\circ$, then $\angle BAC$ is equal to:



- Ans
- 1. 60°
 - 2. 50°
 - 3. 70°
 - 4. 80°

Question ID : 26433075012

Status : Answered

Chosen Option : 1

Q.18 Ramesh claims that he is selling onions at Rs.36 per kg, which costs him Rs.40 per kg, but he gives 800 grams instead of 1 kg. Find Ramesh's percentage gain or loss.

- Ans
- 1. Gain 13.5%
 - 2. Loss 13.5%
 - 3. Loss 12.5%
 - 4. Gain 12.5%

Question ID : 26433064975

Status : Not Answered

Chosen Option : --

Q.19 At a Christmas sale, all the goods in a shop are on sale at 30% discount. If Jasmine buys a skirt marked at ₹800, how much would she need to pay?

- Ans
- 1. ₹476
 - 2. ₹400
 - 3. ₹770
 - 4. ₹560

Question ID : 26433075880

Status : Answered

Chosen Option : 4

Q.20 Find the mean proportional between 27 and 300.

Ans 1. 90

2. 45

3. 135

4. 180

Question ID : 26433065079
Status : Not Answered
Chosen Option : --

Q.21 Find the simple interest on ₹2,700 for 8 months at 5 paisa per rupee per month?

Ans 1. ₹950

2. ₹720

3. ₹540

4. ₹1,080

Question ID : 26433092161
Status : Answered
Chosen Option : 4

Q.22 The average weight of apples in a basket is 50 kg. 6 more apples with the average weight of 60 kg are added in the basket. If the average weight of the basket is increased by 5 kg, then find the number of apples in the basket originally.

Ans 1. 4

2. 6

3. 2

4. 8

Question ID : 26433075345
Status : Not Answered
Chosen Option : --

Q.23 If the HCF of two numbers is 8, then which of the following can NEVER be their LCM?

Ans 1. 56

2. 48

3. 42

4. 40

Question ID : 26433080084
Status : Answered
Chosen Option : 3

Q.24 If the side of an equilateral triangle is 8cm, then find the area of the triangle (correct to two decimal places).

Ans 1. 27.17cm^2

2. 27.27cm^2

3. 27.71cm^2

4. 27.72cm^2

Question ID : 26433074348
Status : Answered
Chosen Option : 4

Q.25 The table given below shows the foreign trade by two countries in 5 different years.

Years	Country	
	P	Q
Y1	220	95
Y2	200	155
Y3	125	245
Y4	115	225
Y5	85	140

What is the value of average foreign trade by country P in all the 5 years?

- Ans
- 1. 155
 - 2. 745
 - 3. 149
 - 4. 135

Question ID : 264330105757
Status : Answered
Chosen Option : 2

Section : English Comprehension

Q.1 Rectify the sentence by selecting the correct spelling of the underlined word.

The nine-tailed fox is a mythical creature from Japanese culture.

- Ans
- 1. mythycal
 - 2. mitical
 - 3. mythical
 - 4. mithical

Question ID : 26433065144
Status : Answered
Chosen Option : 3

Q.2 Select the correct active form of the given sentence.

How his problems will be fixed by you?

- Ans
- 1. How are you fixing his problems?
 - 2. How you fix his problems?
 - 3. How will you fix his problems?
 - 4. How his problems fixed?

Question ID : 264330104596
Status : Answered
Chosen Option : 3

Q.3 Complete the following collocation.

It is easier to make a promise than to _____ a promise.

- Ans
- 1. maintain
 - 2. follow
 - 3. justify
 - 4. keep

Question ID : 26433094775
Status : Answered
Chosen Option : 4

Q.4 Parts of the following sentence have been given as options. Select the option that contains a grammatical error.

He was / paid handsomely for / his ability to handle / the crowd skillful.

- Ans
- 1. paid handsomely for
 - 2. his ability to handle
 - 3. the crowd skillful.
 - 4. He was

Question ID : 26433073825
Status : Answered
Chosen Option : 3

Q.5 Select the correct passive form of the given sentence.
She will present the paper next week.

- Ans
- 1. The paper could be presented next week by her.
 - 2. The paper will be presented next week by her.
 - 3. The paper would be presented next week by her.
 - 4. The paper can be presented next week by her.

Question ID : 264330104570
Status : Answered
Chosen Option : 2

Q.6 Select the option that can be used as a one-word substitute for the given group of words.

A perfectionist

- Ans
- 1. Meticulous
 - 2. Omniscient
 - 3. Optimist
 - 4. Ambidextrous

Question ID : 26433073675
Status : Answered
Chosen Option : 1

Q.7 Sentences of a paragraph are given below in jumbled order. Arrange the sentences in the correct order to form a meaningful and coherent paragraph.

- A.A certain aim will infuse one's life with new meaning.
- B.At some point, an aimless person's goals can be shattered and remain unfulfilled.
- C.In life, it is critical to have a workable objective or goal.
- D.A man who is aimless will never achieve success in life.

- Ans
- 1. DCAB
 - 2. BCDA
 - 3. ADCB
 - 4. DBCA

Question ID : 26433070628
Status : Answered
Chosen Option : 1

Q.8 Select the most appropriate synonym of the underlined word.

Never teach your children to flout the rules and regulations of their educational institution.

- Ans
- 1. Monitor
 - 2. Revere
 - 3. Divulge
 - 4. Mock

Question ID : 26433070655
Status : Answered
Chosen Option : 3

Q.9 Select the most appropriate option that can substitute the underlined segment in the given sentence.

The yellow dress purchased by you is not much different than the one I have brought.

- Ans
- 1. different then the one
 - 2. different as the one
 - 3. different above the one
 - 4. different from the one

Question ID : 26433084637
Status : Answered
Chosen Option : 4

Q.10 Select the most appropriate ANTONYM of the underlined word.

An autoimmune disease is a condition in which your immune system mistakenly attacks your body.

- Ans
- 1. Susceptible
 - 2. Fragile
 - 3. Sick
 - 4. Sedentary

Question ID : 26433061565
Status : Answered
Chosen Option : 3

Q.11 Select the most appropriate option that can substitute the underlined segment in the given sentence. If there is no need to substitute it, select 'No substitution'.

There are many people in the world who believe that the earth is flat.

- Ans
- 1. who belief that
 - 2. who should believe that
 - 3. No substitution
 - 4. who believed

Question ID : 26433084579
Status : Answered
Chosen Option : 3

Q.12 Select the most appropriate option that can substitute the underlined segment in the given sentence.

Mr. Alfred hasn't thought of his friend since he went abroad. Out of sight, out of mind.

- Ans
- 1. Once you leave the country, your memories vanish
 - 2. He lost his memory, as he could not see
 - 3. If you do not see someone, you forget about them.
 - 4. He simply forgot

Question ID : 26433071892
Status : Answered
Chosen Option : 3

Q.13 Select the correct direct form of the given sentence.
We asked them who had called them.

- Ans
- 1. We said to them, "Who are calling you?"
 - 2. We said to them, "Who calls you?"
 - 3. We said to them, "Who has called him?"
 - 4. We said to them, "Who has called you?"

Question ID : 264330104639
Status : Answered
Chosen Option : 4

Q.14 Select the most appropriate synonym of the word 'obscene' from the following sentence.

Vijay was suspended from duty because he gave dirty and prejudiced remarks to his female colleagues in the office.

- Ans
- 1. Dirty
 - 2. Suspended
 - 3. Prejudice
 - 4. Colleagues

Question ID : 26433072266
Status : Answered
Chosen Option : 2

Q.15 The following sentence has been split into four segments. Identify the segment that contains a grammatical error.

He does not / know how to / draw quickly / and straightly.

- Ans
- 1. and straightly
 - 2. He does not
 - 3. know how to
 - 4. draw quickly

Question ID : 26433088942
Status : Not Answered
Chosen Option : --

Q.16 Select the sentences that contains no spelling errors.

- Ans 1. Ryan squaked about losing his job owing to a leg injury.
 2. Ryan squeked about losing his job owing to a leg injury.
 3. Ryan squawked about losing his job owing to a leg injury.
 4. Ryan skuawked about losing his job owing to a leg injury.

Question ID : 26433070699
Status : Answered
Chosen Option : 1

Q.17 Select the most appropriate option to fill in the blank.
In all her sorrow she must weep or she will _____.

- Ans 1. die
 2. laugh
 3. suffer
 4. cry

Question ID : 26433086339
Status : Answered
Chosen Option : 4

Q.18 Select the most appropriate ANTONYM of the underlined word.
The antonym of a word is sometimes a prefix added to the actual word.

- Ans 1. metaverse
 2. synonym
 3. symphony
 4. metonymy

Question ID : 26433059731
Status : Answered
Chosen Option : 2

Q.19 Substitute the underlined words with the option that is closest in meaning to it.

Give us some room for improvement.

- Ans 1. an opportunity for improvement
 2. room in a house for improvement
 3. advice for improvement
 4. a warning for improvement

Question ID : 26433088953
Status : Answered
Chosen Option : 1

Q.20 Select the most appropriate option to fill in the blank.

The health personnel advised to _____ of unhealthy food habits if we want to maintain our cardio-vascular health.

- Ans 1. pay lip service
 2. keep the pot boiling
 3. run short
 4. steer clear

Question ID : 26433070548
Status : Answered
Chosen Option : 1

Comprehension:

In the following passage, some words have been deleted. Read the passage carefully and select the most appropriate option to fill in each blank.

Our beautiful ecosystem is being systematically (1)_____ by industrial pollution channelled into rivers like the Ganga and the Yamuna, nuclear wastes from atomic plants muted into the world's oceans, and (2)_____ gases such as carbon dioxide mixed with the ozonosphere. Besides, tropical rainforests and green pastures are disappearing (3)_____ the pressure of a proliferating population. Dams are being (4)_____ over the rivers like the Narmada to change nature's well-balanced surface equations between flora and fauna, and sloping mountainous terrain is being converted into mini oceans to supply electricity to the ever-starving industrial stomach of our age. Elephants, tigers, the wild rhinos of South Africa and many other forest creatures have become (5)_____ species.

SubQuestion No : 21**Q.21 Select the most appropriate option to fill in blank number 1.****Ans** ✓ 1. damaged~~✗~~ 2. oriented~~✗~~ 3. glorified~~✗~~ 4. designed

Question ID : 26433086410

Status : Answered

Chosen Option : 1

Comprehension:

In the following passage, some words have been deleted. Read the passage carefully and select the most appropriate option to fill in each blank.

Our beautiful ecosystem is being systematically (1)_____ by industrial pollution channelled into rivers like the Ganga and the Yamuna, nuclear wastes from atomic plants muted into the world's oceans, and (2)_____ gases such as carbon dioxide mixed with the ozonosphere. Besides, tropical rainforests and green pastures are disappearing (3)_____ the pressure of a proliferating population. Dams are being (4)_____ over the rivers like the Narmada to change nature's well-balanced surface equations between flora and fauna, and sloping mountainous terrain is being converted into mini oceans to supply electricity to the ever-starving industrial stomach of our age. Elephants, tigers, the wild rhinos of South Africa and many other forest creatures have become (5)_____ species.

SubQuestion No : 22**Q.22 Select the most appropriate option to fill in blank number 2.****Ans** ✓ 1. poisonous~~✗~~ 2. useful~~✗~~ 3. nuclear~~✗~~ 4. hygienic

Question ID : 26433086411

Status : Answered

Chosen Option : 1

Comprehension:

In the following passage, some words have been deleted. Read the passage carefully and select the most appropriate option to fill in each blank.

Our beautiful ecosystem is being systematically (1)_____ by industrial pollution channelled into rivers like the Ganga and the Yamuna, nuclear wastes from atomic plants muted into the world's oceans, and (2)_____ gases such as carbon dioxide mixed with the ozonosphere. Besides, tropical rainforests and green pastures are disappearing (3)_____ the pressure of a proliferating population. Dams are being (4)_____ over the rivers like the Narmada to change nature's well-balanced surface equations between flora and fauna, and sloping mountainous terrain is being converted into mini oceans to supply electricity to the ever-starving industrial stomach of our age. Elephants, tigers, the wild rhinos of South Africa and many other forest creatures have become (5)_____ species.

SubQuestion No : 23

Q.23 Select the most appropriate option to fill in blank number 3.

- Ans 1. in
 2. to
 3. on
 4. under

Question ID : 26433086412

Status : Answered

Chosen Option : 1

Comprehension:

In the following passage, some words have been deleted. Read the passage carefully and select the most appropriate option to fill in each blank.

Our beautiful ecosystem is being systematically (1)_____ by industrial pollution channelled into rivers like the Ganga and the Yamuna, nuclear wastes from atomic plants muted into the world's oceans, and (2)_____ gases such as carbon dioxide mixed with the ozonosphere. Besides, tropical rainforests and green pastures are disappearing (3)_____ the pressure of a proliferating population. Dams are being (4)_____ over the rivers like the Narmada to change nature's well-balanced surface equations between flora and fauna, and sloping mountainous terrain is being converted into mini oceans to supply electricity to the ever-starving industrial stomach of our age. Elephants, tigers, the wild rhinos of South Africa and many other forest creatures have become (5)_____ species.

SubQuestion No : 24

Q.24 Select the most appropriate option to fill in blank number 4.

- Ans 1. validated
 2. built
 3. detected
 4. associated

Question ID : 26433086413

Status : Answered

Chosen Option : 2

Comprehension:

In the following passage, some words have been deleted. Read the passage carefully and select the most appropriate option to fill in each blank.

Our beautiful ecosystem is being systematically (1)_____ by industrial pollution channelled into rivers like the Ganga and the Yamuna, nuclear wastes from atomic plants muted into the world's oceans, and (2)_____ gases such as carbon dioxide mixed with the ozonosphere. Besides, tropical rainforests and green pastures are disappearing (3)_____ the pressure of a proliferating population. Dams are being (4)_____ over the rivers like the Narmada to change nature's well-balanced surface equations between flora and fauna, and sloping mountainous terrain is being converted into mini oceans to supply electricity to the ever-starving industrial stomach of our age. Elephants, tigers, the wild rhinos of South Africa and many other forest creatures have become (5)_____ species.

SubQuestion No : 25

Q.25 Select the most appropriate option to fill in blank number 5.

- Ans 1. accumulated
 2. specified
 3. endangered
 4. granted

Question ID : 26433086414

Status : Answered

Chosen Option : 3