

2022 XI 26

0230

Seat No.

--	--	--	--	--

Time : 1½ Hours

FIRST-TERM

**GARMENT CUTTING  
AND SEWING  
(Pre-Vocational)**

Subject Code

**(Home Science Group)**

S	1	0	4	5
---	---	---	---	---

Total No. of Questions : 20 (Printed Pages : 8)

Maximum Marks : 20

- INSTRUCTIONS :**
- (i) The question paper contains 20 MCQs.
  - (ii) Every question has four choices (A), (B), (C) and (D), and only one of them is the correct answer.
  - (iii) On the OMR sheet, darken completely with a ball point pen Only ONE bubble you consider as the most appropriate answer.
  - (iv) Multiple markings are invalid.
  - (v) Use Blue or Black ball point pen only.
  - (vi) Do not fold the OMR sheet or use white ink.
  - (vii) For each question, you will be awarded ONE mark, if you have darkened only the bubble corresponding to the correct answer. In all other cases, you will get zero mark. There is no negative mark.
  - (viii) Once the bubble is filled, it is not possible to change the answer.
  - (ix) Only one OMR sheet will be provided. Hence sufficient care must be taken while darkening the bubble.




1. Name the equipment for drafting having centimeters and inches marked together. 1
  - (A) Measure tape
  - (B) Cutting table
  - (C) Scissors
  - (D) Tailors chalk
  
2. Lengthwise grain in weaving is called ..... 1
  - (A) Grain
  - (B) Selvedge
  - (C) Weft
  - (D) Warp
  
3. Facing are used to ..... 1
  - (A) join two pieces of fabric together
  - (B) provide neat finish to neckline and armhole
  - (C) give shape to a garment
  - (D) finished the side seam of a garment
  
4. Trimming materials made by own hands are called ..... 1
  - (A) commercial trimmings
  - (B) readymade trimmings
  - (C) lace trimmings
  - (D) self-made trimmings

5. Plackets opening in skirts should be ..... . 1
- (A) about 7 inches
  - (B) about 8 inches
  - (C) about 4 inches
  - (D) about 6 inches
6. Which of the following tailoring equipment is used to remove diagrams drawn on melton cloth ..... . 1
- (A) brush
  - (B) tailor's square
  - (C) pencil
  - (D) long ruler
7. When drafting a diagram always draft from the ..... . 1
- (A) center to right
  - (B) left to right
  - (C) right to left side
  - (D) left to center
8. Trimmings made of strings of silk, cotton, wool, nylon is called ..... . 1
- (A) piping
  - (B) tussels
  - (C) smocking
  - (D) fabric buttons

9. Give another name for continuous bound placket. 1

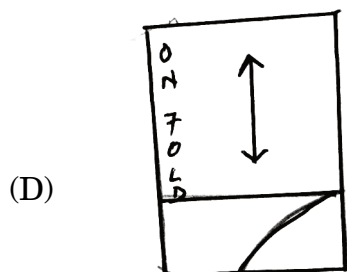
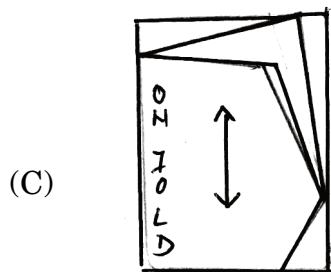
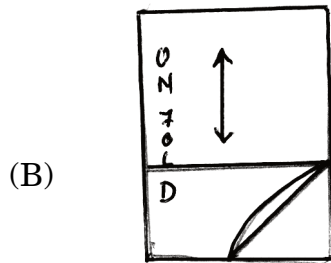
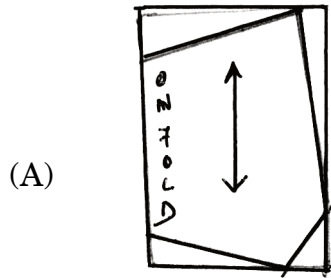
- (A) Two-piece placket
- (B) Tailored placket
- (C) Bound neck placket
- (D) One piece placket

10. Which among the following is a style figure of a panty. 1



11. What is used to prepare fabric loops which can be used decoratively in place of buttonholes ? 1
- (A) Facing
  - (B) Pleats
  - (C) Bias tubing
  - (D) Fasteners
12. Facings are turned to the outside/right side of a garment and stitched for ..... . 1
- (A) straight effect
  - (B) decorative effect
  - (C) cross effect
  - (D) chevron effect
13. The finished openings constructed to make it easy to put and take off a garment is ..... . 1
- (A) gathers
  - (B) pockets
  - (C) hems
  - (D) placket
14. The fancy accessories which are used on garments are called ..... . 1
- (A) trimmings
  - (B) darts
  - (C) seams
  - (D) fasteners

15. Identify the draft of a baby bloomer showing back and front markings. 1



16. The binding used on sheer fabric is ..... . 1
- (A) bias binding
  - (B) bias facing
  - (C) shaped facing
  - (D) French binding
17. Opening is finished in girls' garment so that ..... . 1
- (A) left side overlaps the right side
  - (B) right side overlaps the left side
  - (C) left and right sides meet in the center
  - (D) left and right sides do not meet in the center
18. Which trimmings are used by adults as patches on jeans ? 1
- (A) Brooches
  - (B) Ribbon
  - (C) Appliques
  - (D) Lace
19. What carries the filling thread back and forth through the warp threads during weaving ? 1
- (A) Loom
  - (B) Threader
  - (C) Shuttle
  - (D) Needle
20. A neck opening used in infant's clothing is ..... . 1
- (A) Bound neck opening
  - (B) Bound and faced placket
  - (C) Hooks and eyes
  - (D) Zipper placket

