

PREVIEW QUESTION BANK

Module Name : HOME SCIENCE-ENG
Exam Date : 14-Jul-2023 Batch : 10:00-12:00

Sr. No.	Client Question ID	Question Body and Alternatives	Marks	Negative Marks
Objective Question				
1	2401	<p>The rate of growth of the Indian Agriculture sector in the year 2020-21 was _____ per cent.</p> <ol style="list-style-type: none"> 1. 4.6 2. 3.0 3. 3.6 4. 2.1 <p>A1 : 1</p> <p>A2 : 2</p> <p>A3 : 3</p> <p>A4 : 4</p>	4.0	1.00
Objective Question				
2	2402	<p>Which scheme promotes the creation of post-harvest management infrastructure and community farm assets in India?</p> <ol style="list-style-type: none"> 1. Sub Mission on Agricultural Mechanisation (SMAM) 2. PM KISAN 3. Agriculture Infrastructure Fund 4. Modified Interest Subvention Scheme (MISS) <p>A1 : 1</p> <p>A2 : 2</p> <p>A3 : 3</p> <p>A4 : 4</p>	4.0	1.00
Objective Question				

3	2403	<p>How many seedlings per hill is generally recommended for realizing the yield potential of high-yielding varieties under conventional wet cultivation?</p> <ol style="list-style-type: none"> 1. 2-3 seedlings 2. Single seedlings 3. 4-5 seedlings 4. 2-5 sprouted seeds <p>A1 : 1</p> <p>A2 : 2</p>	4.0	1.00
---	------	---	-----	------

		<p>A3 : 3</p> <p>A4 : 4</p>		
--	--	-----------------------------	--	--

Objective Question

4	2404	<p>What is the optimal average temperature at the time of wheat maturity?</p> <ol style="list-style-type: none"> 1. 20-25°C 2. 16-22 °C 3. 14-15 °C 4. 8-10 °C <p>A1 : 1</p> <p>A2 : 2</p> <p>A3 : 3</p> <p>A4 : 4</p>	4.0	1.00
---	------	--	-----	------

Objective Question

5	2405	<p>Chlorosis along the leaf margins followed by scorching and browning of tips of older leaves, is a symptom of which essential plant nutrient deficiency?</p> <ol style="list-style-type: none"> 1. Nitrogen 2. Phosphorus 3. Potassium 4. Calcium <p>A1 : 1</p> <p>A2 : 2</p> <p>A3 : 3</p> <p>A4 : 4</p>	4.0	1.00
---	------	---	-----	------

Objective Question

6	2406	<p>Which of the following is not a sucking pest?</p> <ol style="list-style-type: none"> 1. Aphids 2. Plant hoppers 3. Thrips 4. White grubs <p>A1 : 1</p> <p>A2 : 2</p> <p>A3 : 3</p> <p>A4 : 4</p>	4.0	1.00
---	------	---	-----	------

Objective Question

7	2407	<p>What are the ideal row-to-row and plant-to-plant spacing in cm for the sowing of chickpea crops?</p> <ol style="list-style-type: none"> 1. 60-75 and 15-20 2. 25-30 and 5-6 3. 30-45 and 5-6 4. 30-45 and 10-15 <p>A1 : 1</p> <p>A2 : 2</p> <p>A3 : 3</p> <p>A4 : 4</p>	4.0	1.00
---	------	--	-----	------

Objective Question

8	2408	<p>Application of which of the following is recommended to take care of pops (unfilled pods) in groundnut?</p> <ol style="list-style-type: none"> 1. Gypsum 2. Borax 3. Copper sulphate 4. Zinc <p>A1 : 1</p> <p>A2 : 2</p> <p>A3 : 3</p> <p>A4 : 4</p>	4.0	1.00
---	------	---	-----	------

Objective Question

9	2409	<p>Which is a causal organism of the powdery mildew of mango?</p> <ol style="list-style-type: none"> 1. <i>Xanthomonas campestris</i> 2. <i>Oidium mangiferae</i> 3. <i>Colletotrichum gloeosporioides</i> 4. <i>Pestalotiopsis mangiferae</i> <p>A1 : 1</p> <p>A2 : 2</p> <p>A3 : 3</p> <p>A4 : 4</p>	4.0	1.00
---	------	--	-----	------

Objective Question

10	2410	<p>According to Mendel's theory of inheritance, traits are always controlled by.....</p> <ol style="list-style-type: none"> 1. A blending of parental 'essences' 2. Single genes 3. Multiple genes 4. Environmental influences <p>A1 : 1</p> <p>A2 : 2</p> <p>A3 : 3</p> <p>A4 : 4</p>	4.0	1.00
----	------	--	-----	------

Objective Question

11	2411	<p>A sprinkler irrigation system is suitable under which conditions?</p> <p>(A). Sandy soils with a high infiltration rate</p> <p>(B). Undulating topography</p> <p>(C). High wind speed</p> <p>(D). Close growing crops</p> <p>Choose the correct answer from the options given below:</p> <ol style="list-style-type: none">1. (A), (B) and (C) only.2. (A), (B) and (D) only.3. (A), (B), (C) and (D).4. (B), (C) and (D) only. <p>A1 : 1</p> <p>A2 : 2</p> <p>A3 : 3</p> <p>A4 : 4</p>	4.0	1.00
----	------	--	-----	------

Objective Question

12	2412		4.0	1.00
----	------	--	-----	------

Which of the following are N₂fixing biofertilizers?

(A). *Rhizobium spp.*

(B). *Mycorrhizae*

(C). *Azospirillum spp.*

(D). *Penicillium bilaii*

Choose the **correct** answer from the options given below:

1. (A) and (D) only.
2. (B) and (D) only.
3. (A) and (C) only
4. (B) and (C) only.

A1 : 1

A2 : 2

A3 : 3

A4 : 4

Objective Question

13 2413

Which of the following is the basis of Integrated pest management?

(A). Reliance on pesticides to control insect-pest

(B). All pest population levels are injurious to crops

(C). Some pest population is required for the survival of natural enemies of pests

(D). Planting crops in such a way as to minimize or prevent pest problems

Choose the **correct** answer from the options given below:

1. (A) and (B) only
2. (B) and (D) only
3. (B) and (C) only
4. (C) and (D) only

A1 : 1

A2 : 2

A3 : 3

A4 : 4

4.0 1.00

Objective Question

14	2414		4.0	1.00
----	------	--	-----	------

Which types of soils are suitable for groundnut cultivation?

(A). Loose friable sandy loam soil well supplied with calcium

(B). Clayey or heavy soils

(C). Alkali soil

(D). Adequate drainage facility

Choose the **correct** answer from the options given below:

1. (A) and (D) only
2. (B) and (D) only
3. (B) and (C) only
4. (A) and (C) only

A1 : 1


A2 : 2

A3 : 3

A4 : 4



Objective Question

15	2415	<p>Which is not included in the process of photosynthesis?</p> <p>(A). Metabolizing (burning) sugars to yield energy for growth, reproduction, and other life processes</p> <p>(B). Loss of water vapor through the stomates of the leaves</p> <p>(C). The plant uses water and nutrients from the soil and carbon dioxide from the air</p> <p>(D). React with the sun's energy to form photosynthates (sugars, starches, carbohydrates, and proteins)</p> <p>(E). Oxygen is released as a byproduct</p> <p>Choose the correct answer from the options given below:</p> <ol style="list-style-type: none"> 1. (A), (B) and (D) only. 2. (A), (B) and (E) only. 3. (B), (C) and (E) only 4. (C), (D) and (E) only. <p>A1 : 1</p> <p>A2 : 2</p> <p>A3 : 3</p> <p>A4 : 4</p>	4.0	1.00
Objective Question				
16	2416		4.0	1.00

Match **List-I** with **List-II**

List-I	List-II
(Programme/Scheme)	(Area/Objective)
(A). MSP	(I). Short-term credit to farmers at subsidized interest rates
(B). Modified Interest Subvention Scheme (MISS)	(II). Natural farming
(C). PKVY	(III). Secure the price at one and half times the all-India weighted average cost of production
(D). BPKP	(IV). Organic farming

Choose the **correct** answer from the options given below:

1. (A) - (I), (B) - (III), (C) - (II), (D) - (IV)
2. (A) - (IV), (B) - (I), (C) - (II), (D) - (III)
3. (A) - (III), (B) - (I), (C) - (IV), (D) - (II)
4. (A) - (III), (B) - (IV), (C) - (I), (D) - (II)

A1 : 1

A2 : 2

A3 : 3

A4 : 4



Objective Question

17 2417

4.0 1.00

Match **List-I** with **List-II**

List-I	List-II
[National Missions under National Action Plan on Climate Change (NAPCC)]	(Achievement Targeted)
(A). National Mission for Enhanced Energy Efficiency	(I). Centers of Excellence for Climate Change
(B). National Mission for Sustainable Agriculture	(II). Energy saving target in terms of Million Tonnes of Oil Equivalent (MTOE)
(C). National Mission on Strategic Knowledge for Climate Change	(III). Afforestation targets
(D). National Mission for a Green India	(IV). Organic farming and micro-irrigation

Choose the **correct** answer from the options given below:

1. (A) - (I), (B) - (III), (C) - (II), (D) - (IV)
2. (A) - (II), (B) - (IV), (C) - (I), (D) - (III)
3. (A) - (II), (B) - (I), (C) - (IV), (D) - (III)
4. (A) - (III), (B) - (IV), (C) - (I), (D) - (II)

A1 : 1

A2 : 2

A3 : 3

A4 : 4



Objective Question

18	2418	<p>Given below are two statements:</p> <p>Statement (I): A deficiency of an essential nutrient makes it impossible for the plant to complete the vegetative or reproductive stages of its life cycle.</p> <p>Statement (II): Such deficiency is specific to the element in question and can be prevented or corrected only by supplying this element.</p> <p>In light of the above statements, choose the <i>most appropriate</i> answer from the options given below.</p> <ol style="list-style-type: none"> 1. Both Statement (I) and Statement (II) are correct. 2. Both Statement (I) and Statement (II) are incorrect. 3. Statement (I) is correct but Statement (II) is incorrect. 4. Statement (I) is incorrect but Statement (II) is correct. <p>A1 : 1</p> <p>A2 : 2</p> <p>A3 : 3</p> <p>A4 : 4</p>	4.0	1.00
Objective Question				
19	2419	<p>Given below are two statements:</p> <p>Statement (I): Immobilization of enzymes is one technique to make the use of enzymes cost-effectively.</p> <p>Statement (II): The recovery of enzymes after enzyme immobilization is very difficult.</p> <p>In light of the above statements, choose the <i>most appropriate</i> answer from the options given below.</p> <ol style="list-style-type: none"> 1. Both Statement (I) and Statement (II) are correct. 2. Both Statement (I) and Statement (II) are incorrect. 3. Statement (I) is correct but Statement (II) is incorrect. 4. Statement (I) is incorrect but Statement (II) is correct. <p>A1 : 1</p> <p>A2 : 2</p> <p>A3 : 3</p> <p>A4 : 4</p>	4.0	1.00
Objective Question				
20	2420		4.0	1.00

Arrange the States based on their contribution (highest to lowest) in total food grains production of India in the year 2020-21.

- (A). Punjab
- (B). Uttar Pradesh
- (C). Rajasthan
- (D). Madhya Pradesh

Choose the **correct** answer from the options given below:

- 1. (A), (B), (C), (D).
- 2. (D), (C), (A), (B)
- 3. (B), (A), (D), (C)
- 4. (B), (D), (A), (C).

A1 : 1

A2 : 2

A3 : 3

A4 : 4

Objective Question

21 2421

The recommended estimated energy requirement (EER) for the sedentary elderly woman weighing 55kg is _____ Kcal.

- 1. 1700
- 2. 1660
- 3. 1500
- 4. 1350

A1 : 1

A2 : 2

A3 : 3

A4 : 4

4.0 1.00

Objective Question

22	2422	<p>The process involving reversal of a dispersed amorphous state of starch to an insoluble aggregated or crystalline condition is called _____ .</p> <ol style="list-style-type: none"> 1. Gelatinization 2. Retrogradation 3. Syneresis 4. Dextrinization 	4.0	1.00
----	------	--	-----	------

A1 : 1

A2 : 2

A3 : 3

A4 : 4

Objective Question

23	2423	<p>The bitter flavour of the tea is due to the presence of _____ .</p> <ol style="list-style-type: none"> 1. Caffeine 2. Theine 3. Tannin 4. Flavour compounds 	4.0	1.00
----	------	--	-----	------

A1 : 1

A2 : 2

A3 : 3

A4 : 4

Objective Question

24	2424	<p>_____ is a certification mark used to ensure the quality of agricultural products in India.</p> <ol style="list-style-type: none"> 1. AGMARK 2. ISI Mark 3. FPO 4. Eco Mark <p>A1 : 1</p> <p>A2 : 2</p> <p>A3 : 3</p> <p>A4 : 4</p>	4.0	1.00
----	------	--	-----	------

Objective Question

25	2425	<p>Which of the following would you include in the diet of a patient recommended a full liquid diet?</p> <ol style="list-style-type: none"> 1. Coconut water 2. Tea/Coffee 3. Strained fruit juices 4. Milk and milk beverages <p>A1 : 1</p> <p>A2 : 2</p> <p>A3 : 3</p> <p>A4 : 4</p>	4.0	1.00
----	------	--	-----	------

Objective Question				
--------------------	--	--	--	--

26	2426	<p>Which of the following is a qualitative dietary assessment method used at family or individual level?</p> <ol style="list-style-type: none"> 1. Food record 2. 24 hour recall 3. Diet history 4. Food frequency questionnaire <p>A1 : 1</p> <p>A2 : 2</p> <p>A3 : 3</p> <p>A4 : 4</p>	4.0	1.00
----	------	--	-----	------

Objective Question

27	2427	<p>With regards to the recommended dietary allowances for folate, an additional requirement of ___ microgram/day is recommended during pregnancy.</p> <ol style="list-style-type: none"> 1. 300 2. 220 3. 100 4. 50 <p>A1 : 1</p> <p>A2 : 2</p> <p>A3 : 3</p> <p>A4 : 4</p>	4.0	1.00
----	------	---	-----	------

Objective Question

28	2428	<p>Which of the following is an effective sanitizing agent recommended for use in a food service establishment?</p> <ol style="list-style-type: none"> 1. Iodophores 2. Quaternary ammonium compounds (QUATS) 3. Alkalines 4. Soaps <p>A1 : 1</p> <p>A2 : 2</p> <p>A3 : 3</p> <p>A4 : 4</p>	4.0	1.00
----	------	---	-----	------

Objective Question

29	2429	<p>For a moderately active underweight adult man, you would recommend ____Kcal/kg ideal body weight /day.</p> <ol style="list-style-type: none"> 1. 50 2. 45 3. 40 4. 35 <p>A1 : 1</p> <p>A2 : 2</p> <p>A3 : 3</p> <p>A4 : 4</p>	4.0	1.00
----	------	--	-----	------

Objective Question

30	2430	<p>Which of the following is a benefit related to genetically modified (GM) foods?</p> <ol style="list-style-type: none"> 1. Allergenicity 2. Loss of biodiversity 3. Movement of gene from GM to conventional crop 4. Quality crop production <p>A1 : 1</p> <p>A2 : 2</p> <p>A3 : 3</p> <p>A4 : 4</p>	4.0	1.00
----	------	--	-----	------

Objective Question

31	2431	<p>Match List-I with List-II</p> <table border="1"> <thead> <tr> <th>List-I (Programmes)</th> <th>List-II (Examples)</th> </tr> </thead> <tbody> <tr> <td>(A). Food security programme</td> <td>(I). National prophylaxis programme for prevention of blindness</td> </tr> <tr> <td>(B). Nutrient deficiency control programme</td> <td>(II). Pradhan mantri matru vandanayojana (PMMVY)</td> </tr> <tr> <td>(C). Nutrition support to primary education</td> <td>(III). TPDS</td> </tr> <tr> <td>(D). Centrally sponsored scheme with cash incentive</td> <td>(IV). ICDS</td> </tr> <tr> <td></td> <td>(V). Mid day meal programme (MDM)</td> </tr> </tbody> </table> <p>Choose the correct answer from the options given below:</p> <ol style="list-style-type: none"> 1. (A) - (IV), (B) - (III), (C) - (I), (D) - (V) 2. (A) - (III), (B) - (I), (C) - (V), (D) - (II) 3. (A) - (I), (B) - (II), (C) - (IV), (D) - (III) 4. (A) - (V), (B) - (IV), (C) - (I), (D) - (II) <p>A1 : 1</p>	List-I (Programmes)	List-II (Examples)	(A). Food security programme	(I). National prophylaxis programme for prevention of blindness	(B). Nutrient deficiency control programme	(II). Pradhan mantri matru vandanayojana (PMMVY)	(C). Nutrition support to primary education	(III). TPDS	(D). Centrally sponsored scheme with cash incentive	(IV). ICDS		(V). Mid day meal programme (MDM)	4.0	1.00
List-I (Programmes)	List-II (Examples)															
(A). Food security programme	(I). National prophylaxis programme for prevention of blindness															
(B). Nutrient deficiency control programme	(II). Pradhan mantri matru vandanayojana (PMMVY)															
(C). Nutrition support to primary education	(III). TPDS															
(D). Centrally sponsored scheme with cash incentive	(IV). ICDS															
	(V). Mid day meal programme (MDM)															

A2 : 2

A3 : 3

A4 : 4

Objective Question

32	2432	<p>Match List-I with List-II</p> <table border="1"> <thead> <tr> <th>List-I (Function performed by food proteins)</th> <th>List-II (Uses in food industry)</th> </tr> </thead> <tbody> <tr> <td>(A).Texturization</td> <td>(I). Cottage cheese based sweet meat preparartions such as rasgulla</td> </tr> <tr> <td>(B).Coagulation</td> <td>(II). Sponge cake</td> </tr> <tr> <td>(C). Emulsification</td> <td>(III). Soya granules</td> </tr> <tr> <td>(D). Leavening</td> <td>(IV). Salad dressing</td> </tr> <tr> <td></td> <td>(V). Meat analogues containing plant proteins</td> </tr> </tbody> </table> <p>Choose the correct answer from the options given below:</p> <ol style="list-style-type: none"> (A) - (IV), (B) - (III), (C) - (V), (D) - (I) (A) - (II), (B) - (IV), (C) - (I), (D) - (V) (A) - (IV), (B) - (V), (C) - (II), (D) - (III) (A) - (III), (B) - (I), (C) - (IV), (D) - (II) <p>A1 : 1</p> <p>A2 : 2</p> <p>A3 : 3</p> <p>A4 : 4</p>	List-I (Function performed by food proteins)	List-II (Uses in food industry)	(A).Texturization	(I). Cottage cheese based sweet meat preparartions such as rasgulla	(B).Coagulation	(II). Sponge cake	(C). Emulsification	(III). Soya granules	(D). Leavening	(IV). Salad dressing		(V). Meat analogues containing plant proteins	4.0	1.00
List-I (Function performed by food proteins)	List-II (Uses in food industry)															
(A).Texturization	(I). Cottage cheese based sweet meat preparartions such as rasgulla															
(B).Coagulation	(II). Sponge cake															
(C). Emulsification	(III). Soya granules															
(D). Leavening	(IV). Salad dressing															
	(V). Meat analogues containing plant proteins															

Objective Question

33	2433	<p>Vitamin C rich foods are good for health because they;</p> <p>(A). promote resistance against infection</p> <p>(B). help in growth of body</p> <p>(C). prevents bleeding of gums</p> <p>(D). protects eyes against blindness</p> <p>(E). helps in speedy recovery of wounds.</p> <p>Choose the correct answer from the options given below:</p> <ol style="list-style-type: none"> (A), (C) and (E) only. (A), (B) and (D) only. (C), (D) and (E) only. (B), (C) and (D) only. <p>A1 : 1</p>	4.0	1.00
----	------	--	-----	------

A2 : 2

A3 : 3

A4 : 4

Objective Question

34 2434

4.0 1.00

Which of the following are rich sources of saturated fatty acids?

(A). Sunflower oil

(B). Coconut oil

(C). Vanaspati

(D). Red palm oil

(E). Butter

Choose the **correct** answer from the options given below:

1. (A), (B) and (D) only.
2. (B), (C) and (E) only.
3. (C), (D) and (E) only.
4. (A), (C) and (E) only.

A1 : 1

A2 : 2

A3 : 3

A4 : 4



Objective Question

35	2435	<p>Spices are important in the diet because they:</p> <p>(A). aid in digestion</p> <p>(B). decrease the cooking time</p> <p>(C). make food attractive</p> <p>(D). are appetite stimulating</p> <p>(E). provide minerals and B-complex vitamins</p> <p>Choose the correct answer from the options given below:</p> <p>1. (A), (B) and (C) only.</p> <p>2. (B), (C) and (D) only.</p> <p>3. (C), (D) and (E) only.</p> <p>4. (A), (C) and (D) only.</p> <p>A1 : 1</p> <p>A2 : 2</p> <p>A3 : 3</p> <p>A4 : 4</p>	4.0	1.00
Objective Question				



36	2436	<p>Which of the following foods would you recommend in the diet of a patient suffering from gout?</p> <p>(A). Milk and milk products</p> <p>(B). Refined cereals</p> <p>(C). Organ meat</p> <p>(D). Green leafy vegetables</p> <p>(E). Beans, peas</p> <p>Choose the correct answer from the options given below:</p> <ol style="list-style-type: none"> (A), (B) and (D) only. (B), (C) and (D) only. (C), (D) and (E) only. (A), (D) and (E) only. <p>A1 : 1</p> <p>A2 : 2</p> <p>A3 : 3</p> <p>A4 : 4</p>	4.0	1.00
----	------	---	-----	------

Objective Question

37	2437	<p>Which of the following are specific components of good manufacturing practices to be followed in a foodservice establishment?</p> <p>(A). Conduct hazard analysis</p> <p>(B). Exchange information and opinion on risk management.</p> <p>(C). Ensure safety of staff and consumers</p> <p>(D). Performing quality control checks before, during and after manufacture</p> <p>(E). Supervising and executing effective cleaning operations.</p> <p>Choose the correct answer from the options given below:</p> <ol style="list-style-type: none"> (A), (B) and (D) only. (B), (C) and (D) only. (A), (C) and (E) only. (C), (D) and (E) only. <p>A1 : 1</p> <p>A2 : 2</p> <p>A3 : 3</p>	4.0	1.00
----	------	---	-----	------

A4 : 4

Objective Question

38	2438	<p>Given below are two statements, one is labelled as Assertion (A) and other one labelled as Reason (R). Assertion (A) : Energy requirement for infants are expressed as per kg body weight.</p> <p>Reason (R) : Growth is a sensitive indicator of whether an infant energy requirements are satisfied.</p> <p>In light of the above statements, choose the <i>correct</i> answer from the options given below.</p> <ol style="list-style-type: none">1. Both (A) and (R) are true and (R) is the correct explanation of (A).2. Both (A) and (R) are true but (R) is NOT the correct explanation of (A).3. (A) is true but (R) is false.4. (A) is false but (R) is true. <p>A1 : 1</p> <p>A2 : 2</p> <p>A3 : 3</p> <p>A4 : 4</p>	4.0	1.00
----	------	---	-----	------

Objective Question

39	2439	<p>Given below are two statements, one is labelled as Assertion (A) and other one labelled as Reason (R). Assertion (A) : Duration and severity of diarrhoea can be reduced by zinc supplementation in children.</p> <p>Reason (R) : Zinc allows limitation of the use of antibacterial and antimicrobials.</p> <p>In light of the above statements, choose the <i>correct</i> answer from the options given below.</p> <ol style="list-style-type: none">1. Both (A) and (R) are true and (R) is the correct explanation of (A).2. Both (A) and (R) are true but (R) is NOT the correct explanation of (A).3. (A) is true but (R) is false.4. (A) is false but (R) is true. <p>A1 : 1</p> <p>A2 : 2</p> <p>A3 : 3</p> <p>A4 : 4</p>	4.0	1.00
----	------	---	-----	------

Objective Question

Given is a group of individuals. Based on current recommendations for Niacin (RDA) arrange them in the order of lowest requirements to highest requirements.

(A). Man moderate work

(B). Boys 16-18 years

(C). Girl 13-15 years

(D). Girl 10-12 years

(E). Boy 7-9 years

Choose the **correct** answer from the options given below:

1. (C), (E), (B), (A), (D).
2. (D), (B), (E), (C), (A)
3. (B), (A), (D), (C), (E)..
4. (E), (D), (C), (A), (B).

A1 : 1

A2 : 2

A3 : 3

A4 : 4

41	2441	<p>What is the process of fitting new experiences into existing mental categories called?</p> <ol style="list-style-type: none"> 1. Accommodation 2. Assimilation 3. Adaptation 4. Attachment <p>A1 : 1</p> <p>A2 : 2</p> <p>A3 : 3</p> <p>A4 : 4</p>	4.0	1.00
----	------	---	-----	------

Objective Question

42	2442	<p>Which theorist emphasized the importance of social and cultural factors in development?</p> <ol style="list-style-type: none"> 1. Erik Erikson 2. Jean Piaget 3. Lawrence Kohlberg 4. Lev Vygotsky <p>A1 : 1</p> <p>A2 : 2</p> <p>A3 : 3</p> <p>A4 : 4</p>	4.0	1.00
----	------	---	-----	------

Objective Question

43	2443	<p>What stage of cognitive development occurs between the ages of 7 years and 12 years according to Piaget's theory?</p> <ol style="list-style-type: none"> 1. Sensory motor 2. Preoperational 3. Concrete operational 4. Formal operational <p>A1 : 1</p> <p>A2 : 2</p> <p>A3 : 3</p> <p>A4 : 4</p>	4.0	1.00
----	------	--	-----	------

Objective Question

44	2444	<p>What is the term for the understanding that things continue to exist even when they are not visible?</p> <ol style="list-style-type: none"> 1. Object permanence 2. Conservation 3. Egocentrism 4. Centration <p>A1 : 1</p> <p>A2 : 2</p> <p>A3 : 3</p> <p>A4 : 4</p> 	4.0	1.00
----	------	--	-----	------

Objective Question

45	2445	<p>According to Gardner's multiple intelligences theory, how many different types of intelligence are there?</p> <ol style="list-style-type: none"> 1. 3 2. 6 3. 8 4. 12 <p>A1 : 1</p> <p>A2 : 2</p> <p>A3 : 3</p>	4.0	1.00
----	------	--	-----	------

--	--	--	--	--

A4 : 4

Objective Question

46	2446	<p>According to Ginzberg's stage theory (1972), what is the fantasy period?</p> <ol style="list-style-type: none"> 1. A stage in early adulthood where individuals explore different career options 2. A stage in adolescence where individuals develop unrealistic career aspirations 3. A stage in middle adulthood where individuals experience disillusionment with their chosen career 4. A stage in late adulthood where individuals reflect on their career achievements 	4.0	1.00
		<p>A1 : 1</p> <p>A2 : 2</p> <p>A3 : 3</p> <p>A4 : 4</p>		

Objective Question

47	2447	<p>Which family welfare program in India aims to improve the health status of rural and underserved populations by providing them with basic healthcare services?</p> <ol style="list-style-type: none"> 1. National Family Planning Program 2. Reproductive and Child Health Program 3. National Rural Health Mission 4. Janani Suraksha Yojana <p>A1 : 1</p> <p>A2 : 2</p> <p>A3 : 3</p> <p>A4 : 4</p>	4.0	1.00
----	------	--	-----	------

Objective Question

48	2448	<p>Research has suggested that brain lateralization:</p> <ol style="list-style-type: none"> 1. Is fully developed at birth 2. Develops gradually over the course of childhood 3. Develops rapidly during adolescence 4. Does not develop until adulthood <p>A1 : 1</p> <p>A2 : 2</p> <p>A3 : 3</p> <p>A4 : 4</p>	4.0	1.00
----	------	--	-----	------

Objective Question

49	2449	<p>Which of the following is an example of an object control skill, according to Seefeldt and Haubenstricker (1982)?</p> <ol style="list-style-type: none"> 1. Running 2. Jumping 3. Throwing 4. Hopping <p>A1 : 1</p> <p>A2 : 2</p> <p>A3 : 3</p> <p>A4 : 4</p>	4.0	1.00
----	------	--	-----	------

Objective Question

50	2450	<p>Which of the following is NOT a characteristic of a healthy family system, according to Kantor and Lehr (1975)?</p> <ol style="list-style-type: none"> 1. Clear boundaries between family members 2. The ability to adapt to changes in the family environment 3. Consistent use of discipline and punishment 4. Effective communication among family members <p>A1 : 1</p> <p>A2 : 2</p> <p>A3 : 3</p> <p>A4 : 4</p>	4.0	1.00
----	------	--	-----	------

Objective Question

51	2451	<p>Which of the following are part of Vygotsky's Theory of Sociocultural Cognitive Development?</p> <p>(A). Zone of Proximal Development Stages</p> <p>(B). Scaffolding</p> <p>(C). Operant conditioning</p> <p>(D). Inner speech</p> <p>(E). Classical conditioning</p> <p>Choose the correct answer from the options given below:</p> <ol style="list-style-type: none">1. (A), (B) and (C) only.2. (A), (B) and (D) only.3. (A), (B), (C), (D) and (E).4. (A), (B) and (D) only. <p>A1 : 1</p> <p>A2 : 2</p> <p>A3 : 3</p> <p>A4 : 4</p>	4.0	1.00
Objective Question				



52	2452	<p>Which of the following statements are true regarding family and marriage in India.</p> <p>(A).The Hindu Marriage Act of 1955 legalized monogamy in India and prohibited polygamy for Hindus, Sikhs, Buddhists, and Jains.</p> <p>(B). In India, divorce is only allowed in cases of mutual consent.</p> <p>(C).In India, the legal age for marriage is different for both men and women.</p> <p>(D).The trend in India is towards nuclear families due to several factors, including urbanization and increasing individualism.</p> <p>Choose the correct answer from the options given below:</p> <ol style="list-style-type: none"> 1. (A), (B) and (C) only. 2. (A), (B) and (D) only. 3. (A), (B), (C),and (D). 4. (A), (C) and (D) only. <p>A1 : 1</p> <p>A2 : 2</p> <p>A3 : 3</p> <p>A4 : 4</p>	4.0	1.00
----	------	---	-----	------

Objective Question

53	2453	<p>Which of the following measurements are related to Stanford-Binet Intelligence Scale for children?</p> <p>(A). Fluid reasoning</p> <p>(B). Knowledge</p> <p>(C).Quantitative reasoning</p> <p>(D).Working memory</p> <p>(E). Emotional intelligence</p> <p>Choose the correct answer from the options given below:</p> <ol style="list-style-type: none"> 1. (A), (B) and (C) only. 2. (A), (B), (C) and (D) only. 3. (A), (B), (C) and (E) only. 4. (A), (C) and (E) only. <p>A1 : 1</p> <p>A2 : 2</p> <p>A3 : 3</p>	4.0	1.00
----	------	---	-----	------

A4 : 4

Objective Question

54 2454

4.0 1.00

Which of the following statements about Kohlberg's theory of moral development is true?

(A). Kohlberg identified three levels of moral reasoning; preconventional, conventional, and postconventional.

(B). Kohlberg believed that individuals progress through the stages of moral development at different rates and reach the highest stage.

(C). Postconventional morality is the third stage of moral development and is characterized by an individual's understanding of universal ethical principles.

(D). Kohlberg's theory emphasizes the role of social experiences and reasoning in shaping moral development.

Choose the **correct** answer from the options given below:

1. (A), (B) and (C) only.
2. (A), (B) and (D) only.
3. (A), (B), (C) and (D).
4. (A), (C) and (D) only.

A1 : 1

A2 : 2

A3 : 3

A4 : 4



Objective Question

55	2455	<p>Which of the following activities would you organize to foster gross motor development?</p> <p>(A).Climbing</p> <p>(B).Coloring</p> <p>(C).Running</p> <p>(D).Skipping</p> <p>(E) Paper folding</p> <p>Choose the correct answer from the options given below:</p> <ol style="list-style-type: none">1. (A), (B) and (D) only.2. (A), (B) and (E) only.3. (A), (B),and (C).4. (A), (C) and (D) only. <p>A1 : 1</p> <p>A2 : 2</p> <p>A3 : 3</p> <p>A4 : 4</p>	4.0	1.00
Objective Question				



Match **List-I** with **List-II**

List-I	List-II
(Attachment)	(Corresponding Behavior)
(A).Secure attachment	(I). Disoriented
(B).Avoidant attachment	(II). Distress when caregiver leaves but happy upon return
(C).Resistant attachment	(III). No preference for caregiver over stranger
(D).Disorganized-disoriented attachment	(IV).Anger at caregiver upon return

Choose the **correct** answer from the options given below:

1. (A) - (II), (B) - (I), (C) - (III), (D) - (IV)
2. (A) - (III), (B) - (II), (C) - (I), (D) - (IV)
3. (A) - (II), (B) - (III), (C) - (I), (D) - (IV)
4. (A) - (II), (B) - (IV), (C) - (I), (D) - (III)

A1 : 1

A2 : 2

A3 : 3

A4 : 4

57 2457

4.0 1.00

Match **List-I** with **List-II**

List-I	List-II
(Language properties)	(Meaning)
(A).Phonology	(I). Two-word combinations
(B).Semantics	(II).Meaning of language
(C).Telegraphic	(III).Combination of consonants and vowels to produce sound unintended
(D).Babbling	(IV).The sound structure

Choose the **correct** answer from the options given below:

1. (A) - (II), (B) - (I), (C) - (III), (D) - (IV)
2. (A) - (III), (B) - (II), (C) - (I), (D) - (IV)
3. (A) - (II), (B) - (III), (C) - (I), (D) - (IV)
4. (A) - (IV), (B) - (II), (C) - (I), (D) - (III)

A1 : 1

A2 : 2

A3 : 3

A4 : 4



Objective Question

58 2458

4.0 1.00

Given below are two statements, one is labelled as Assertion (A) and other one labelled as Reason (R).
Assertion (A) :Development is a continuous and gradual process.

Reason (R) :Changes in development occur gradually and build on earlier learning.

In light of the above statements, choose the *correct* answer from the options given below.

1. Both (A) and (R) are true and (R) is the correct explanation of (A).
2. Both (A) and (R) are true but (R) is NOT the correct explanation of (A).
3. (A) is true but (R) is false.
4. (A) is false but (R) is true.

A1 : 1

A2 : 2

A3 : 3

A4 : 4

Objective Question

59 2459

4.0 1.00

Given below are two statements, one is labelled as Assertion (A) and other one labelled as Reason (R).

Assertion (A) :The naturalistic observation method is a valuable tool in child study.

Reason (R) : This method allows researchers to manipulate one variable and measure its effect on another, enabling them to draw conclusions about the causal relationships between variables.

In light of the above statements, choose the *correct* answer from the options given below.

1. Both (A) and (R) are true and (R) is the correct explanation of (A).
2. Both (A) and (R) are true but (R) is NOT the correct explanation of (A).
3. (A) is true but (R) is false.
4. (A) is false but (R) is true.

A1 : 1

A2 : 2

A3 : 3

A4 : 4

Objective Question

60 2460

4.0 1.00



Arrange the following in the correct sequence of prenatal stages of development

(A). Conception

(B). Embryo

(C). Fetus

(D). Zygote

Choose the **correct** answer from the options given below:

1. (A), (B), (D), (C).
2. (B), (A), (D), (C).
3. (A), (D), (B), (C).
4. (A), (C), (B), (D).

A1 : 1

A2 : 2

A3 : 3

A4 : 4

Objective Question

61 2461

Students of Resource Management are shown a representative model of a house in their housing practicals. In the language of Edgar Dale, this would be termed as

1. Demonstration
2. Direct Purposeful Experience
3. Dramatised Experience
4. Contrived Experience

A1 : 1

A2 : 2

A3 : 3

A4 : 4

4.0 1.00

Objective Question

62	2462	<p>Which of the following is a management process that is concerned with making events conform to plans ?</p> <ol style="list-style-type: none"> 1. Planning the Management Process 2. Evaluating the Plan in Action 3. Controlling the Plan in Action 4. Forecasting the Results <p>A1 : 1</p> <p>A2 : 2</p> <p>A3 : 3</p> <p>A4 : 4</p>	4.0	1.00
----	------	---	-----	------

Objective Question

63	2463	<p>Which of the following is NOT Fayol's principle of management?</p> <ol style="list-style-type: none"> 1. Unity of Command 2. Scalar Chain 3. Unity of Interests 4. Equity of Interest <p>A1 : 1</p> <p>A2 : 2</p> <p>A3 : 3</p> <p>A4 : 4</p>	4.0	1.00
----	------	--	-----	------

Objective Question

64	2464	<p>Tarnish from copper utensils can be removed by using</p> <ol style="list-style-type: none"> 1. Methylated spirit 2. Vinegar and salt 3. White powder 4. Acetone <p>A1 : 1</p> <p>A2 : 2</p> <p>A3 : 3</p> <p>A4 : 4</p>	4.0	1.00
----	------	--	-----	------

Objective Question

65	2465	<p>The Structural-functional theory of family views individuals as:</p> <ol style="list-style-type: none"> 1. Members of many interrelated systems, one of which is family 2. Members of the same race 3. Members of a family 4. Members of the same geographical origin <p>A1 : 1</p> <p>A2 : 2</p> <p>A3 : 3</p> <p>A4 : 4</p>	4.0	1.00
----	------	--	-----	------

Objective Question				
--------------------	--	--	--	--

66	2466	<p>When it comes to work surface heights, most work should be done:</p> <ol style="list-style-type: none">1. at height of shoulders2. above elbow height3. at elbow height4. at eye level <p>A1 : 1</p> <p>A2 : 2</p> <p>A3 : 3</p> <p>A4 : 4</p>	4.0	1.00
----	------	--	-----	------

Objective Question

67	2467	<p>Which of the following is the founder of micro-motion film study ?</p> <ol style="list-style-type: none">1. Gilbreth2. Mundel3. Gross and Crandal4. Heiner and McCullough <p>A1 : 1</p> <p>A2 : 2</p> <p>A3 : 3</p> <p>A4 : 4</p>	4.0	1.00
----	------	---	-----	------

Objective Question

68	2468	<p>Under Section 2(47) of the Consumer Protection Act, 2019 that defines the term 'unfair trade practices,' which one of the following points is NOT included ?</p> <ol style="list-style-type: none"> 1. Manufacturing spurious goods or providing defective services 2. Not issuing cash memos or bills for the goods purchased or services rendered 3. Refusing to take back or withdraw the goods or services and not refunding the consideration taken for the purchase of the goods or services 4. Not disclosing the personal information of the consumer <p>A1 : 1</p> <p>A2 : 2</p> <p>A3 : 3</p> <p>A4 : 4</p>	4.0	1.00
----	------	--	-----	------

Objective Question



69	2469	<p>In Reinforced Cement Concrete (RCC), which of the following are combined to act together as one material?</p> <ol style="list-style-type: none"> 1. Concrete and sand 2. Concrete and steel 3. Cement and sand 4. Cement and Aluminium Sulphate <p>A1 : 1</p> <p>A2 : 2</p> <p>A3 : 3</p> <p>A4 : 4</p>	4.0	1.00
----	------	--	-----	------

Objective Question

70	2470	<p>Orange, yellow and green form which of the following colour scheme ?</p> <ol style="list-style-type: none"> 1. Monochromatic colour scheme 2. Analogous colour scheme 3. Complementary colour scheme 4. Primary colour scheme <p>A1 : 1</p> <p>A2 : 2</p> <p>A3 : 3</p> <p>A4 : 4</p>	4.0	1.00
----	------	--	-----	------

Objective Question

71	2471	<p>'Balance' of openings desired in an interior wall may conflict with location desired on the exterior of the house. In a compromise between them which of the following statements you would consider?</p> <ol style="list-style-type: none"> A. It is important to use draperies and curtains together B. Use fabric covers to conceal the open walls proportionately C. Usually the exterior balance is considered more necessary D. Simultaneously interiors can also be balanced by the location of furniture <p>Choose the correct answer from the options given below.</p> <ol style="list-style-type: none"> 1. A and B only 2. A and C only 3. B and C only 4. C and D only <p>A1 : 1</p> <p>A2 : 2</p> <p>A3 : 3</p> <p>A4 : 4</p>	4.0	1.00
----	------	--	-----	------

Objective Question

72	2472	<p>From the following, which are the non-budgetary methods of evaluation?</p> <p>A. Summary reports</p> <p>B. Profit and loss account</p> <p>C. Personal observations</p> <p>D. Checklists</p> <p>Choose the correct answer from the options given below:</p> <p>1. A, B and D only.</p> <p>2. A, B and C only.</p> <p>3. A, C and D only.</p> <p>4. B, C and D only.</p> <p>A1 : 1</p> <p>A2 : 2</p> <p>A3 : 3</p> <p>A4 : 4</p>	4.0	1.00
----	------	--	-----	------

Objective Question

73	2473	<p>Which of the following measures are fit for a person on wheelchair?</p> <p>A. Wide walkways in hallway or doorway</p> <p>B. Non-slip flooring</p> <p>C. Space around sofas, beds and tables to move with ease</p> <p>D. High heights for light switches, door handles and emergency buttons</p> <p>Choose the correct answer from the options given below:</p> <p>1. A, B and D only.</p> <p>2. A, C and D only.</p> <p>3. B, C and D only.</p> <p>4. A, B and C only.</p> <p>A1 : 1</p> <p>A2 : 2</p> <p>A3 : 3</p> <p>A4 : 4</p>	4.0	1.00
----	------	--	-----	------

Objective Question

74	2474	<p>Which of the following is Direct Income or Non-money Income?</p> <p>A. Use of community facilities</p> <p>B. Services of servant maid</p> <p>C. Use of cash</p> <p>D. Use of self-owned car</p> <p>Choose the correct answer from the options given below:</p> <p>1. A, B and C only.</p> <p>2. A, B and D only.</p> <p>3. A, C and D only.</p> <p>4. B, C and D only.</p> <p>A1 : 1</p> <p>A2 : 2</p> <p>A3 : 3</p> <p>A4 : 4</p>	4.0	1.00
----	------	--	-----	------

Objective Question

75	2475	<p>Amongst the following, which aspects are true about indirect lighting?</p> <p>A. Uplighting directs the light upwards, towards the ceiling</p> <p>B. Light is directed to another surface from where it is reflected back into the room</p> <p>C. Because this is a straight forward radiation, it acts as task lighting that functions to help daily tasks</p> <p>D. The ceiling acts as the lighting source and glare is reduced to a minimum</p> <p>Choose the correct answer from the options given below:</p> <p>1. A, C and D only.</p> <p>2. B, C and D only.</p> <p>3. A, B, and D only.</p> <p>4. A, B, and C only.</p> <p>A1 : 1</p> <p>A2 : 2</p> <p>A3 : 3</p>	4.0	1.00
----	------	--	-----	------

A4 : 4

Objective Question

76 2476

4.0 1.00



Match **List-I** with **List-II**

List-I	List-II
(Colour scheme)	(Description)
A. Monochromatic Colour Scheme	I. Combines colours that are adjacent to one another in the colour wheel
B. Complementary Colour Scheme	II. Three equidistant colours forming equilateral triangle on the Prang colour wheel
C. Analogous Colour Scheme	III. One hue, different values
D. Triad Colour Scheme	IV. Opposite to each other in the colour wheel

Choose the **correct** answer from the options given below:

1. A –IV, B-I, C-II, D-III
2. A –II, B-III, C-I, D-IV
3. A –III, B-IV, C-I, D-II
4. A –II, B-I, C-IV, D-III

A1 : 1

A2 : 2

A3 : 3

A4 : 4



Objective Question

77 2477

4.0 1.00

Match **List-I** with **List-II**

List-I	List-II
(Terms used in family budget)	(Description)
A. Life Insurance	I. Expenditure exceeds the income
B. Deficit Budget	II. Putting surplus funds in some productive activity
C. Compulsory Savings	III. A kind of protection against financial losses
D. Investment	IV. The Provident Fund

Choose the **correct** answer from the options given below:

1. A –IV, B-III, C-II, D-I
2. A –III, B-I, C-IV, D-II
3. A –II, B-III, C-I, D-IV
4. A –III, B-II, C-I, D-IV

A1 : 1

A2 : 2

A3 : 3

A4 : 4



Objective Question

78	2478	<p>Given below are two statements, one is labelled as Assertion (A) and other one labelled as Reason (R).</p> <p>Assertion (A) : Cool shades make smaller rooms seem visually larger, and sunny and warm shades make the rooms cooler, calmer and more pleasant.</p> <p>Reason (R) : Cool shades along with warm shades are used in every room of offices.</p> <p>In light of the above statements, choose the <i>most appropriate</i> answer from the options given below .</p> <ol style="list-style-type: none"> 1. Both (A) and (R) are correct and (R) is the correct explanation of (A). 2. Both (A) and (R) are correct but (R) is NOT the correct explanation of (A). 3. (A) is correct but (R) is not correct. 4. (A) is not correct but (R) is correct. <p>A1 : 1</p> <p>A2 : 2</p> <p>A3 : 3</p> <p>A4 : 4</p>	4.0	1.00
----	------	---	-----	------

Objective Question

79	2479	<p>Given below are two statements:</p> <p>Statement (I): In Maslow's Hierarchy of Needs, Physiological Needs are to be met for satisfying human life like food, water, clothing, shelter, sleep and sexual satisfaction.</p> <p>Statement (II): After Physiological Needs are met, people are motivated to satisfy their highest need, i.e. need for Self-actualisation.</p> <p>In light of the above statements, choose the <i>most appropriate</i> answer from the options given below.</p> <ol style="list-style-type: none"> 1. Both Statement (I) and Statement (II) are true. 2. Both Statement (I) and Statement (II) are false. 3. Statement (I) is true but Statement (II) is false. 4. Statement (I) is false but Statement (II) is true. <p>A1 : 1</p> <p>A2 : 2</p> <p>A3 : 3</p> <p>A4 : 4</p>	4.0	1.00
----	------	---	-----	------

Objective Question

80	2480		4.0	1.00
----	------	--	-----	------

Given are the steps or phases in the mental process of decision-making. Arrange them in the correct sequence.

- A. Selecting the course of action that seems the best
- B. Obtaining information and formulating possible courses of action
- C. Considering the consequences of each alternative; that is, making an evaluation
- D. Identifying the problem

Choose the **correct** answer from the options given below:

- 1. D, B, A, C
- 2. D, B, C, A
- 3. D, A, B, C
- 4. D, C, A, B

A1 : 1

A2 : 2

A3 : 3

A4 : 4



Objective Question

81	2481	Which of the following is a mineral stain? 1. Ink 2. Grass 3. Fruit juice 4. Blood A1 : 1 A2 : 2 A3 : 3 A4 : 4	4.0	1.00
----	------	--	-----	------

Objective Question

82	2482	<p>Natural plant fiber originating from leaf is:</p> <ol style="list-style-type: none"> 1. Coir 2. Sisal 3. Lyocell 4. Alpaca <p>A1 : 1</p> <p>A2 : 2</p> <p>A3 : 3</p> <p>A4 : 4</p>	4.0	1.00
----	------	---	-----	------

Objective Question

83	2483	<p>Which of the following is NOT the characteristic of weft knitting?</p> <ol style="list-style-type: none"> 1. Can be unravelled 2. May ladder 3. Knitting needles always work together as a unit 4. One continuous yarn forms courses across the width <p>A1 : 1</p> <p>A2 : 2</p> <p>A3 : 3</p> <p>A4 : 4</p>	4.0	1.00
----	------	---	-----	------

Objective Question

84	2484	Fabric that changes its colour on exposure to heat and light is: 1. Chambray 2. Chameleon 3. Charmeuse 4. Viyella A1 : 1 A2 : 2 A3 : 3 A4 : 4	4.0	1.00
----	------	---	-----	------


Objective Question

85	2485	Which of the following is a satin weave fabric? 1. Zibeline 2. Tweed 3. Sail Cloth 4. Taffeta A1 : 1 A2 : 2 A3 : 3 A4 : 4	4.0	1.00
----	------	---	-----	------

Objective Question				
--------------------	--	--	--	--

86	2486	<p>For a 5" thick mattress, the allowance for tucking in the sheet at each of the ends would be:</p> <ol style="list-style-type: none"> 1. 3" 2. 5" 3. 7" 4. 10" <p>A1 : 1</p> <p>A2 : 2</p> <p>A3 : 3</p> <p>A4 : 4</p>	4.0	1.00
----	------	--	-----	------


Objective Question

87	2487	<p>Carriers are used in the dyeing of:</p> <ol style="list-style-type: none"> 1. Silk 2. Wool 3. Nylon 4. Polyester  <p>A1 : 1</p> <p>A2 : 2</p> <p>A3 : 3</p> <p>A4 : 4</p>	4.0	1.00
----	------	---	-----	------

Objective Question

88	2488	<p>Which of the following motifs are used in Kasuti embroidery?</p> <ol style="list-style-type: none"> 1. Tulsi pot holders 2. Creepers 3. Intricate jali patterns 4. Weeping willow and pine <p>A1 : 1</p> <p>A2 : 2</p> <p>A3 : 3</p> <p>A4 : 4</p>	4.0	1.00
----	------	---	-----	------

Objective Question

89	2489	 <p>Which of the following group is the reactive group in cotton?</p> <ol style="list-style-type: none"> 1. Nitro group 2. Amino group 3. Carboxylic group 4. Hydroxyl group <p>A1 : 1</p> <p>A2 : 2</p> <p>A3 : 3</p> <p>A4 : 4</p>	4.0	1.00
----	------	---	-----	------

Objective Question

90	2490	<p>Traditional Indian textile ornamented with konia motif is:</p> <ol style="list-style-type: none"> 1. Kashida 2. Brocades 3. Jamdani 4. Patola <p>A1 : 1</p> <p>A2 : 2</p> <p>A3 : 3</p> <p>A4 : 4</p>	4.0	1.00
----	------	--	-----	------

Objective Question

91	2491	<p>Which of the following are the correct methods for straightening the fabrics?</p> <p>(A). Cutting along the pulled crosswise yarn along the width</p> <p>(B). Tearing the fabric across its width</p> <p>(C). Cutting the fabric along the woven stripe in the fabric</p> <p>(D). Cutting along the crosswise fold of the fabric</p> <p>Choose the correct answer from the options given below:</p> <ol style="list-style-type: none"> 1. (A), (B) and (C) only. 2. (A), (B) and (D) only. 3. (B), (C) and (D) only. 4. (A), (C) and (D) only. <p>A1 : 1</p> <p>A2 : 2</p> <p>A3 : 3</p> <p>A4 : 4</p>	4.0	1.00
----	------	--	-----	------

Objective Question

92	2492	<p>Fabric with high thread count is:</p> <p>(A). Water repellent</p> <p>(B). With better permeability</p> <p>(C). Fire retardant</p> <p>(D). With reduced seam ravelling</p> <p>(E). With increased seam ravelling</p> <p>Choose the correct answer from the options given below:</p> <ol style="list-style-type: none"> 1. (A), (B) and (D) only. 2. (A), (B) and (C) only. 3. (C), (D) and (E) only. 4. (A), (C) and (D) only. <p>A1 : 1</p> <p>A2 : 2</p> <p>A3 : 3</p> <p>A4 : 4</p>	4.0	1.00
----	------	---	-----	------

Objective Question

93	2493	<p>Fabrics / seams requiring short fine stitches are:</p> <p>(A). Curved seams</p> <p>(B). Used to control fullness</p> <p>(C). Bias and semi bias cut seams</p> <p>(D). Scallops</p> <p>(E). Bound buttonholes</p> <p>Choose the correct answer from the options given below:</p> <ol style="list-style-type: none"> 1. (A), (B), (C) and (D) only. 2. (A), (B), (D) and (E) only. 3. (A), (C), (D) and (E) only. 4. (B), (C), (D) and (E) only. <p>A1 : 1</p> <p>A2 : 2</p> <p>A3 : 3</p> <p>A4 : 4</p>	4.0	1.00
----	------	--	-----	------

Objective Question



94	2494	<p>Hygroscopic agents used as printing auxiliaries are:</p> <p>(A). Urea</p> <p>(B). Glycerin</p> <p>(C). Sodium lactate</p> <p>(D). Turkey red oil</p> <p>(E). Potassium ferrocyanide</p> <p>Choose the correct answer from the options given below:</p> <ol style="list-style-type: none"> 1. (A), (B) and (C) only. 2. (A), (B) and (D) only. 3. (C), (D) and (E) only. 4. (B), (C) and (D) only. <p>A1 : 1</p> <p>A2 : 2</p> <p>A3 : 3</p> <p>A4 : 4</p>	4.0	1.00
----	------	---	-----	------

Objective Question

95	2495	<p>Points that help in the selection of the correct sewing machine needle are:</p> <p>(A). Both thread and fabric should be kept in mind</p> <p>(B). Ball point needles can be used for all types of fabrics</p> <p>(C). The eye of the needle must be large enough</p> <p>(D). The needle blade must be fine</p> <p>(E). Wedge point needle is good for knits</p> <p>Choose the correct answer from the options given below:</p> <ol style="list-style-type: none"> 1. (A), (B) and (D) only. 2. (A), (B) and (C) only. 3. (A), (B) and (E) only. 4. (A), (C) and (D) only. <p>A1 : 1</p> <p>A2 : 2</p> <p>A3 : 3</p> <p>A4 : 4</p>	4.0	1.00
----	------	---	-----	------

Objective Question				
96	2496		4.0	1.00



Match **List I** with **List II**

List I	List II
(Terms)	(Association)
(A). Bandha	(I). Patola
(B). Lungi	(II). Pochampalli
(C). Devang weavers	(III). Single Ikat
(D). Salvi weavers	(IV). Telia Rumal

Choose the **correct** answer from the options given below:

1. (A) - (III), (B) - (IV), (C) - (II), (D) - (I)
2. (A) - (I), (B) - (II), (C) - (III), (D) - (IV)
3. (A) - (I), (B) - (II), (C) - (IV), (D) - (III)
4. (A) - (III), (B) - (IV), (C) - (I), (D) - (II)

A1 : 1

A2 : 2

A3 : 3

A4 : 4

Objective Question



97	2497	Match List I with List II	4.0	1.00												
		<table border="1"> <thead> <tr> <th>List I</th> <th>List II</th> </tr> <tr> <th>(Dyes)</th> <th>(Description)</th> </tr> </thead> <tbody> <tr> <td>(A). Acid</td> <td>(I). Use carriers like phenol</td> </tr> <tr> <td>(B). Azoic</td> <td>(II). Mark the birth of synthetic dye</td> </tr> <tr> <td>(C). Cationic</td> <td>(III). Ice colours</td> </tr> <tr> <td>(D). Disperse</td> <td>(IV). Used for protien fibers</td> </tr> </tbody> </table>	List I	List II	(Dyes)	(Description)	(A). Acid	(I). Use carriers like phenol	(B). Azoic	(II). Mark the birth of synthetic dye	(C). Cationic	(III). Ice colours	(D). Disperse	(IV). Used for protien fibers		
List I	List II															
(Dyes)	(Description)															
(A). Acid	(I). Use carriers like phenol															
(B). Azoic	(II). Mark the birth of synthetic dye															
(C). Cationic	(III). Ice colours															
(D). Disperse	(IV). Used for protien fibers															
		Choose the correct answer from the options given below:														
		<ol style="list-style-type: none"> (A) - (I), (B) - (II), (C) - (III), (D) - (IV) (A) - (I), (B) - (II), (C) - (IV), (D) - (III) (A) - (II), (B) - (I), (C) - (IV), (D) - (III) (A) - (IV), (B) - (III), (C) - (II), (D) - (I) 														
		A1 : 1														
		A2 : 2														
		A3 : 3														
		A4 : 4														



Objective Question

98	2498	<p>Given below are two statements, one is labelled as Assertion (A) and other one labelled as Reason (R).</p> <p>Assertion (A) : Rice water starch does not give sufficient stiffness with pliability.</p> <p>Reason (R) : The size of the grain is too small to make it a proper stiffening agent.</p> <p>In light of the above statements, choose the <i>correct</i> answer from the options given below.</p> <ol style="list-style-type: none"> Both (A) and (R) are true and (R) is the correct explanation of (A). Both (A) and (R) are false (A) is true but (R) is false. (A) is false but (R) is true. 	4.0	1.00
		A1 : 1		
		A2 : 2		
		A3 : 3		
		A4 : 4		

Objective Question

99 2499

Given below are two statements, one is labelled as Assertion (A) and other one labelled as Reason (R).

Assertion (A) : 'Cire' is a highly polished finish.

Reason (R) : It is achieved by impregnating the fabric with wheat starch under high temperature and pressure.

In light of the above statements, choose the *correct* answer from the options given below.

1. Both (A) and (R) are true and (R) is the correct explanation of (A).
2. Both (A) and (R) are true but (R) is NOT the correct explanation of (A).
3. (A) is true but (R) is false.
4. (A) is false but (R) is true.

A1 : 1

A2 : 2

A3 : 3

A4 : 4

4.0 1.00

Objective Question

100 2500

4.0 1.00

Given is the sequence of threading the sewing machine needle. Arrange them in the correct order.

- (A). Lead the thread from the spool pin through the thread guide on the arm of the machine
- (B). Lead the thread through the thread guide on the face plate
- (C). Lead the thread through the thread take up lever and thread guide
- (D). Pass the thread through the needle tension discs
- (E). Raise the thread take up lever to its highest point
- (F). Pass the thread through the needle and draw enough thread through its eye

Choose the **correct** answer from the options given below:

- 1. (A), (B), (C), (D), (F), (E).
- 2. (E), (A), (D), (B), (C), (F).
- 3. (B), (A), (D), (C), (F), (E).
- 4. (E), (F), (C), (B), (D), (A).

A1 : 1

A2 : 2

A3 : 3

A4 : 4



Objective Question

101	2501	<p>Which of the following is an important skill required for public communication?</p> <ol style="list-style-type: none"> 1. Pitch 2. Volume 3. Prononciation 4. Eye Contact <p>A1 : 1</p> <p>A2 : 2</p> <p>A3 : 3</p> <p>A4 : 4</p>	4.0	1.00
-----	------	--	-----	------

Objective Question

102	2502	<p>Achieving Sustainable Development Goal that deals with clean water and sanitation is</p> <ol style="list-style-type: none"> 1. SDG 2 2. SDG 4 3. SDG 6 4. SDG 8 <p>A1 : 1</p> <p>A2 : 2</p> <p>A3 : 3</p> <p>A4 : 4</p>	4.0	1.00
-----	------	--	-----	------

Objective Question

103	2503	<p>Gatekeepers are important in which of the following types of communication?</p> <ol style="list-style-type: none"> 1. Intrapersonal 2. Interpersonal 3. Dyadic Communication 4. Mass Communication <p>A1 : 1</p> <p>A2 : 2</p> <p>A3 : 3</p> <p>A4 : 4</p>	4.0	1.00
-----	------	---	-----	------

Objective Question

104	2504	<p>The deliberate attempt by a person to modify the behaviour of another person or a group is called-</p> <ol style="list-style-type: none"> 1. Perception 2. Empathy 3. Engagement 4. Persuasion <p>A1 : 1</p> <p>A2 : 2</p> <p>A3 : 3</p> <p>A4 : 4</p>	4.0	1.00
-----	------	---	-----	------

Objective Question

105	2505	<p>73rd and 74th amendments in the Indian constitution are known for -</p> <ol style="list-style-type: none"> 1. Farmer's welfare 2. Political reservation of women 3. Women Domestic Workers 4. Women's employment in Public sector <p>A1 : 1</p> <p>A2 : 2</p> <p>A3 : 3</p>	4.0	1.00
-----	------	--	-----	------

A4 : 4

Objective Question

106	2506	<p>Which of the following category of adopters, adopt a new technology before the majority of the population does?</p> <ol style="list-style-type: none">1. Early Majority2. Early Adopters3. Laggards4. Visionaries <p>A1 : 1</p> <p>A2 : 2</p> <p>A3 : 3</p> <p>A4 : 4</p>	4.0	1.00
-----	------	---	-----	------

Objective Question

107	2507	<p>Which one of the following is a salient feature of the traditional folk media?</p> <ol style="list-style-type: none">1. Fast speed to reach mass audiences2. TV is the key medium3. Reliance on Electronic media4. Preservation of local cultures <p>A1 : 1</p> <p>A2 : 2</p> <p>A3 : 3</p> <p>A4 : 4</p>	4.0	1.00
-----	------	---	-----	------

Objective Question

108	2508	<p>As a part of which government programme, were ASHAs appointed?</p> <ol style="list-style-type: none"> 1. ICDS 2. MDM 3. NRHM 4. NRLM <p>A1 : 1</p> <p>A2 : 2</p> <p>A3 : 3</p> <p>A4 : 4</p>	4.0	1.00
-----	------	---	-----	------

Objective Question

109	2509	<p>Training and Visit system for Extension services was started in which year?</p> <ol style="list-style-type: none"> 1. 1970 2. 1979 3. 1982 4. 1992 <p>A1 : 1</p> <p>A2 : 2</p> <p>A3 : 3</p> <p>A4 : 4</p>	4.0	1.00
-----	------	---	-----	------

Objective Question

110	2510	<p>'Situation analysis' in Extension Programme Planning involves</p> <ol style="list-style-type: none"> 1. Fixing goals and objectives 2. Planning and implementing activities 3. Collection, analysis and interpretation of existing facts 4. Defining frame of reference <p>A1 : 1</p> <p>A2 : 2</p> <p>A3 : 3</p> <p>A4 : 4</p>	4.0	1.00
-----	------	--	-----	------

Objective Question

111	2511	<p>The concept of Extension includes-</p> <p>(A) People are the greatest assets</p> <p>(B). Using skills of trained specialists</p> <p>(C). It is a cooperative effort</p> <p>(D). It is indifferent to culture</p> <p>Choose the correct answer from the options given below:</p> <ol style="list-style-type: none"> 1. (A), (B) and (C) only. 2. (A), (B) and (D) only. 3. (A), (B), (C) and (D). 4. (B), (C) and (D) only. <p>A1 : 1</p> <p>A2 : 2</p> <p>A3 : 3</p> <p>A4 : 4</p>	4.0	1.00
-----	------	--	-----	------

Objective Question

112	2512	<p>Which of the following methods are suitable for eliciting opinions of illiterate women?</p> <p>(A). Group Discussion</p> <p>(B). Lecture Method</p> <p>(C). Role Play</p> <p>(D). Case Study</p> <p>Choose the correct answer from the options given below:</p> <ol style="list-style-type: none"> 1. (A), (B) and (C) only. 2. (A), (C) and (D) only. 3. (A), (B), (C) and (D). 4. (B), (C) and (D) only. <p>A1 : 1</p> <p>A2 : 2</p> <p>A3 : 3</p> <p>A4 : 4</p>	4.0	1.00
-----	------	--	-----	------

Objective Question

113	2513	<p>Effective use of PLA techniques involves-</p> <p>(A). Attitude change of the stakeholders</p> <p>(B). Unlearning</p> <p>(C). Top Down Approach</p> <p>(D). Bottom Up Approach</p> <p>Choose the correct answer from the options given below:</p> <ol style="list-style-type: none"> 1. (A), (B) and (C) only. 2. (A), (B) and (D) only. 3. (A), (B), (C) and (D). 4. (B), (C) and (D) only. <p>A1 : 1</p> <p>A2 : 2</p> <p>A3 : 3</p> <p>A4 : 4</p>	4.0	1.00
-----	------	---	-----	------

Objective Question

114 2514

4.0 1.00

Dimensions of a good message are-

- (A). Code
- (B). Character
- (C). Content
- (D). Treatment
- (E). Transmission

Choose the **correct** answer from the options given below:

1. (A), (B) and (C) only.
2. (A), (C) and (D) only.
3. (A), (B), (C) and (D).
4. (B), (C) and (E) only.

A1 : 1

A2 : 2

A3 : 3

A4 : 4

Objective Question



115	2515	<p>Receivers of a message in an extension situation must possess-</p> <p>(A). Positive attitude</p> <p>(B). Good listening skills</p> <p>(C). Good writing skills</p> <p>(D). Empathy</p> <p>Choose the correct answer from the options given below:</p> <ol style="list-style-type: none"> 1. (A), (B) and (C) only. 2. (A), (B) and (D) only. 3. (A), (B), (C) and (D). 4. (B), (C) and (D) only. <p>A1 : 1</p> <p>A2 : 2</p> <p>A3 : 3</p> <p>A4 : 4</p>	4.0	1.00
-----	------	--	-----	------

Objective Question

116	2516		4.0	1.00
-----	------	--	-----	------

		<p>Given below are two statements, one is labelled as Assertion (A) and other one labelled as Reason (R).</p> <p>Assertion (A) : Transfer of technology is important to fill the gap between technology generation and technology utilisation.</p> <p>Reason (R) : Technology transfer is no longer so important as most farmers in developing countries are able to keep pace with changing technology.</p> <p>In light of the above statements, choose the correct answer from the options given below.</p> <ol style="list-style-type: none"> 1. Both (A) and (R) are true and (R) is the correct explanation of (A). 2. Both (A) and (R) are true but (R) is NOT the correct explanation of (A). 3. (A) is true but (R) is false. 4. (A) is false but (R) is true. <p>A1 : 1</p> <p>A2 : 2</p> <p>A3 : 3</p> <p>A4 : 4</p>		
--	--	---	--	--

Objective Question

117 2517

4.0 1.00

Given below are two statements, one is labelled as Assertion (A) and other one labelled as Reason (R).

Assertion (A) : By providing credit and savings facilities to women, it is expected that women will be economically independent with increase in income level and control over the income.

Reason (R) : Providing only credit and saving facilities to women may not be enough. Literacy, sanitation, communication skills are important for holistic empowerment of women.

In light of the above statements, choose the *most appropriate* answer from the options given below .

1. Both (A) and (R) are correct and (R) is the correct explanation of (A).
2. Both (A) and (R) are correct but (R) is NOT the correct explanation of (A).
3. (A) is correct but (R) is not correct.
4. (A) is not correct but (R) is correct.

A1 : 1

A2 : 2

A3 : 3

A4 : 4

Objective Question

Match **List-I** with **List-II**

List-I	List-II
(Type of Audio Visual Aids)	(Examples)
(A). Non- Projected	(I). Films
(B). Two dimensional	(II). Model
(C). Three dimensional	(III). Poster
(D). Projected	(IV).Bulletin Board

Choose the **correct** answer from the options given below:

1. (A) - (IV), (B) - (III), (C) - (II), (D) - (I)
2. (A) - (I), (B) - (II), (C) - (III), (D) - (IV)
3. (A) - (III), (B) - (I), (C) - (II), (D) - (IV)
4. (A) - (IV), (B) - (III), (C) - (II), (D) - (I)

A1 : 1

A2 : 2

A3 : 3

A4 : 4

119 2519

4.0 1.00

Match **List-I** with **List-II**

List-I	List-II
(Development Programme)	(Key objective)
(A). MGNREGA	(I). Reduce Poverty
(B). JSY	(II).Improve Nutrition
(C). POSHAN	(III). Improve Sanitation
(D). SBM	(IV).Reduce Maternal Mortality

Choose the **correct** answer from the options given below:

- (A) - (I), (B) - (II), (C) - (III), (D) - (IV)
- (A) - (III), (B) - (II), (C) - (IV), (D) - (I)
- (A) - (IV), (B) - (III), (C) - (II), (D) - (I)
- (A) - (I), (B) - (IV), (C) - (II), (D) - (III)

A1 : 1

A2 : 2

A3 : 3

A4 : 4

Objective Question

120 2520

4.0 1.00

Arrange the following steps in a correct sequence for using seasonal digramming technique in a community.

- Build rapport with the community members
- Identify community members who are willing to share their experiences
- Set the climate for discussion
- Meet the community

Choose the **correct** answer from the options given below:

- (A), (B), (C), (D).
- (D), (A), (B), (C).
- (B), (A), (D), (C).
- (C), (B), (D), (A).

A1 : 1

A2 : 2

A3 : 3

A4 : 4